



Use the block on the left to find the value of the set of blocks on the right.

Answers

1) = 1

1. _____

2) = 1

2. _____

3) = 1

3. _____

4) = 1

4. _____

5) = 1

5. _____

6) = 1

6. _____

7) = 1

7. _____

8) = 1

8. _____

9) = 1

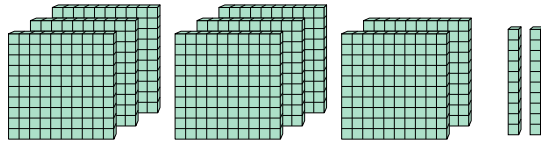
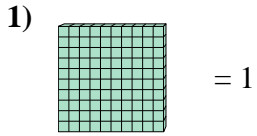
9. _____

10) = 1

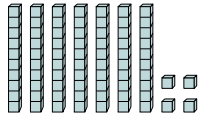
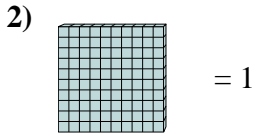
10. _____



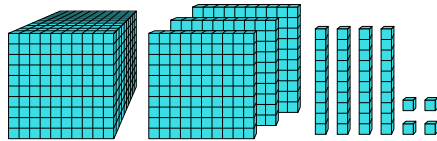
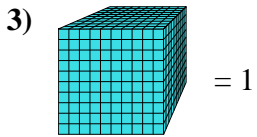
Use the block on the left to find the value of the set of blocks on the right.



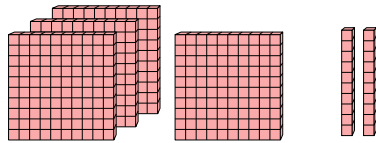
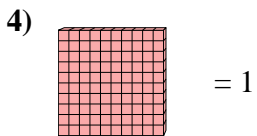
1. 8.2



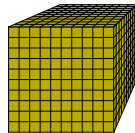
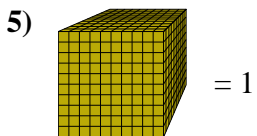
2. 0.74



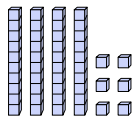
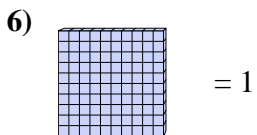
3. 1.344



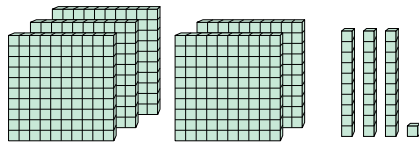
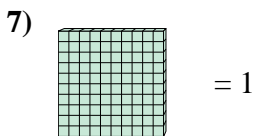
4. 4.2



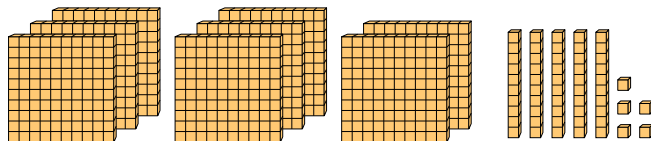
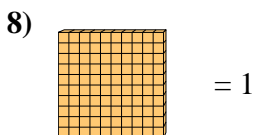
5. 1



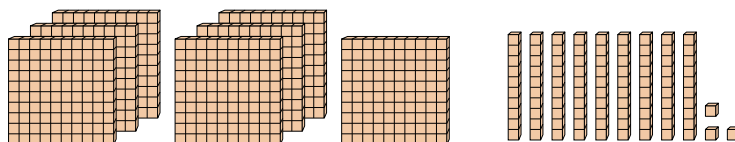
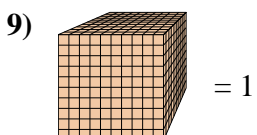
6. 0.46



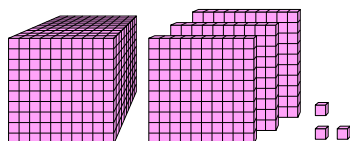
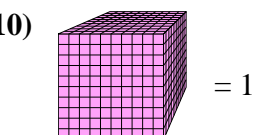
7. 5.31



8. 8.55



9. 0.793



10. 1.303

Answers