



Use the block on the left to find the value of the set of blocks on the right.

Answers

1) = 1

1. _____

2) = 1

2. _____

3) = 1

3. _____

4) = 1

4. _____

5) = 1

5. _____

6) = 1

6. _____

7) = 1

7. _____

8) = 1

8. _____

9) = 1

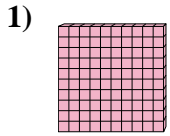
9. _____

10) = 1

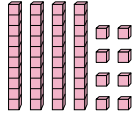
10. _____



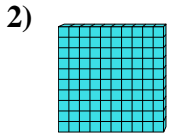
Use the block on the left to find the value of the set of blocks on the right.



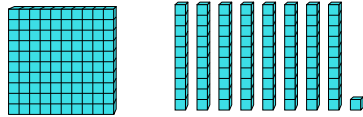
= 1



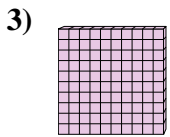
1. 0.48



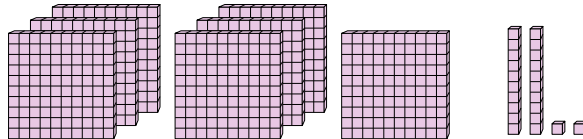
= 1



2. 1.81



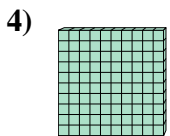
= 1



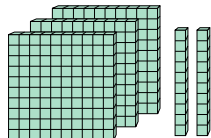
3. 7.22

4. 3.2

5. 1.087

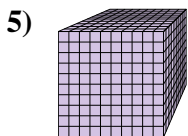


= 1

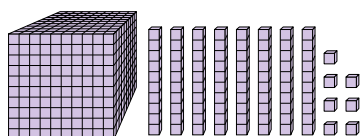


6. 1.16

7. 1.104

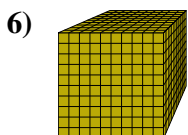


= 1

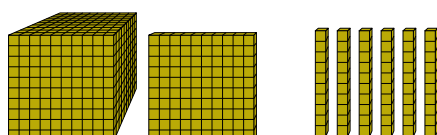


8. 8.47

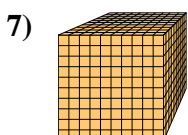
9. 1.93



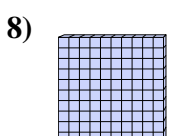
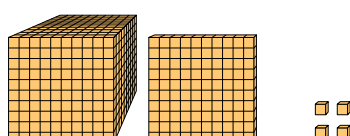
= 1



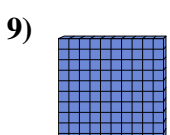
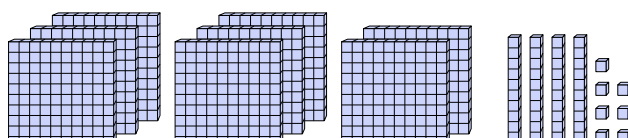
10. 0.74



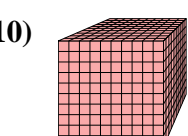
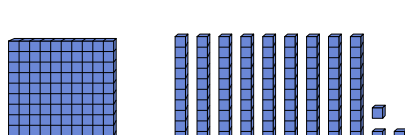
= 1



= 1



= 1



= 1

