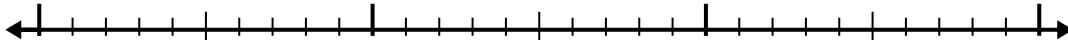


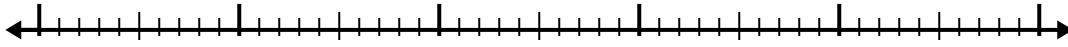


Use the number line to solve each problem.

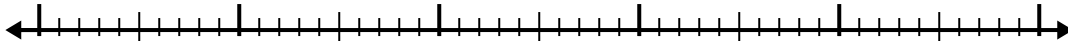
1)  $3.5 + 1.3 =$



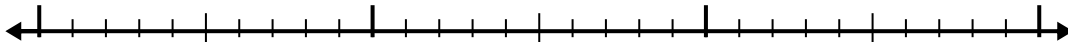
2)  $5.2 + 2.6 =$



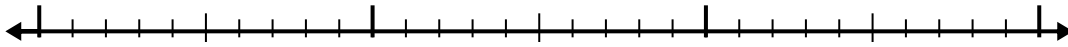
3)  $2.3 + 2.4 =$




4)  $5.2 + 1.2 =$



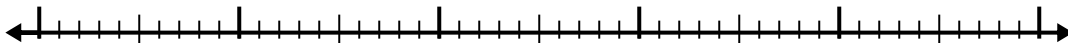
5)  $6.1 + 1.5 =$



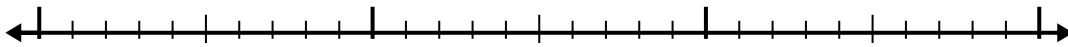
6)  $4.3 + 2.1 =$



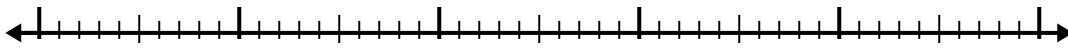
7)  $2.8 + 2.9 =$



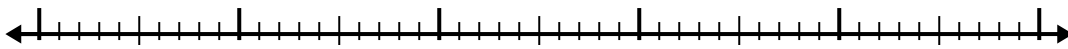
8)  $6.8 + 1.8 =$



9)  $3.5 + 2.6 =$



10)  $1.9 + 3.9 =$



Answers

1. \_\_\_\_\_

2. \_\_\_\_\_

3. \_\_\_\_\_

4. \_\_\_\_\_

5. \_\_\_\_\_

6. \_\_\_\_\_

7. \_\_\_\_\_

8. \_\_\_\_\_


9. \_\_\_\_\_

10. \_\_\_\_\_

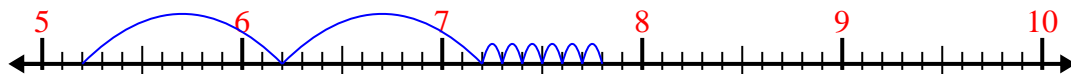


Use the number line to solve each problem.

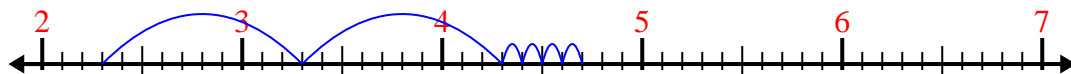
1)  $3.5 + 1.3 =$



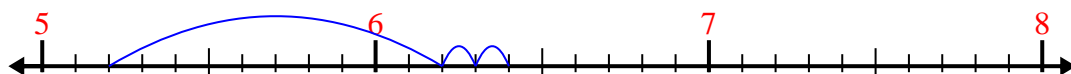
2)  $5.2 + 2.6 =$



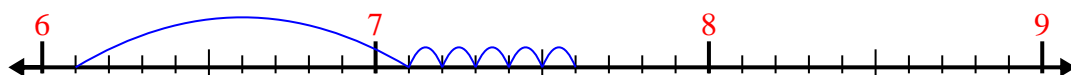
3)  $2.3 + 2.4 =$



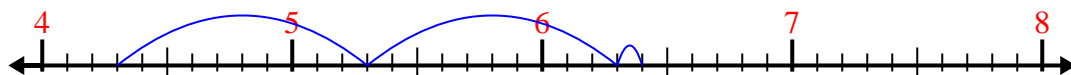
4)  $5.2 + 1.2 =$



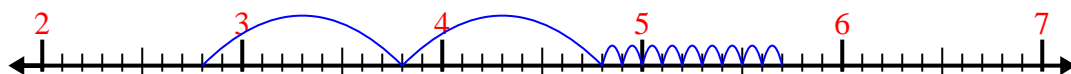
5)  $6.1 + 1.5 =$



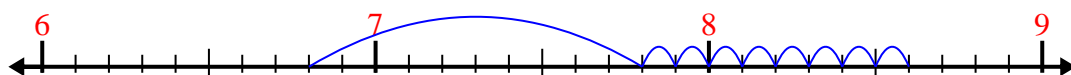
6)  $4.3 + 2.1 =$



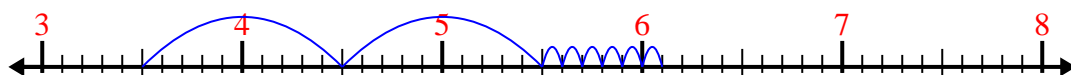
7)  $2.8 + 2.9 =$




8)  $6.8 + 1.8 =$



9)  $3.5 + 2.6 =$



10)  $1.9 + 3.9 =$



Answers

1. 4.8

2. 7.8

3. 4.7

4. 6.4

5. 7.6

6. 6.4

7. 5.7

8. 8.6

9. 6.1

10. 5.8