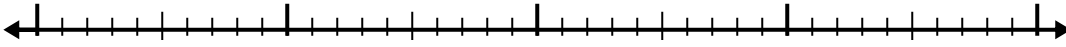




Use the number line to solve each problem.

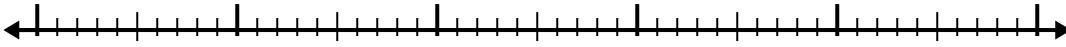
1) $7.4 + 2.2 =$



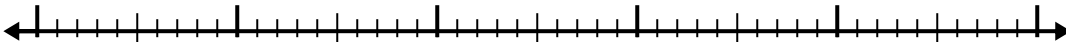
2) $5.4 + 2.3 =$



3) $4.7 + 2.9 =$



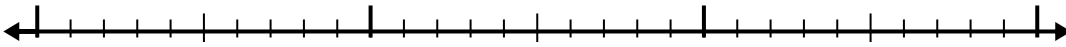
4) $4.4 + 3.7 =$



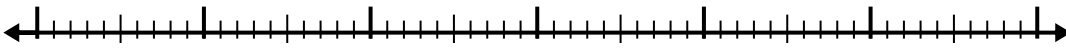
5) $2.2 + 2.3 =$



6) $3.9 + 1.3 =$



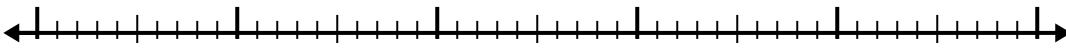
7) $1 + 3.9 =$



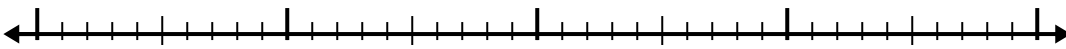
8) $5.8 + 2.1 =$



9) $6.3 + 2.3 =$



10) $7.3 + 2.9 =$



Answers

1. _____

2. _____

3. _____

4. _____

5. _____

6. _____

7. _____

8. _____

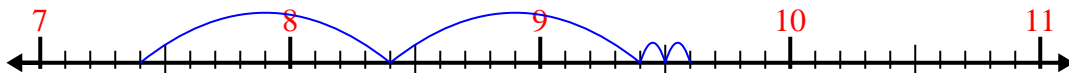
9. _____

10. _____

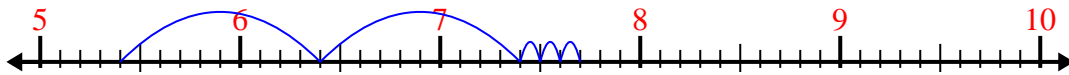


Use the number line to solve each problem.

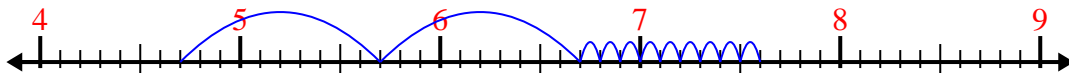
1) $7.4 + 2.2 =$



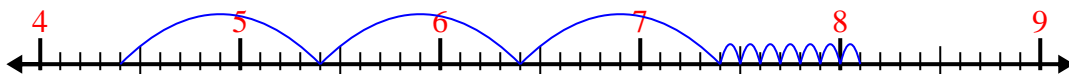
2) $5.4 + 2.3 =$



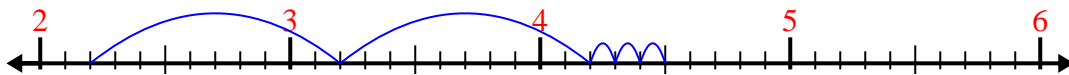
3) $4.7 + 2.9 =$



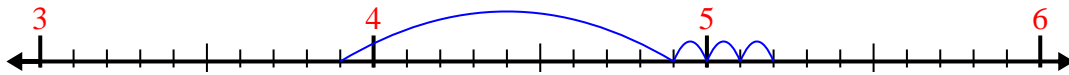
4) $4.4 + 3.7 =$



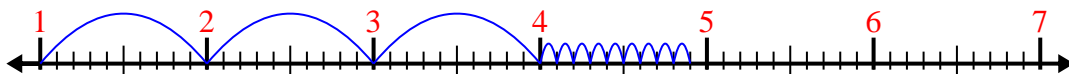
5) $2.2 + 2.3 =$



6) $3.9 + 1.3 =$



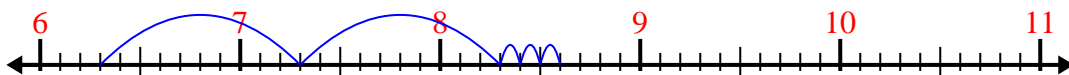
7) $1 + 3.9 =$



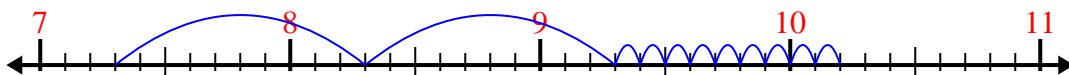
8) $5.8 + 2.1 =$



9) $6.3 + 2.3 =$



10) $7.3 + 2.9 =$



Answers

1. 9.6

2. 7.7

3. 7.6

4. 8.1

5. 4.5

6. 5.2

7. 4.9

8. 7.9

9. 8.6

10. 10.2