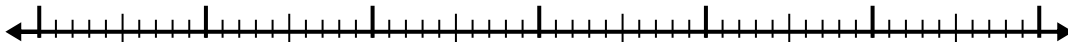


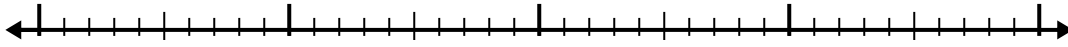


Use the number line to solve each problem.

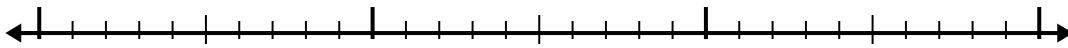
1) $2.1 + 3.4 =$



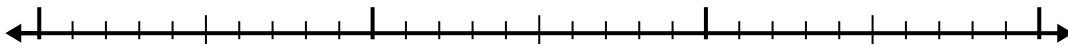
2) $2.5 + 2.1 =$



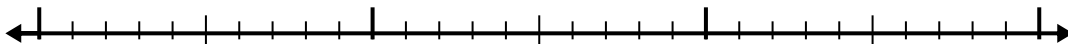
3) $6.9 + 1.2 =$



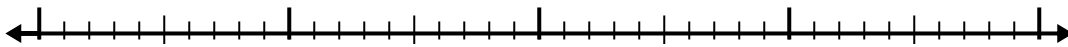
4) $6.8 + 1.3 =$



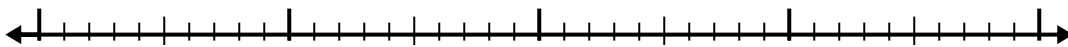
5) $7.1 + 1.8 =$



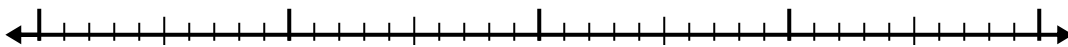
6) $3.8 + 2.1 =$



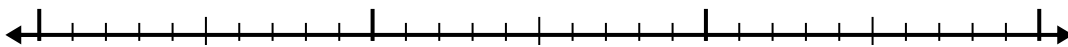
7) $7.2 + 2.1 =$



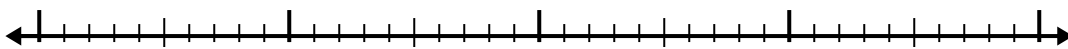
8) $6 + 1.8 =$



9) $4.5 + 1.1 =$



10) $3.3 + 2.7 =$



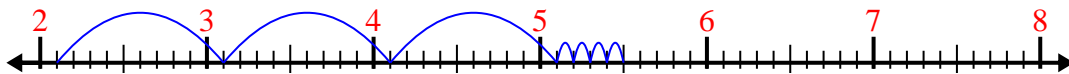
Answers

- 1. _____
- 2. _____
- 3. _____
- 4. _____
- 5. _____
- 6. _____
- 7. _____
- 8. _____
- 9. _____
- 10. _____

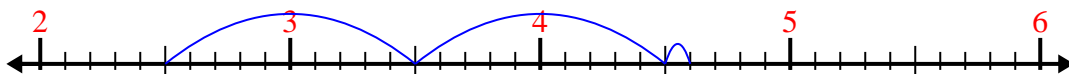


Use the number line to solve each problem.


1) $2.1 + 3.4 =$



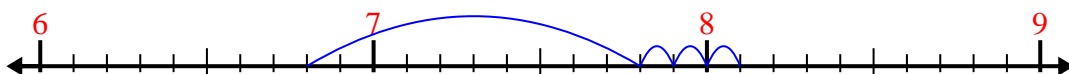
2) $2.5 + 2.1 =$



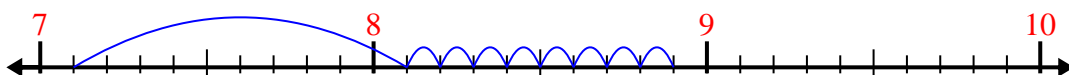
3) $6.9 + 1.2 =$



4) $6.8 + 1.3 =$



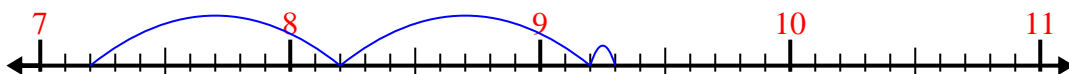
5) $7.1 + 1.8 =$



6) $3.8 + 2.1 =$



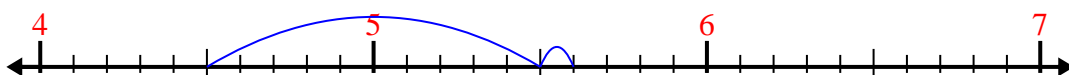
7) $7.2 + 2.1 =$



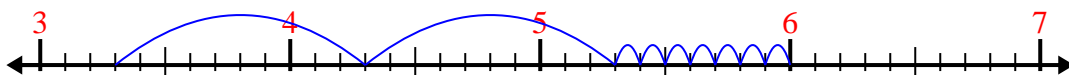
8) $6 + 1.8 =$



9) $4.5 + 1.1 =$



10) $3.3 + 2.7 =$



Answers

1. 5.5

2. 4.6

3. 8.1

4. 8.1

5. 8.9

6. 5.9

7. 9.3

8. 7.8

9. 5.6

10. 6.0