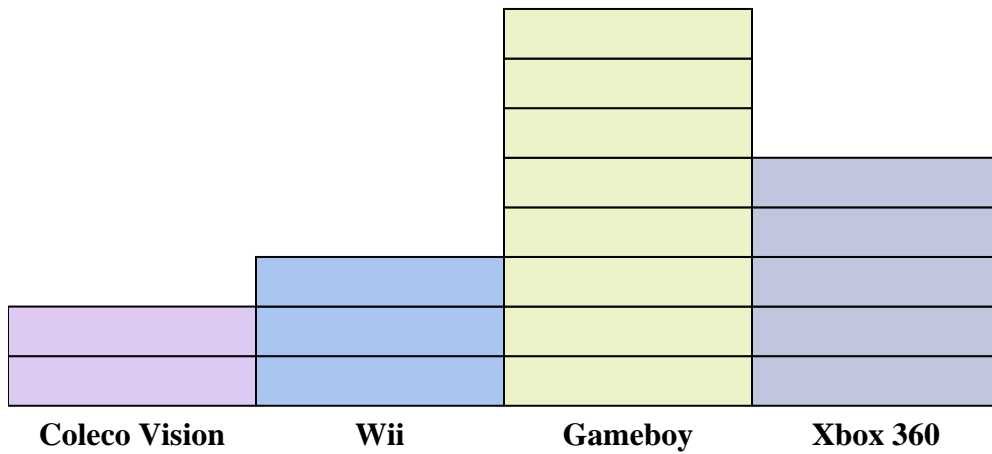
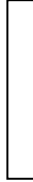




Solve each problem.



Each  = 2 people owned

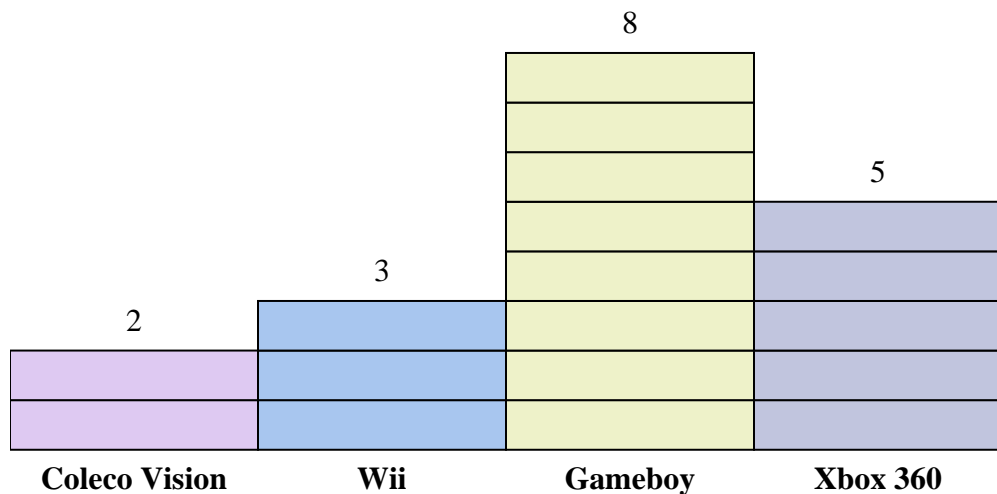
Answers

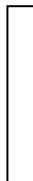
1. _____
2. _____
3. _____
4. _____
5. _____
6. _____
7. _____
8. _____
9. _____
10. _____

- 1) How many more people owned a Gameboy than owned a Xbox 360?
- 2) Which console did the largest number of people own?
- 3) Which console did the fewest number of people own?
- 4) How many consoles total did the people own?
- 5) Did fewer people own a Wiis or a Gameboys?
- 6) Did more people own a Xbox 360s or a Wiis?
- 7) Which console did exactly 6 people own?
- 8) How many people owned a Gameboy?
- 9) What is the combined number of Gameboys and Coleco Visions owned?
- 10) What is the difference in the number of people who owned a Coleco Vision and the number who owned a Wii?



Solve each problem.



Each  = 2 people owned

Answers

1. 6
2. Gameboy
3. Coleco Vision
4. 36
5. Wii
6. Xbox 360
7. Wii
8. 16
9. 20
10. 2

- 1) How many more people owned a Gameboy than owned a Xbox 360?
- 2) Which console did the largest number of people own?
- 3) Which console did the fewest number of people own?
- 4) How many consoles total did the people own?
- 5) Did fewer people own a Wiis or a Gameboys?
- 6) Did more people own a Xbox 360s or a Wiis?
- 7) Which console did exactly 6 people own?
- 8) How many people owned a Gameboy?
- 9) What is the combined number of Gameboys and Coleco Visions owned?
- 10) What is the difference in the number of people who owned a Coleco Vision and the number who owned a Wii?