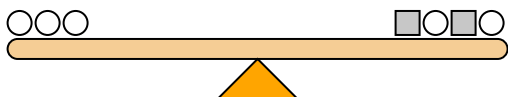




The scales below are balanced. Use the scales to answer each question.

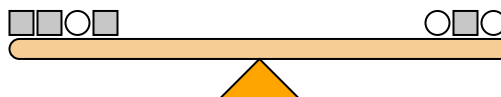
Answers

1)



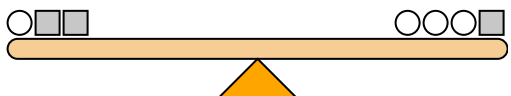
If you added 2 circles to the right side, how many squares would you have to add to the left side to keep it balanced?

2)



If you added 2 circles to the right side, how many squares would you have to add to the left side to keep it balanced?

3)



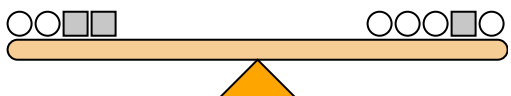
If you added 6 circles to the left side, how many squares would you have to add to the right side to keep it balanced?

4)



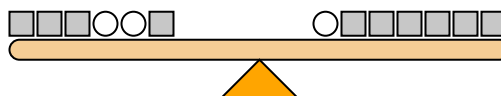
If you added 8 circles to the left side, how many squares would you have to add to the right side to keep it balanced?

5)



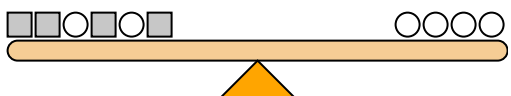
If you added 4 squares to the right side, how many circles would you have to add to the left side to keep it balanced?

6)



If you added 5 circles to the right side, how many squares would you have to add to the left side to keep it balanced?

7)



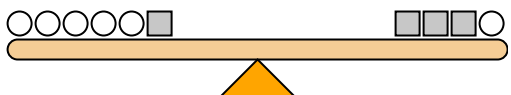
If you added 5 circles to the left side, how many squares would you have to add to the right side to keep it balanced?

8)



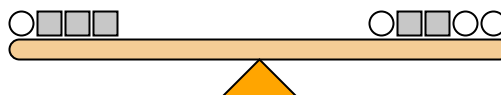
If you added 8 squares to the right side, how many circles would you have to add to the left side to keep it balanced?

9)



If you added 4 squares to the right side, how many circles would you have to add to the left side to keep it balanced?

10)



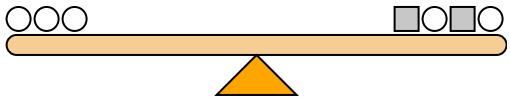
If you added 3 squares to the left side, how many circles would you have to add to the right side to keep it balanced?

1. _____
2. _____
3. _____
4. _____
5. _____
6. _____
7. _____
8. _____
9. _____
10. _____



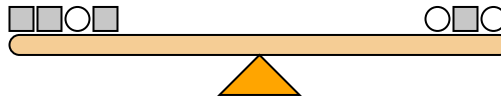
The scales below are balanced. Use the scales to answer each question.

1) $2+2+2 = 1+2+1+2$



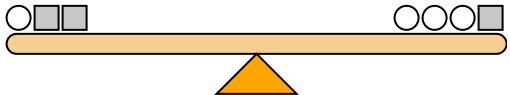
If you added 2 circles to the right side, how many squares would you have to add to the left side to keep it balanced?

2) $1+1+2+1 = 2+1+2$



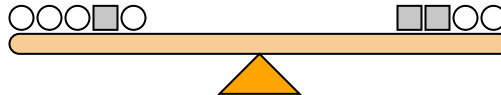
If you added 2 circles to the right side, how many squares would you have to add to the left side to keep it balanced?

3) $1+2+2 = 1+1+1+2$



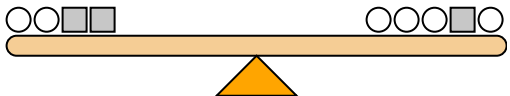
If you added 6 circles to the left side, how many squares would you have to add to the right side to keep it balanced?

4) $1+1+1+2+1 = 2+2+1+1$



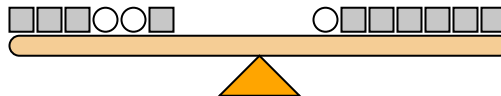
If you added 8 circles to the left side, how many squares would you have to add to the right side to keep it balanced?

5) $1+1+2+2 = 1+1+1+2+1$



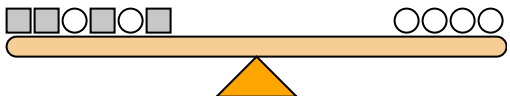
If you added 4 squares to the right side, how many circles would you have to add to the left side to keep it balanced?

6) $1+1+1+2+2+1 = 2+1+1+1+1+1$



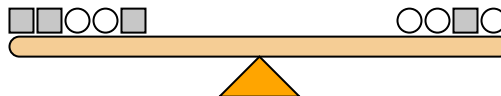
If you added 5 circles to the right side, how many squares would you have to add to the left side to keep it balanced?

7) $1+1+2+1+2+1 = 2+2+2+2$



If you added 5 circles to the left side, how many squares would you have to add to the right side to keep it balanced?

8) $1+1+2+2+1 = 2+2+1+2$



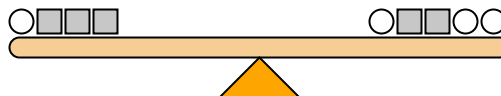
If you added 8 squares to the right side, how many circles would you have to add to the left side to keep it balanced?

9) $1+1+1+1+1+2 = 2+2+2+1$



If you added 4 squares to the right side, how many circles would you have to add to the left side to keep it balanced?

10) $1+2+2+2 = 1+2+2+1+1$



If you added 3 squares to the left side, how many circles would you have to add to the right side to keep it balanced?

Answers

1. **4**
2. **4**
3. **3**
4. **4**
5. **8**
6. **10**
7. **10**
8. **4**
9. **8**
10. **6**