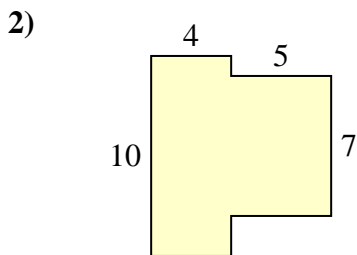
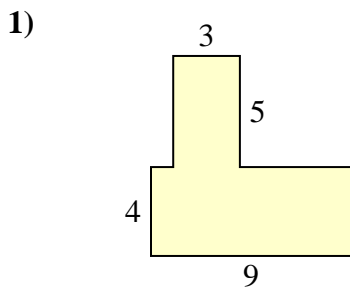


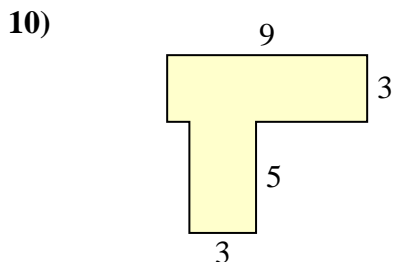
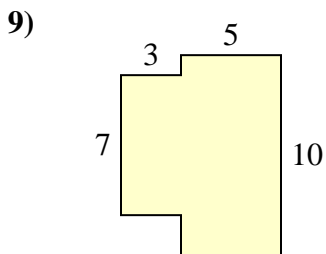
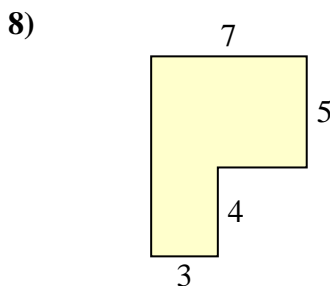
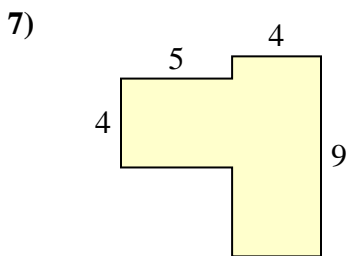
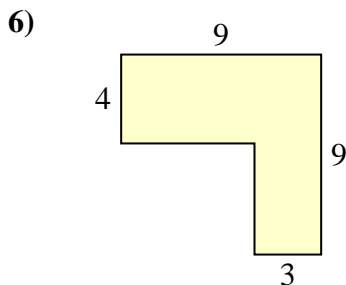
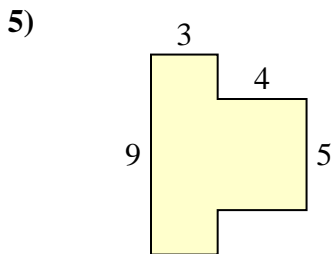
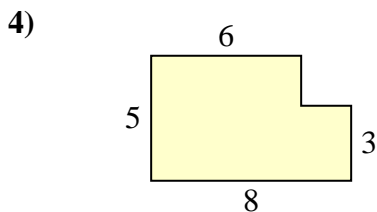
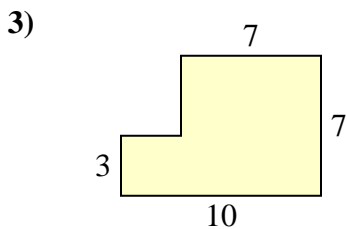


Find the total area of each shape. Measurement is in millimeters (mm). Not to scale.

Answers

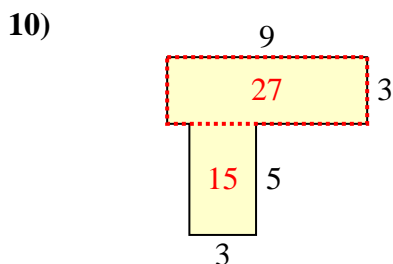
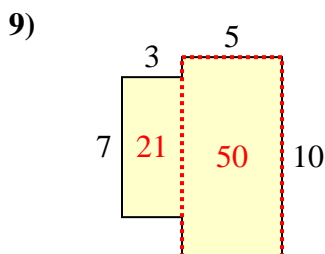
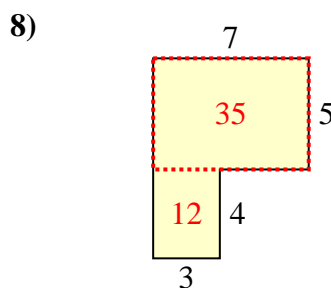
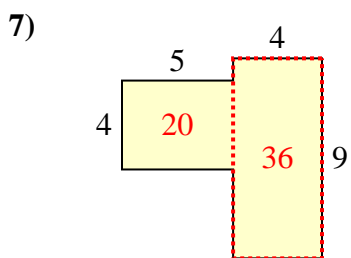
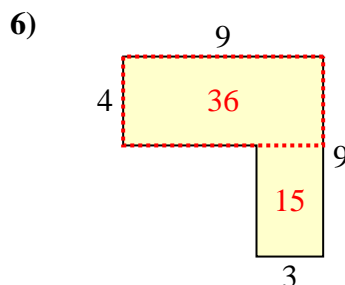
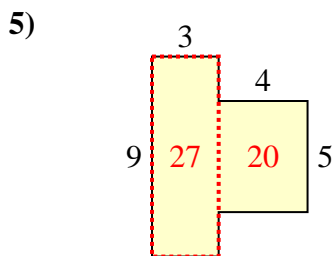
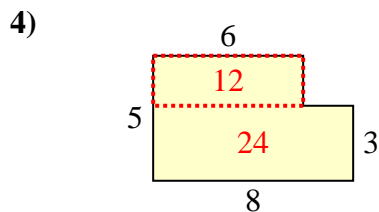
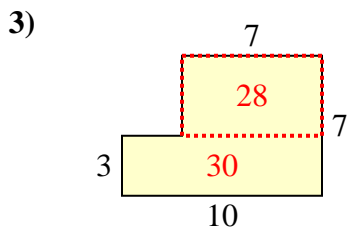
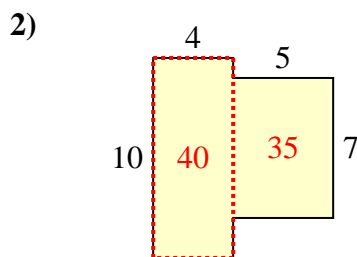
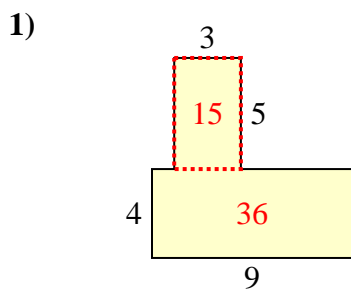


1. \_\_\_\_\_
2. \_\_\_\_\_
3. \_\_\_\_\_
4. \_\_\_\_\_
5. \_\_\_\_\_
6. \_\_\_\_\_
7. \_\_\_\_\_
8. \_\_\_\_\_
9. \_\_\_\_\_
10. \_\_\_\_\_





Find the total area of each shape. Measurement is in millimeters (mm). Not to scale.



Answers

1. 51 mm<sup>2</sup>
2. 75 mm<sup>2</sup>
3. 58 mm<sup>2</sup>
4. 36 mm<sup>2</sup>
5. 47 mm<sup>2</sup>
6. 51 mm<sup>2</sup>
7. 56 mm<sup>2</sup>
8. 47 mm<sup>2</sup>
9. 71 mm<sup>2</sup>
10. 42 mm<sup>2</sup>