




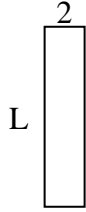
Determine the value of 'L'. Lengths are in cm (not to scale).

Answers

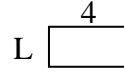
1) perimeter = 26



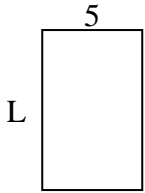
2) perimeter = 22



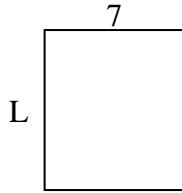
3) perimeter = 12



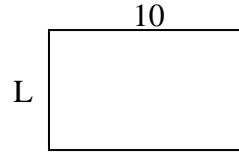
4) perimeter = 26



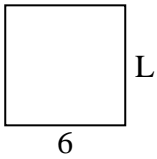
5) perimeter = 30



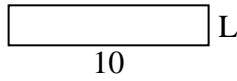
6) perimeter = 32



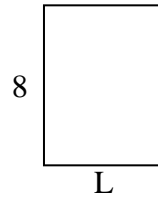
7) perimeter = 24



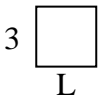
8) perimeter = 24



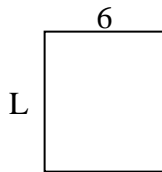
9) perimeter = 28



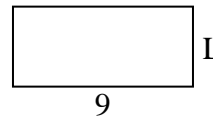
10) perimeter = 12




11) perimeter = 26



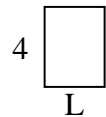
12) perimeter = 26



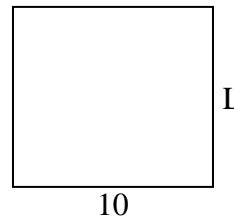
13) perimeter = 20



14) perimeter = 14



15) perimeter = 38

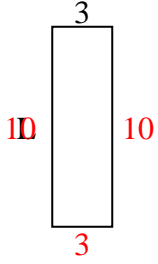


1. _____
2. _____
3. _____
4. _____
5. _____
6. _____
7. _____
8. _____
9. _____
10. _____
11. _____
12. _____
13. _____
14. _____
15. _____

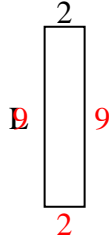


Determine the value of 'L'. Lengths are in cm (not to scale).

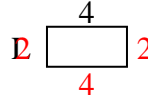
1) perimeter = 26



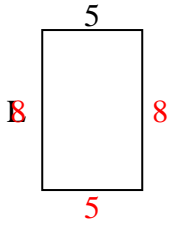
2) perimeter = 22



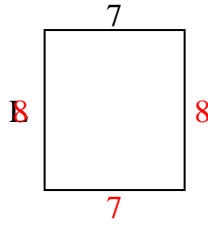
3) perimeter = 12



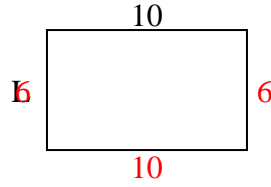
4) perimeter = 26



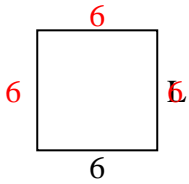
5) perimeter = 30



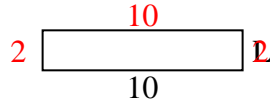
6) perimeter = 32



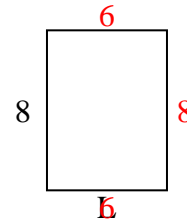
7) perimeter = 24



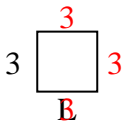
8) perimeter = 24



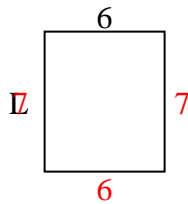
9) perimeter = 28



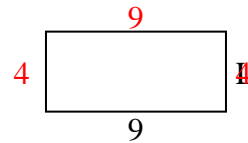
10) perimeter = 12



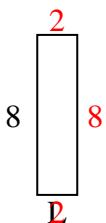
11) perimeter = 26



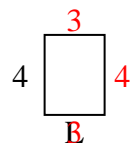
12) perimeter = 26



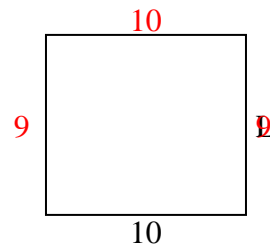
13) perimeter = 20



14) perimeter = 14



15) perimeter = 38



Answers

1. 10 cm

2. 9 cm

3. 2 cm

4. 8 cm

5. 8 cm

6. 6 cm

7. 6 cm

8. 2 cm

9. 6 cm

10. 3 cm

11. 7 cm

12. 4 cm

13. 2 cm

14. 3 cm

15. 9 cm