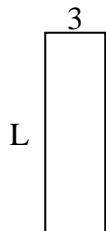




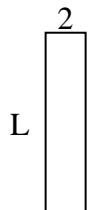
Determine the value of 'L'.

Answers

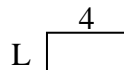
1) Area =  $30u^2$



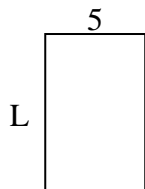
2) Area =  $18u^2$



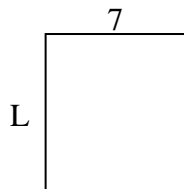
3) Area =  $8u^2$



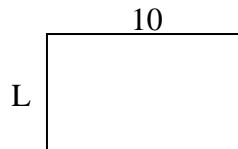
4) Area =  $40u^2$



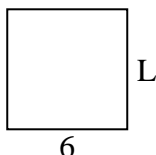
5) Area =  $56u^2$



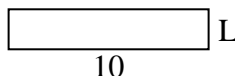
6) Area =  $60u^2$



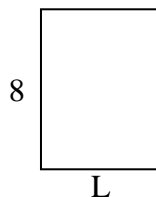
7) Area =  $36u^2$



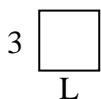
8) Area =  $20u^2$



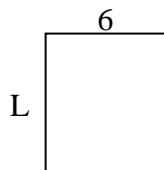
9) Area =  $48u^2$



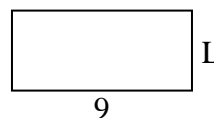
10) Area =  $9u^2$



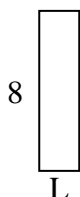
11) Area =  $42u^2$



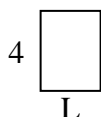
12) Area =  $36u^2$



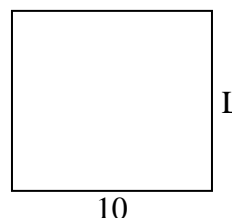
13) Area =  $16u^2$



14) Area =  $12u^2$



15) Area =  $90u^2$

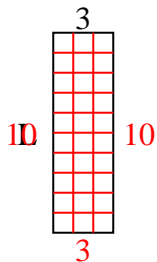


1. \_\_\_\_\_
2. \_\_\_\_\_
3. \_\_\_\_\_
4. \_\_\_\_\_
5. \_\_\_\_\_
6. \_\_\_\_\_
7. \_\_\_\_\_
8. \_\_\_\_\_
9. \_\_\_\_\_
10. \_\_\_\_\_
11. \_\_\_\_\_
12. \_\_\_\_\_
13. \_\_\_\_\_
14. \_\_\_\_\_
15. \_\_\_\_\_

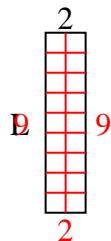


Determine the value of 'L'.

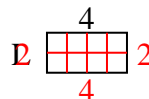
1) Area =  $30u^2$



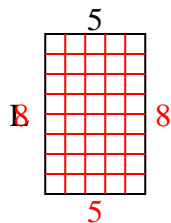
2) Area =  $18u^2$



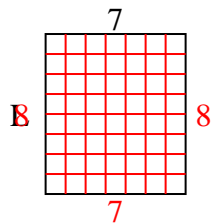
3) Area =  $8u^2$



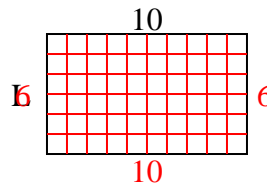
4) Area =  $40u^2$



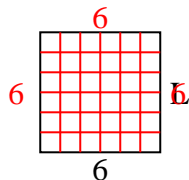
5) Area =  $56u^2$



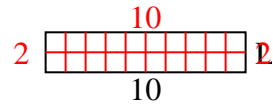
6) Area =  $60u^2$



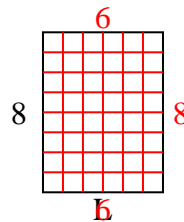
7) Area =  $36u^2$



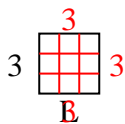
8) Area =  $20u^2$



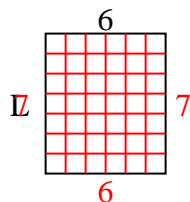
9) Area =  $48u^2$



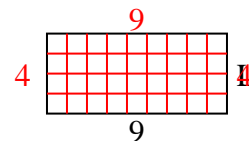
10) Area =  $9u^2$



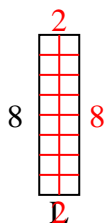
11) Area =  $42u^2$



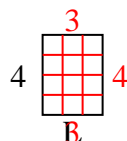
12) Area =  $36u^2$



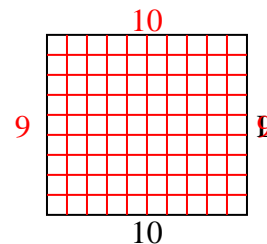
13) Area =  $16u^2$



14) Area =  $12u^2$



15) Area =  $90u^2$



Answers

1. 10

2. 9

3. 2

4. 8

5. 8

6. 6

7. 6

8. 2

9. 6

10. 3

11. 7

12. 4

13. 2

14. 3

15. 9