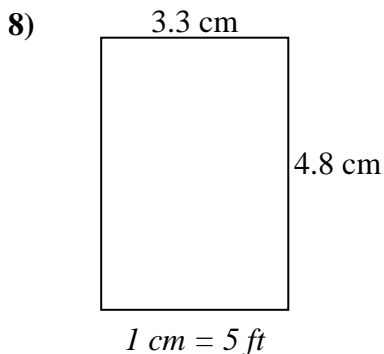
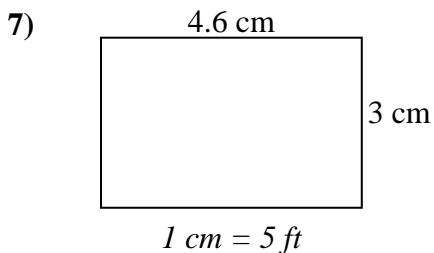
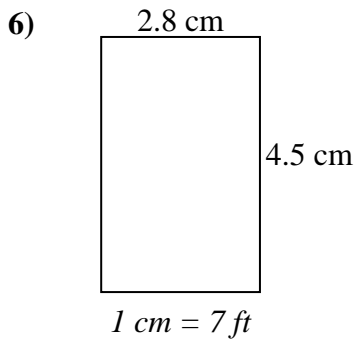
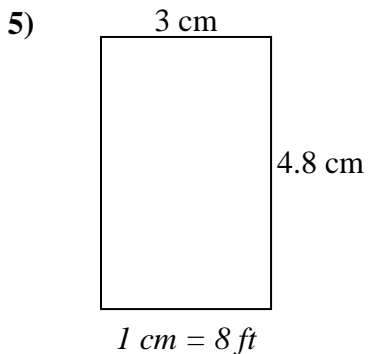
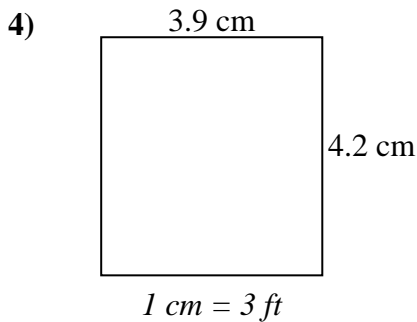
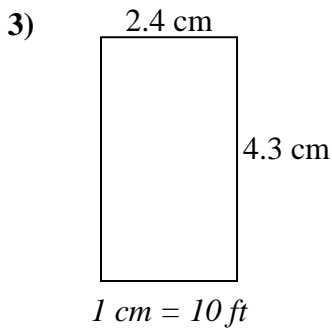
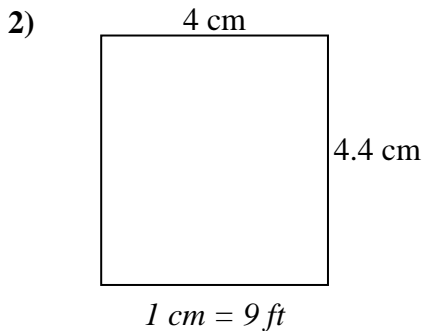
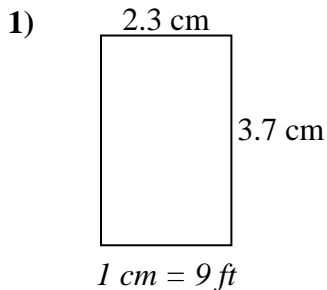




Determine the actual width, height and area of each scale rectangle.

Round the area to the nearest whole number.



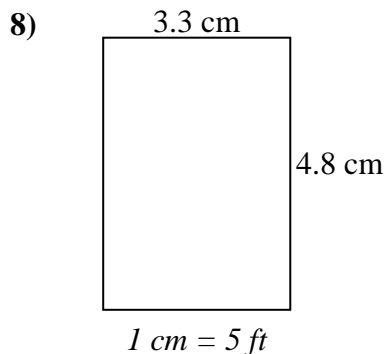
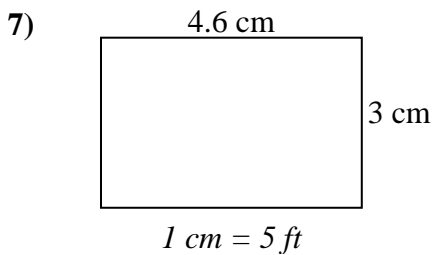
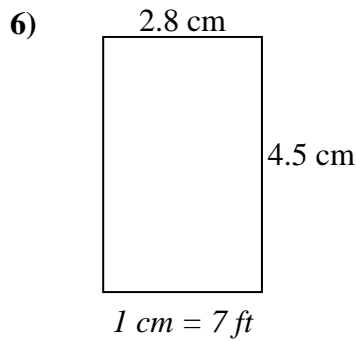
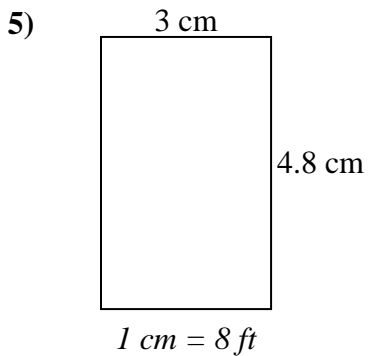
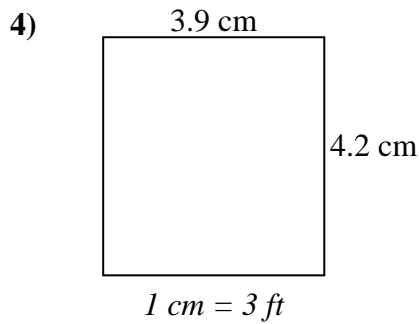
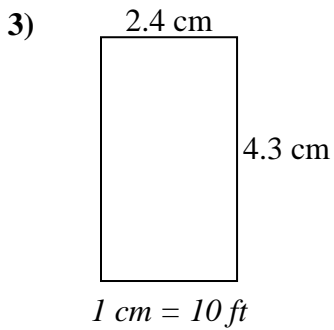
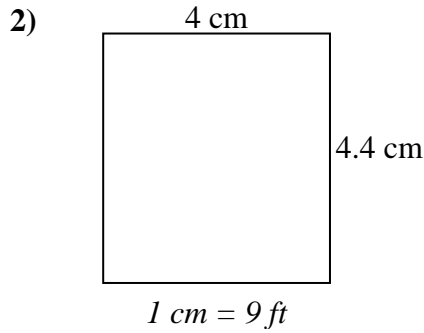
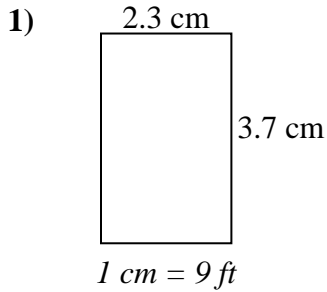
Answers

1. \_\_\_\_\_
2. \_\_\_\_\_
3. \_\_\_\_\_
4. \_\_\_\_\_
5. \_\_\_\_\_
6. \_\_\_\_\_
7. \_\_\_\_\_
8. \_\_\_\_\_



Determine the actual width, height and area of each scale rectangle.

Round the area to the nearest whole number.



Answers

- |    |             |             |              |
|----|-------------|-------------|--------------|
| 1. | <u>20.7</u> | <u>33.3</u> | <u>689</u>   |
| 2. | <u>36</u>   | <u>39.6</u> | <u>1,426</u> |
| 3. | <u>24</u>   | <u>43</u>   | <u>1,032</u> |
| 4. | <u>11.7</u> | <u>12.6</u> | <u>147</u>   |
| 5. | <u>24</u>   | <u>38.4</u> | <u>922</u>   |
| 6. | <u>19.6</u> | <u>31.5</u> | <u>617</u>   |
| 7. | <u>23</u>   | <u>15</u>   | <u>345</u>   |
| 8. | <u>16.5</u> | <u>24</u>   | <u>396</u>   |