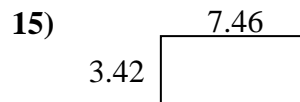
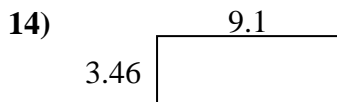
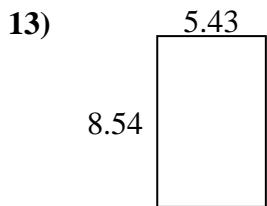
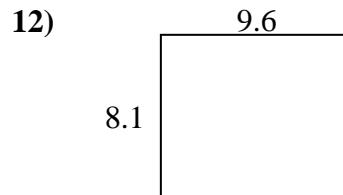
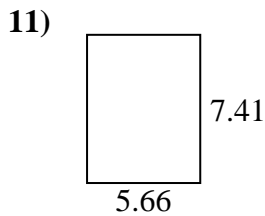
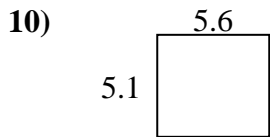
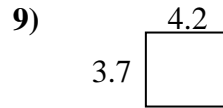
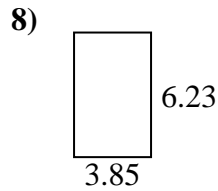
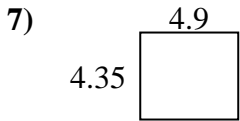

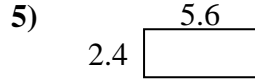
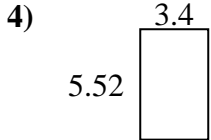
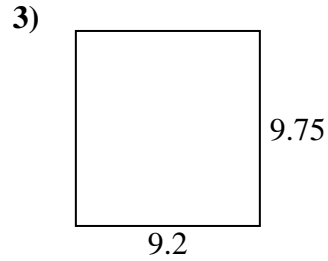
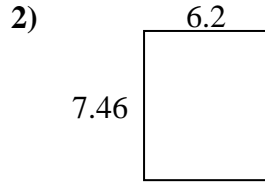
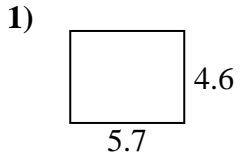




Find the perimeter and area of each figure. Answer to the nearest 10th.

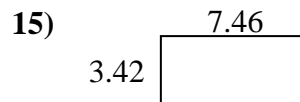
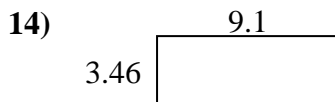
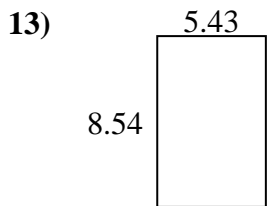
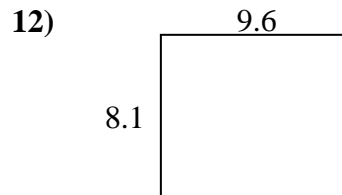
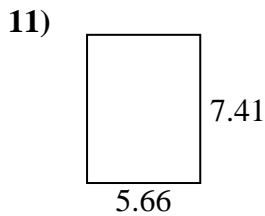
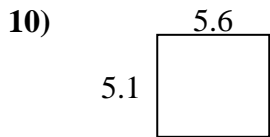
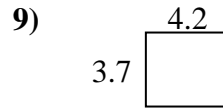
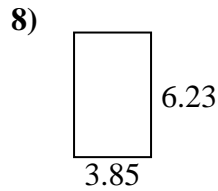
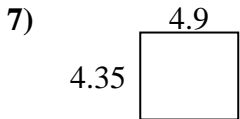

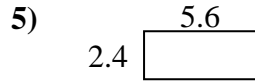
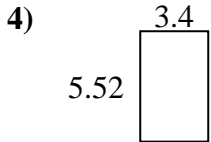
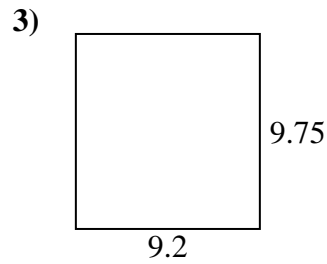
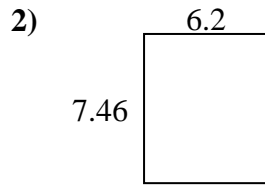
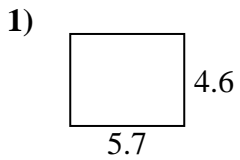


Answers

1. _____
2. _____
3. _____
4. _____
5. _____
6. _____
7. _____
8. _____
9. _____
10. _____
11. _____
12. _____
13. _____
14. _____
15. _____



Find the perimeter and area of each figure. Answer to the nearest 10th.



Answers

| | | |
|-----|-------------|-------------|
| 1. | <u>26.2</u> | <u>20.6</u> |
| 2. | <u>46.3</u> | <u>27.3</u> |
| 3. | <u>89.7</u> | <u>37.9</u> |
| 4. | <u>18.8</u> | <u>17.8</u> |
| 5. | <u>13.4</u> | <u>16.0</u> |
| 6. | <u>13.7</u> | <u>16.9</u> |
| 7. | <u>21.3</u> | <u>18.5</u> |
| 8. | <u>24.0</u> | <u>20.2</u> |
| 9. | <u>15.5</u> | <u>15.8</u> |
| 10. | <u>28.6</u> | <u>21.4</u> |
| 11. | <u>41.9</u> | <u>26.1</u> |
| 12. | <u>77.8</u> | <u>35.4</u> |
| 13. | <u>46.4</u> | <u>27.9</u> |
| 14. | <u>31.5</u> | <u>25.1</u> |
| 15. | <u>25.5</u> | <u>21.8</u> |