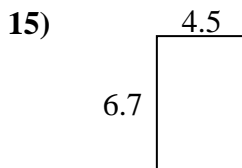
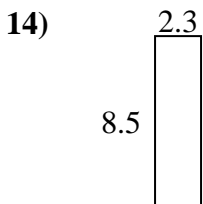
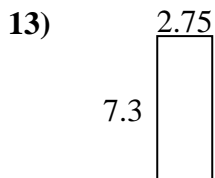
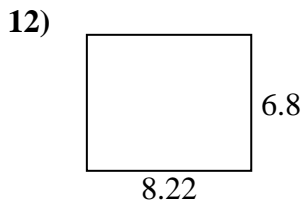
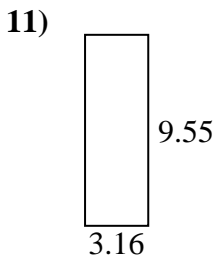
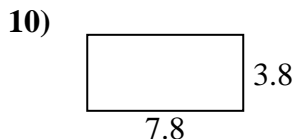
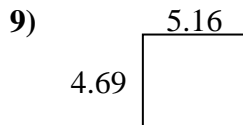
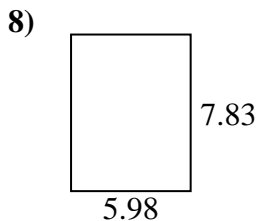
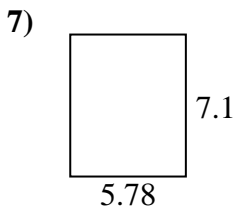
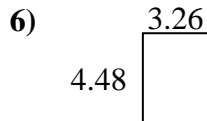
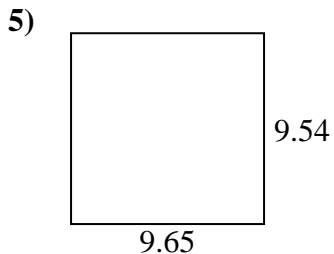
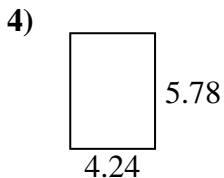
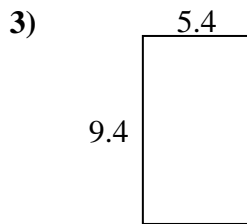
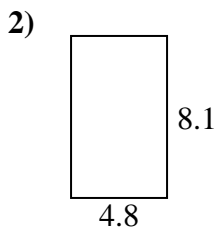
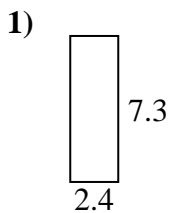




Find the perimeter and area of each figure. Answer to the nearest 10th.

Answers



1. \_\_\_\_\_

2. \_\_\_\_\_

3. \_\_\_\_\_

4. \_\_\_\_\_

5. \_\_\_\_\_

6. \_\_\_\_\_

7. \_\_\_\_\_

8. \_\_\_\_\_

9. \_\_\_\_\_

10. \_\_\_\_\_

11. \_\_\_\_\_

12. \_\_\_\_\_

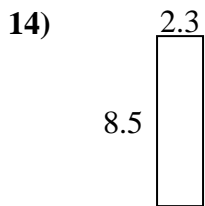
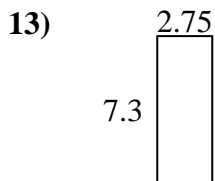
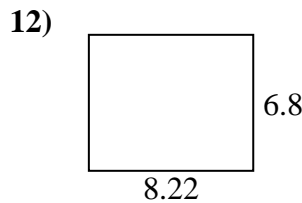
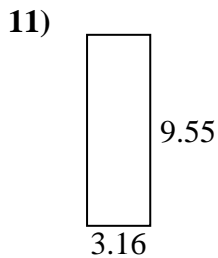
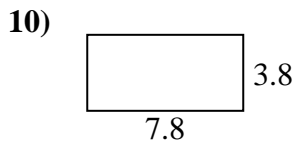
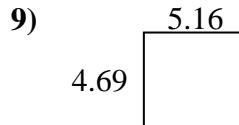
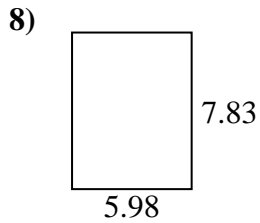
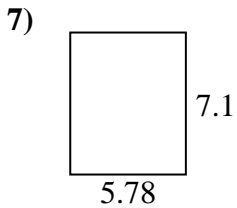
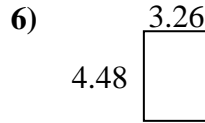
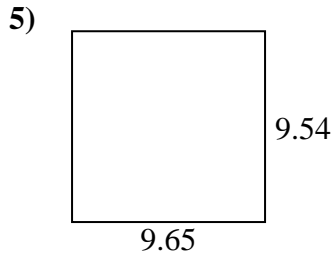
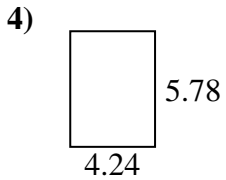
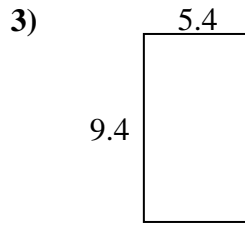
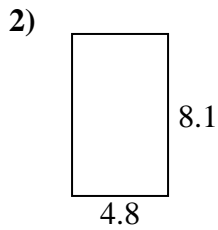
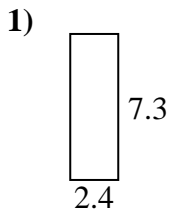
13. \_\_\_\_\_

14. \_\_\_\_\_

15. \_\_\_\_\_



Find the perimeter and area of each figure. Answer to the nearest 10th.



Answers

1.	<u>17.5</u>	<u>19.4</u>
2.	<u>38.9</u>	<u>25.8</u>
3.	<u>50.8</u>	<u>29.6</u>
4.	<u>24.5</u>	<u>20.0</u>
5.	<u>92.1</u>	<u>38.4</u>
6.	<u>14.6</u>	<u>15.5</u>
7.	<u>41.0</u>	<u>25.8</u>
8.	<u>46.8</u>	<u>27.6</u>
9.	<u>24.2</u>	<u>19.7</u>
10.	<u>29.6</u>	<u>23.2</u>
11.	<u>30.2</u>	<u>25.4</u>
12.	<u>55.9</u>	<u>30.0</u>
13.	<u>20.1</u>	<u>20.1</u>
14.	<u>19.6</u>	<u>21.6</u>
15.	<u>30.2</u>	<u>22.4</u>