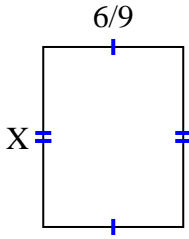


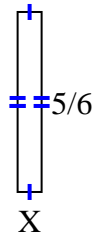


Find the value of X for each figure. Each figure is in centimeters (cm). Not to scale.

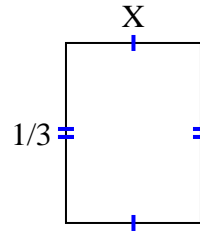
1) area = $\frac{36}{63} \text{ cm}^2$



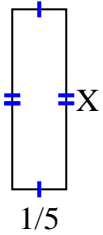
2) area = $\frac{5}{54} \text{ cm}^2$



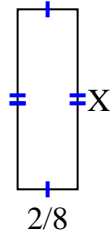
3) area = $\frac{1}{12} \text{ cm}^2$



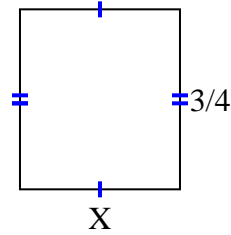
4) area = $\frac{4}{30} \text{ cm}^2$



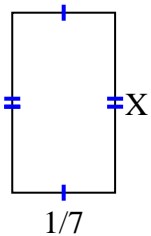
5) area = $\frac{6}{32} \text{ cm}^2$



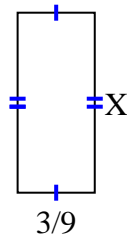
6) area = $\frac{6}{12} \text{ cm}^2$



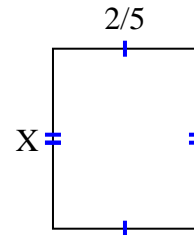
7) area = $\frac{2}{56} \text{ cm}^2$



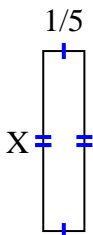
8) area = $\frac{21}{81} \text{ cm}^2$



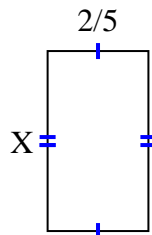
9) area = $\frac{4}{20} \text{ cm}^2$



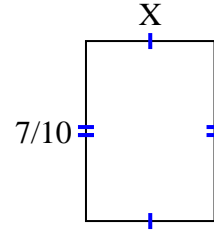
10) area = $\frac{7}{40} \text{ cm}^2$



11) area = $\frac{10}{35} \text{ cm}^2$



12) area = $\frac{7}{20} \text{ cm}^2$



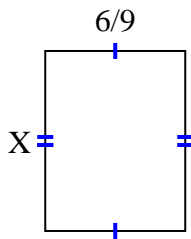
Answers

1. _____
2. _____
3. _____
4. _____
5. _____
6. _____
7. _____
8. _____
9. _____
10. _____
11. _____
12. _____

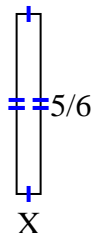


Find the value of X for each figure. Each figure is in centimeters (cm). Not to scale.

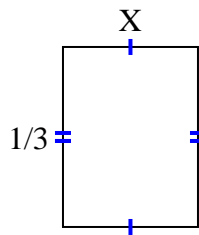
1) area = $\frac{36}{63} \text{ cm}^2$



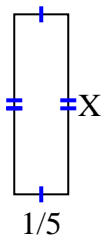
2) area = $\frac{5}{54} \text{ cm}^2$



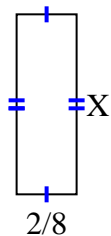
3) area = $\frac{1}{12} \text{ cm}^2$



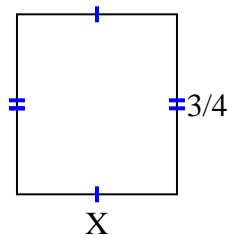
4) area = $\frac{4}{30} \text{ cm}^2$



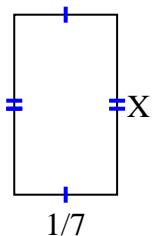
5) area = $\frac{6}{32} \text{ cm}^2$



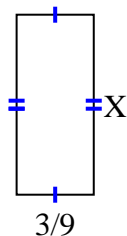
6) area = $\frac{6}{12} \text{ cm}^2$



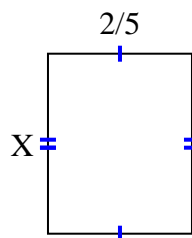
7) area = $\frac{2}{56} \text{ cm}^2$



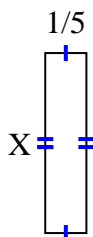
8) area = $\frac{21}{81} \text{ cm}^2$



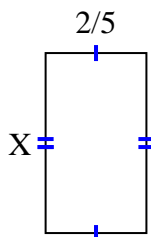
9) area = $\frac{4}{20} \text{ cm}^2$



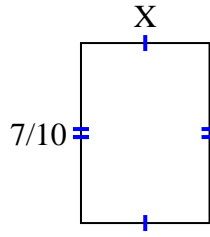
10) area = $\frac{7}{40} \text{ cm}^2$



11) area = $\frac{10}{35} \text{ cm}^2$



12) area = $\frac{7}{20} \text{ cm}^2$



Answers

1. $\frac{6}{7}$

2. $\frac{1}{9}$

3. $\frac{1}{4}$

4. $\frac{4}{6}$

5. $\frac{3}{4}$

6. $\frac{2}{3}$

7. $\frac{2}{8}$

8. $\frac{7}{9}$

9. $\frac{2}{4}$

10. $\frac{7}{8}$

11. $\frac{5}{7}$

12. $\frac{1}{2}$