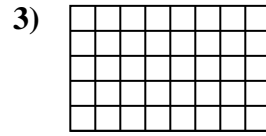
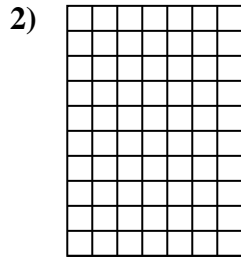
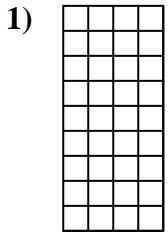




Determine the area. Each **SVGREPLACE** = 1 square unit (u^2).

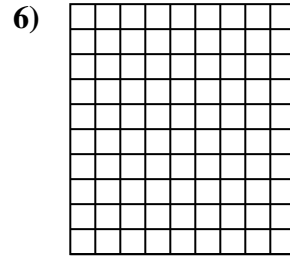
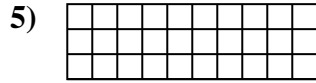
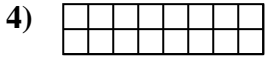
Answers



1. _____

2. _____

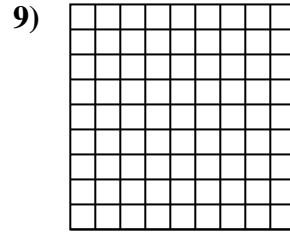
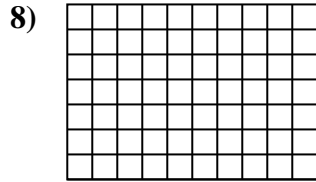
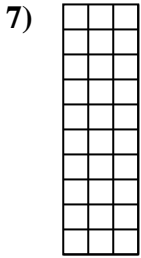
3. _____



4. _____

5. _____

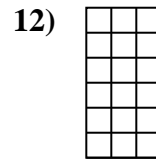
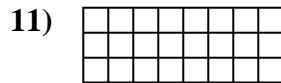

6. _____



7. _____

8. _____

9. _____



10. _____


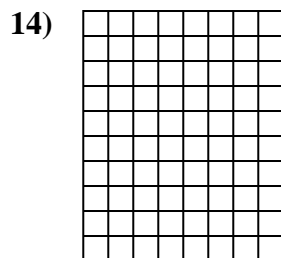
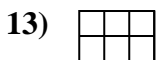
11. _____

12. _____

13. _____

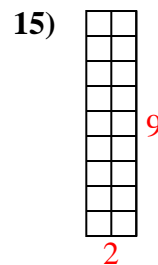
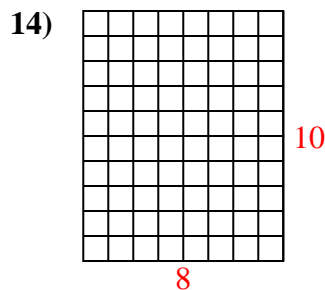
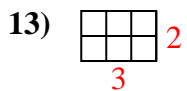
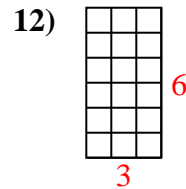
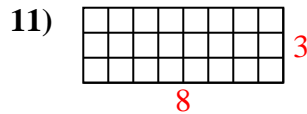
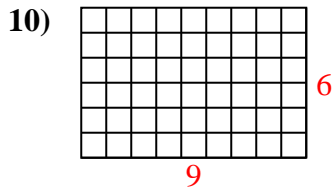
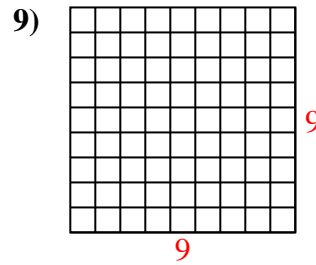
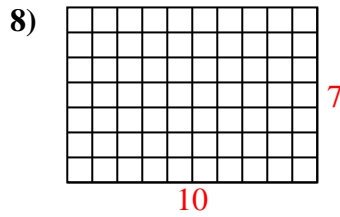
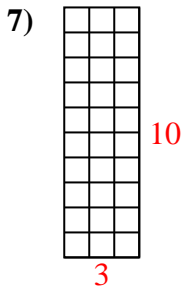
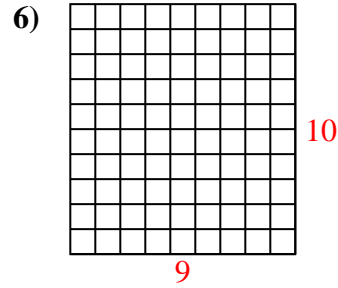
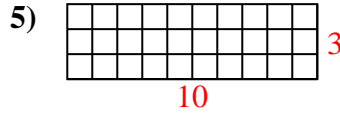
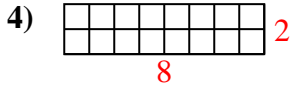
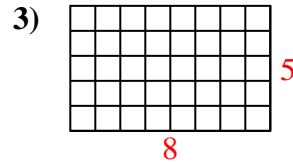
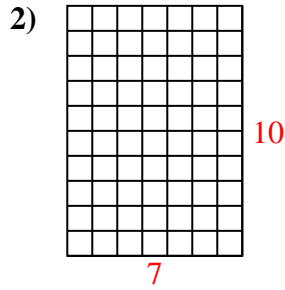
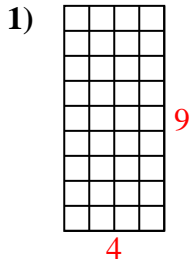
14. _____

15. _____





Determine the area. Each SVGREPLACE = 1 square unit (u^2).



Answers

1. 36 u^2

2. 70 u^2

3. 40 u^2

4. 16 u^2

5. 30 u^2

6. 90 u^2

7. 30 u^2

8. 70 u^2

9. 81 u^2

10. 54 u^2

11. 24 u^2

12. 18 u^2

13. 6 u^2

14. 80 u^2

15. 18 u^2