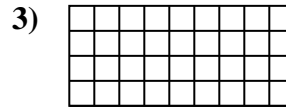
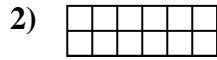
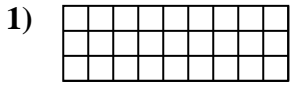




Determine the area. Each **SVGREPLACE** = 1 square unit ( $u^2$ ).

**Answers**


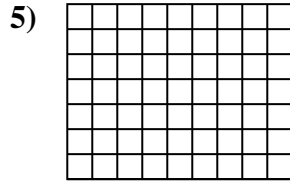
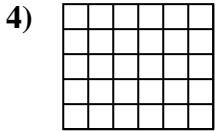


1. \_\_\_\_\_

2. \_\_\_\_\_

3. \_\_\_\_\_

4. \_\_\_\_\_

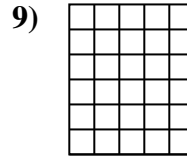

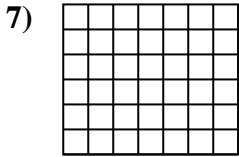


5. \_\_\_\_\_

6. \_\_\_\_\_

7. \_\_\_\_\_

8. \_\_\_\_\_

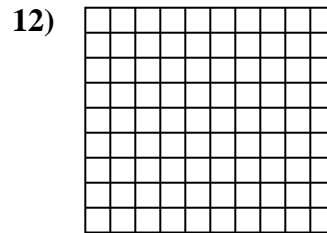
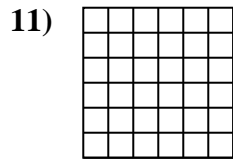
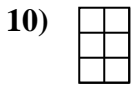


9. \_\_\_\_\_

10. \_\_\_\_\_

11. \_\_\_\_\_

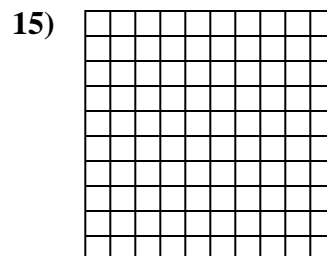
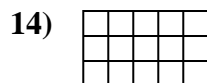
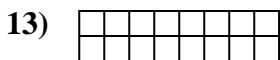
12. \_\_\_\_\_



13. \_\_\_\_\_

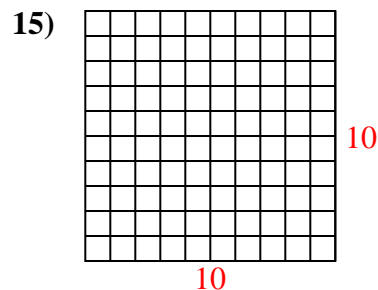
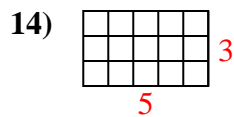
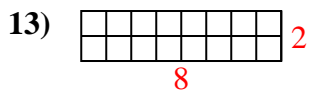
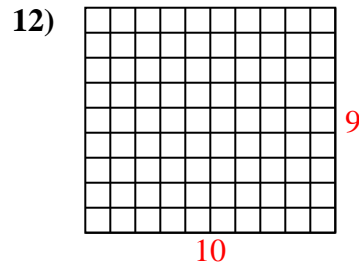
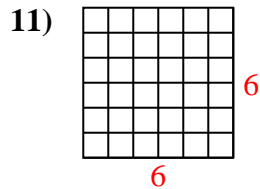
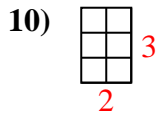
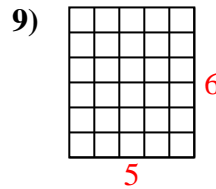
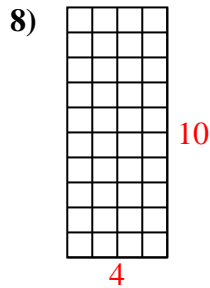
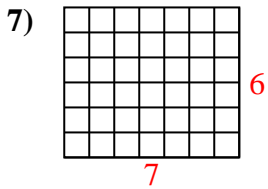
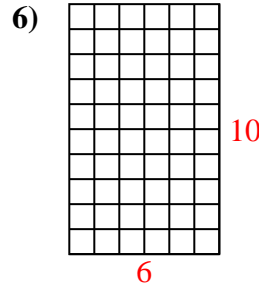
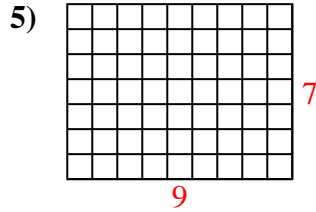
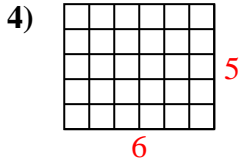
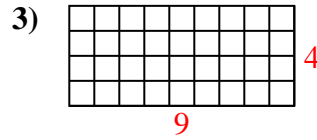
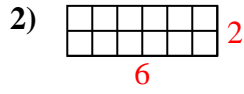
14. \_\_\_\_\_

15. \_\_\_\_\_





Determine the area. Each **SVGREPLACE** = 1 square unit ( $u^2$ ).



Answers

1. 27  $u^2$

2. 12  $u^2$

3. 36  $u^2$

4. 30  $u^2$

5. 63  $u^2$

6. 60  $u^2$

7. 42  $u^2$

8. 40  $u^2$

9. 30  $u^2$

10. 6  $u^2$

11. 36  $u^2$

12. 90  $u^2$

13. 16  $u^2$

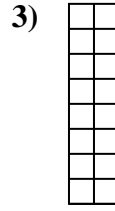
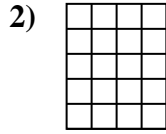
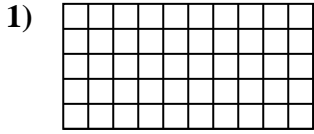
14. 15  $u^2$

15. 100  $u^2$



Determine the area. Each **SVGREPLACE** = 1 square unit ( $u^2$ ).

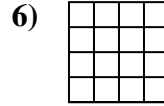

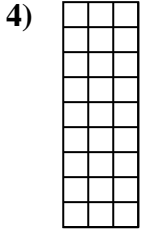
Answers



1. \_\_\_\_\_

2. \_\_\_\_\_

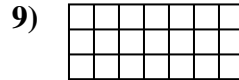
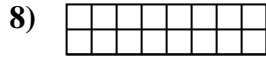
3. \_\_\_\_\_



4. \_\_\_\_\_

5. \_\_\_\_\_

6. \_\_\_\_\_

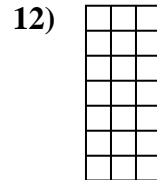
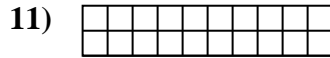
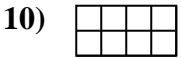


7. \_\_\_\_\_

8. \_\_\_\_\_

9. \_\_\_\_\_

10. \_\_\_\_\_



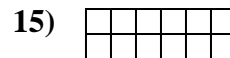
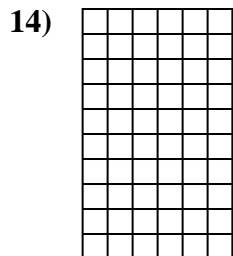
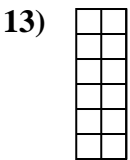
11. \_\_\_\_\_

12. \_\_\_\_\_

13. \_\_\_\_\_

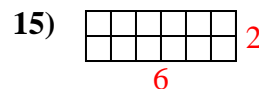
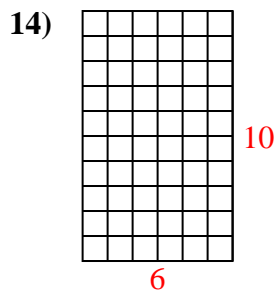
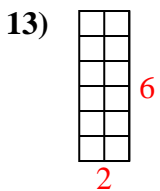
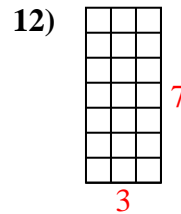
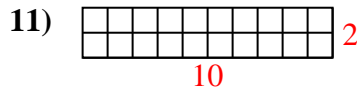
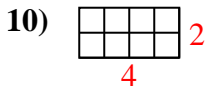
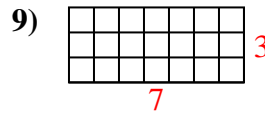
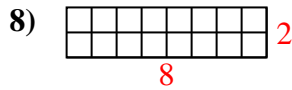
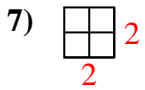
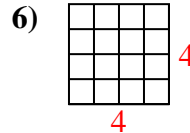
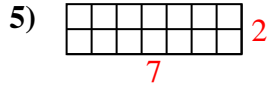
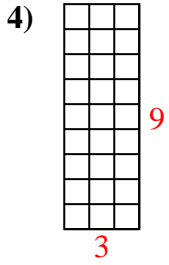
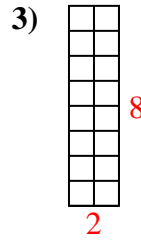
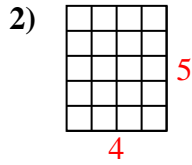
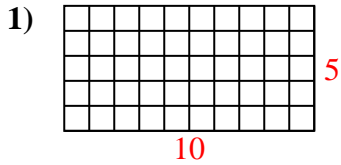
14. \_\_\_\_\_

15. \_\_\_\_\_





Determine the area. Each **SVGREPLACE** = 1 square unit ( $u^2$ ).



Answers

1. 50  $u^2$

2. 20  $u^2$

3. 16  $u^2$

4. 27  $u^2$

5. 14  $u^2$

6. 16  $u^2$

7. 4  $u^2$

8. 16  $u^2$

9. 21  $u^2$

10. 8  $u^2$

11. 20  $u^2$

12. 21  $u^2$

13. 12  $u^2$

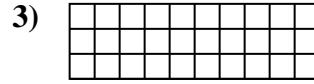
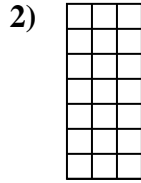

14. 60  $u^2$

15. 12  $u^2$



Determine the area. Each **SVGREPLACE** = 1 square unit ( $u^2$ ).


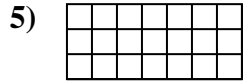
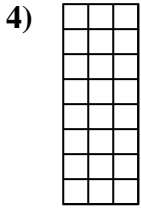
**Answers**



1. \_\_\_\_\_

2. \_\_\_\_\_



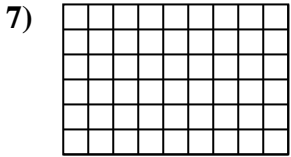
3. \_\_\_\_\_



4. \_\_\_\_\_

5. \_\_\_\_\_

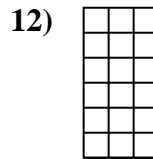
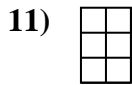
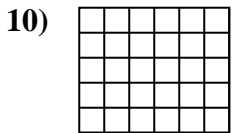
6. \_\_\_\_\_



7. \_\_\_\_\_

8. \_\_\_\_\_

9. \_\_\_\_\_



10. \_\_\_\_\_

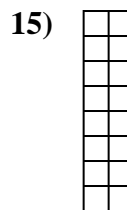

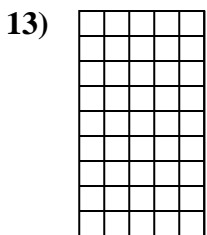
11. \_\_\_\_\_

12. \_\_\_\_\_

13. \_\_\_\_\_

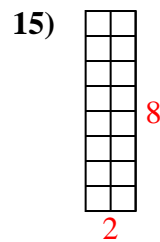
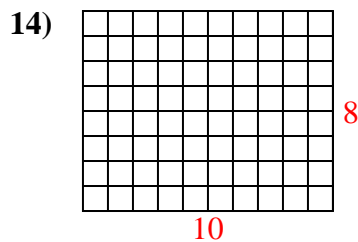
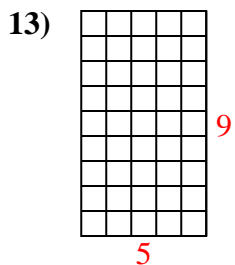
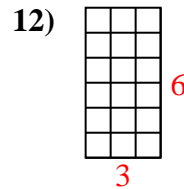
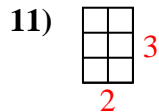
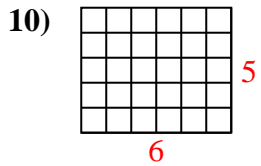
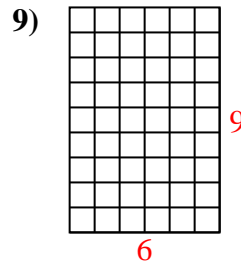
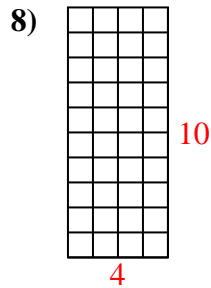
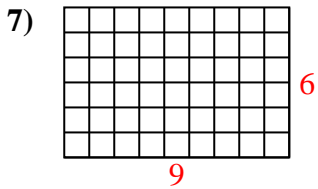
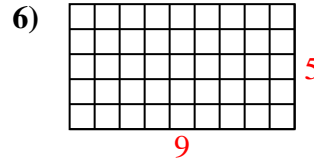
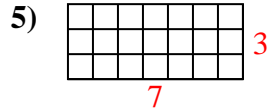
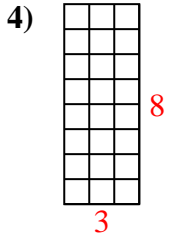
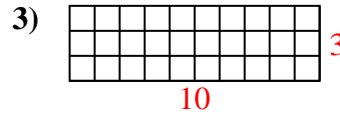
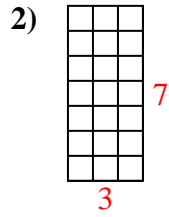
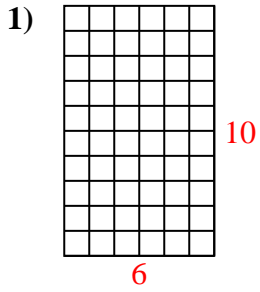
14. \_\_\_\_\_

15. \_\_\_\_\_





Determine the area. Each **SVGREPLACE** = 1 square unit ( $u^2$ ).



Answers

1. 60  $u^2$

2. 21  $u^2$

3. 30  $u^2$

4. 24  $u^2$

5. 21  $u^2$

6. 45  $u^2$

7. 54  $u^2$

8. 40  $u^2$

9. 54  $u^2$

10. 30  $u^2$

11. 6  $u^2$

12. 18  $u^2$

13. 45  $u^2$

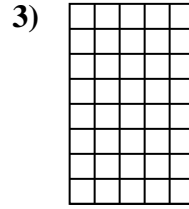
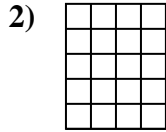
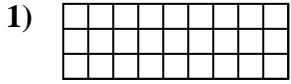
14. 80  $u^2$

15. 16  $u^2$



Determine the area. Each **SVGREPLACE** = 1 square unit ( $u^2$ ).


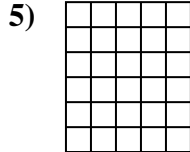

**Answers**



1. \_\_\_\_\_

2. \_\_\_\_\_

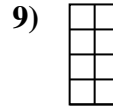
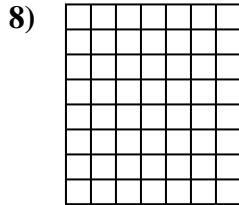
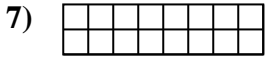
3. \_\_\_\_\_



4. \_\_\_\_\_

5. \_\_\_\_\_

6. \_\_\_\_\_

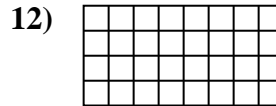
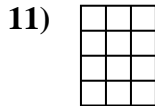
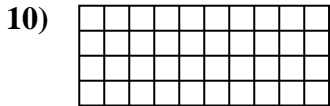


7. \_\_\_\_\_

8. \_\_\_\_\_

9. \_\_\_\_\_

10. \_\_\_\_\_



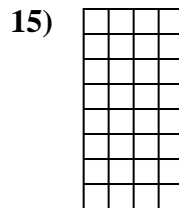
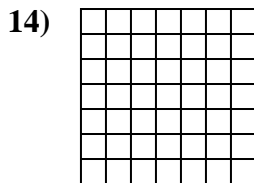

11. \_\_\_\_\_

12. \_\_\_\_\_

13. \_\_\_\_\_

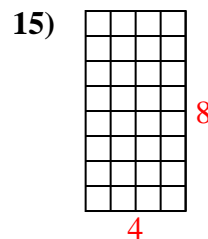
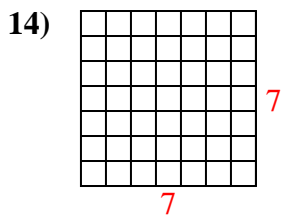
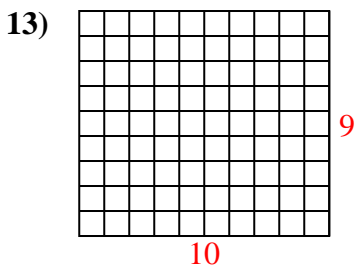
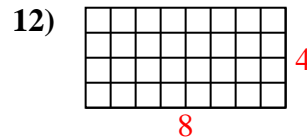
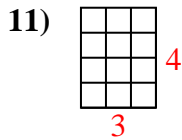
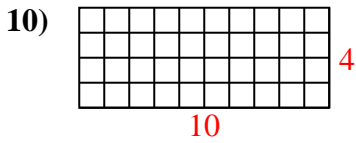
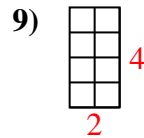
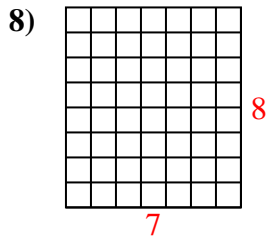
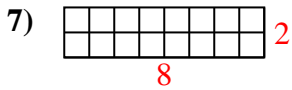
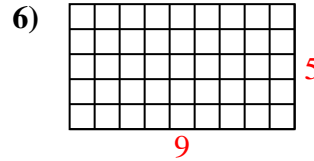
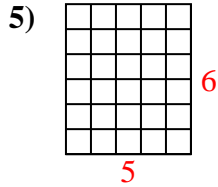
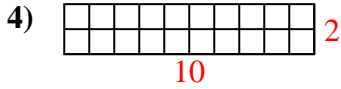
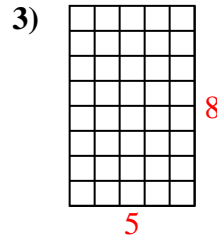
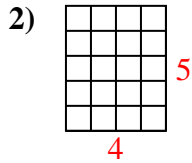
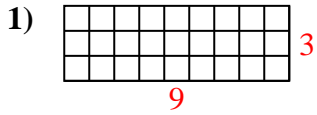
14. \_\_\_\_\_

15. \_\_\_\_\_





Determine the area. Each **SVGREPLACE** = 1 square unit ( $u^2$ ).



Answers

1. 27  $u^2$

2. 20  $u^2$

3. 40  $u^2$

4. 20  $u^2$

5. 30  $u^2$

6. 45  $u^2$

7. 16  $u^2$

8. 56  $u^2$

9. 8  $u^2$

10. 40  $u^2$

11. 12  $u^2$

12. 32  $u^2$

13. 90  $u^2$

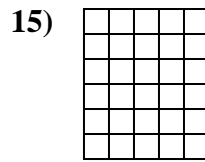
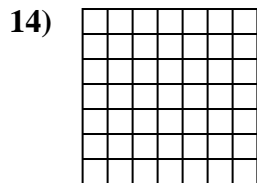
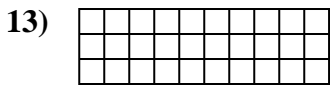
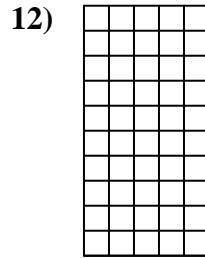
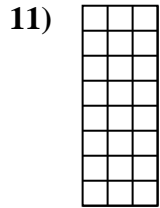
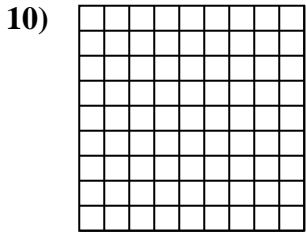
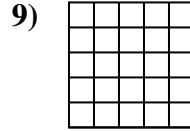
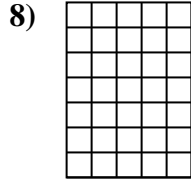
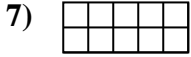
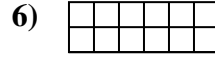
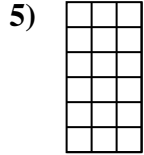
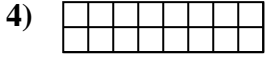

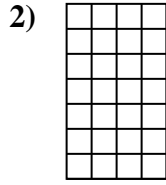
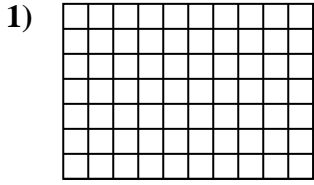
14. 49  $u^2$

15. 32  $u^2$





Determine the area. Each **SVGREPLACE** = 1 square unit ( $u^2$ ).

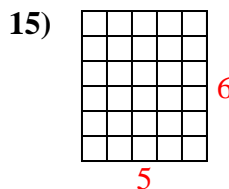
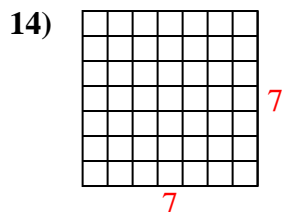
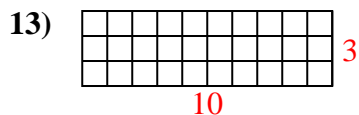
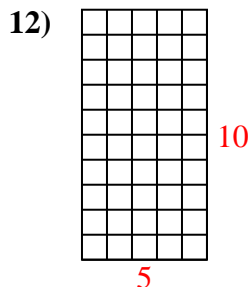
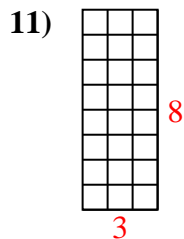
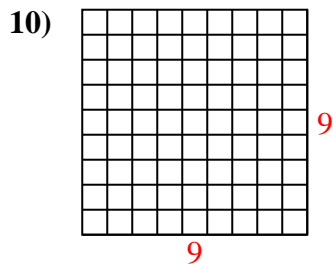
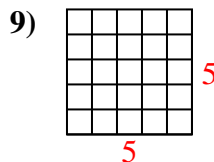
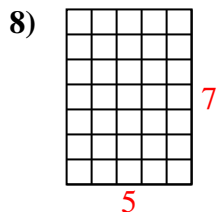
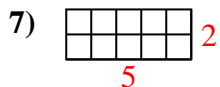
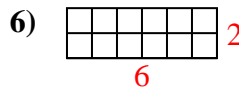
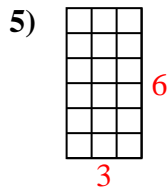
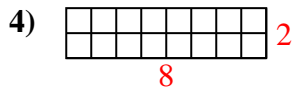
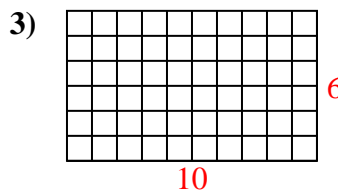
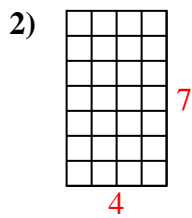
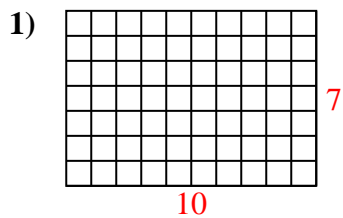


Answers

1. \_\_\_\_\_
2. \_\_\_\_\_
3. \_\_\_\_\_
4. \_\_\_\_\_
5. \_\_\_\_\_
6. \_\_\_\_\_
7. \_\_\_\_\_
8. \_\_\_\_\_
9. \_\_\_\_\_
10. \_\_\_\_\_
11. \_\_\_\_\_
12. \_\_\_\_\_
13. \_\_\_\_\_
14. \_\_\_\_\_
15. \_\_\_\_\_



Determine the area. Each **SVGREPLACE** = 1 square unit ( $u^2$ ).



Answers

1. 70  $u^2$

2. 28  $u^2$

3. 60  $u^2$

4. 16  $u^2$

5. 18  $u^2$

6. 12  $u^2$

7. 10  $u^2$

8. 35  $u^2$

9. 25  $u^2$

10. 81  $u^2$

11. 24  $u^2$

12. 50  $u^2$

13. 30  $u^2$

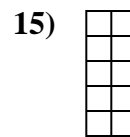
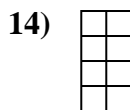
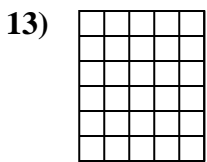
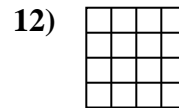
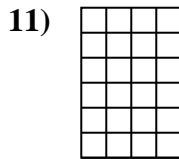
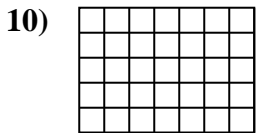
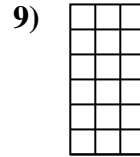


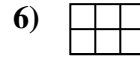
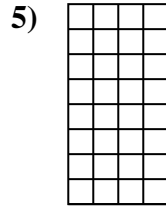
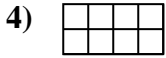
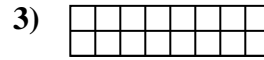

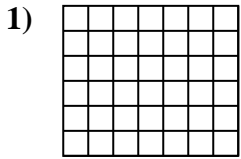
14. 49  $u^2$

15. 30  $u^2$



Determine the area. Each **SVGREPLACE** = 1 square unit ( $u^2$ ).

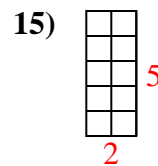
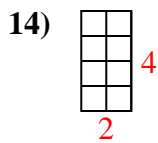
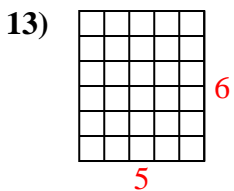
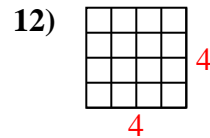
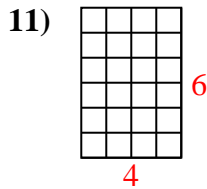
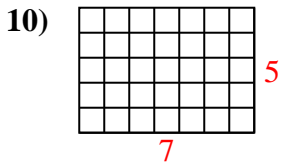
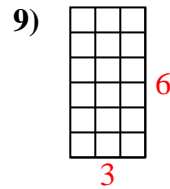
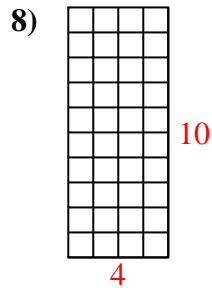
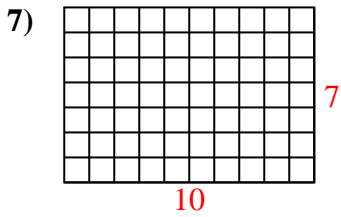
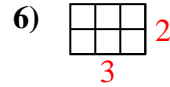
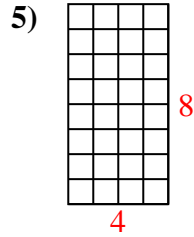
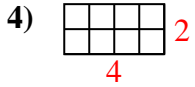
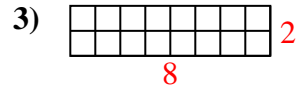
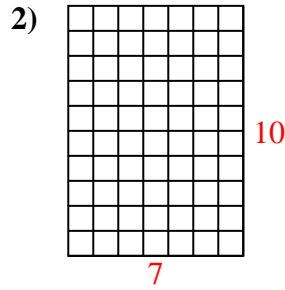
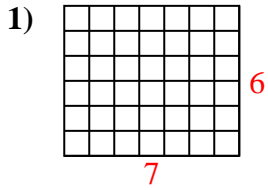
**Answers**



- 1. \_\_\_\_\_
- 2. \_\_\_\_\_
- 3. \_\_\_\_\_
- 4. \_\_\_\_\_
- 5. \_\_\_\_\_
- 6. \_\_\_\_\_
- 7. \_\_\_\_\_
- 8. \_\_\_\_\_
- 9. \_\_\_\_\_
- 10. \_\_\_\_\_
- 11. \_\_\_\_\_
- 12. \_\_\_\_\_
- 13. \_\_\_\_\_
- 14. \_\_\_\_\_
- 15. \_\_\_\_\_



Determine the area. Each **SVGREPLACE** = 1 square unit ( $u^2$ ).



Answers

1. 42  $u^2$

2. 70  $u^2$

3. 16  $u^2$

4. 8  $u^2$

5. 32  $u^2$

6. 6  $u^2$

7. 70  $u^2$

8. 40  $u^2$

9. 18  $u^2$

10. 35  $u^2$

11. 24  $u^2$

12. 16  $u^2$

13. 30  $u^2$


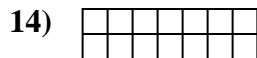
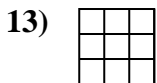
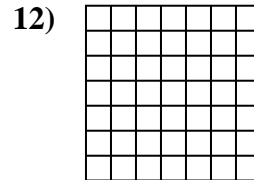
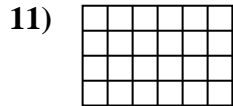
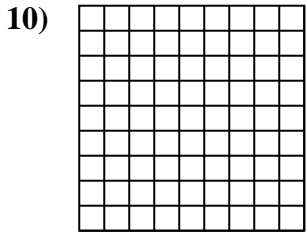

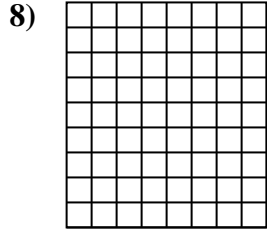
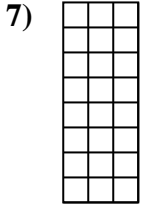
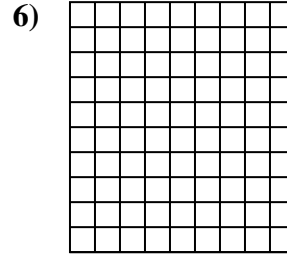
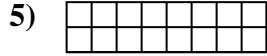
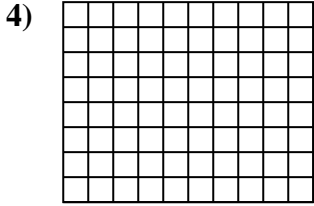
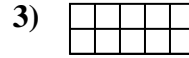
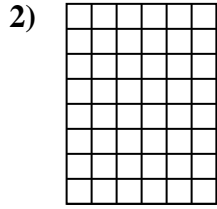
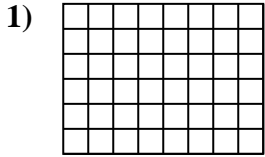
14. 8  $u^2$

15. 10  $u^2$



Determine the area. Each **SVGREPLACE** = 1 square unit ( $u^2$ ).

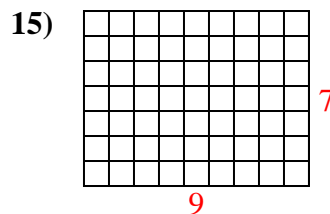
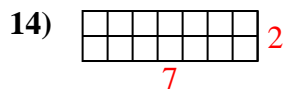
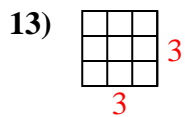
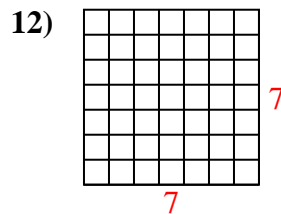
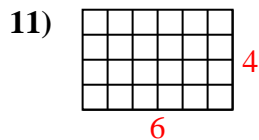
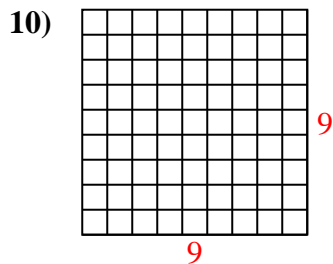
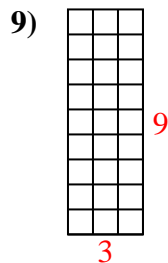
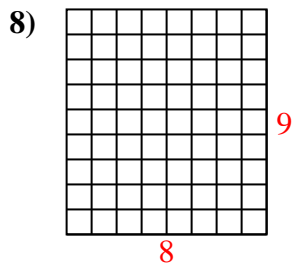
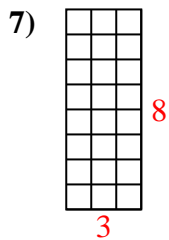
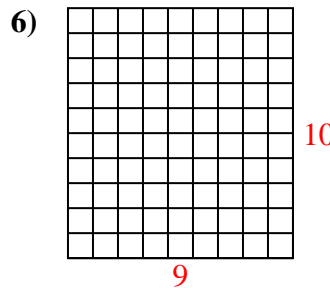
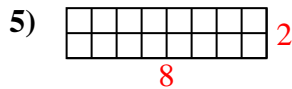
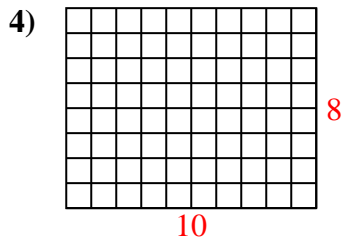
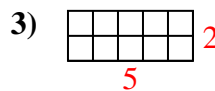
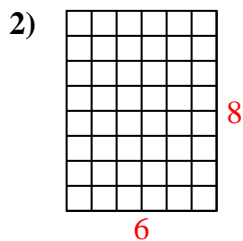
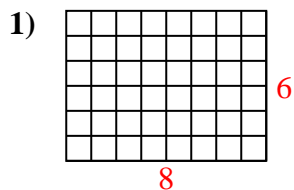
**Answers**



1. \_\_\_\_\_
2. \_\_\_\_\_
3. \_\_\_\_\_
4. \_\_\_\_\_
5. \_\_\_\_\_
6. \_\_\_\_\_
7. \_\_\_\_\_
8. \_\_\_\_\_
9. \_\_\_\_\_
10. \_\_\_\_\_
11. \_\_\_\_\_
12. \_\_\_\_\_
13. \_\_\_\_\_
14. \_\_\_\_\_
15. \_\_\_\_\_



Determine the area. Each **SVGREPLACE** = 1 square unit ( $u^2$ ).



Answers

1. 48  $u^2$

2. 48  $u^2$

3. 10  $u^2$

4. 80  $u^2$

5. 16  $u^2$

6. 90  $u^2$

7. 24  $u^2$

8. 72  $u^2$

9. 27  $u^2$

10. 81  $u^2$

11. 24  $u^2$

12. 49  $u^2$

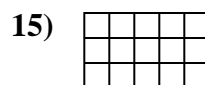
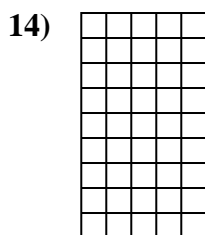
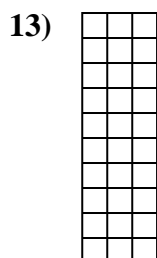
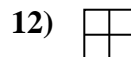
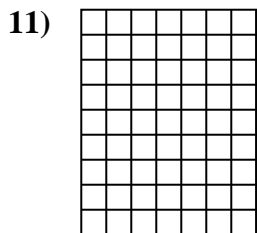
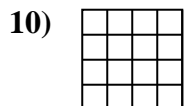
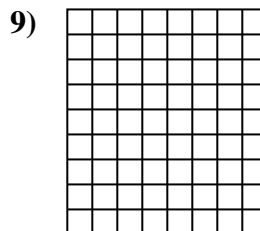
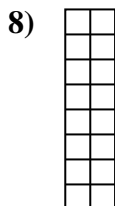
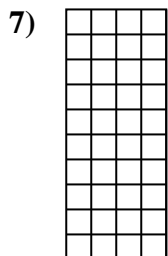

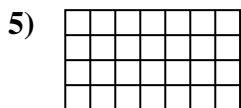
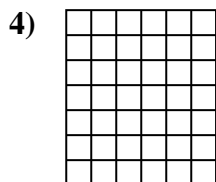
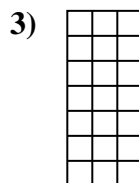
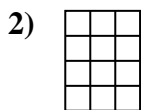
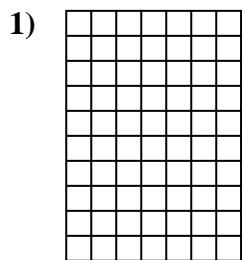
13. 9  $u^2$

14. 14  $u^2$

15. 63  $u^2$



Determine the area. Each **SVGREPLACE** = 1 square unit ( $u^2$ ).



**Answers**

1. \_\_\_\_\_

2. \_\_\_\_\_

3. \_\_\_\_\_

4. \_\_\_\_\_

5. \_\_\_\_\_

6. \_\_\_\_\_

7. \_\_\_\_\_

8. \_\_\_\_\_

9. \_\_\_\_\_

10. \_\_\_\_\_

11. \_\_\_\_\_

12. \_\_\_\_\_

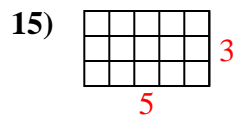
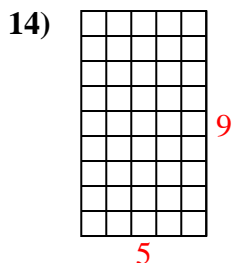
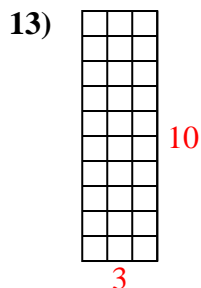
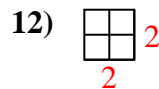
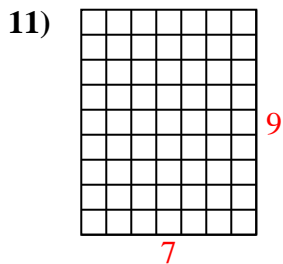
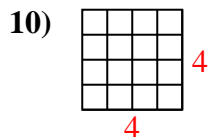
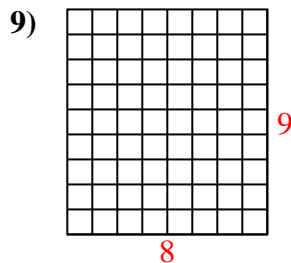
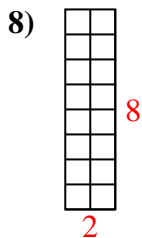
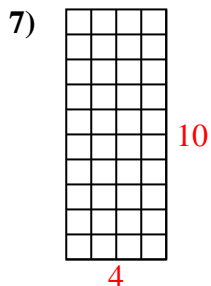
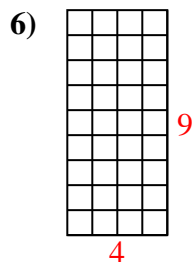
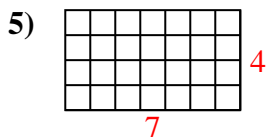
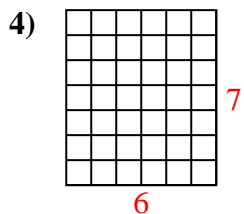
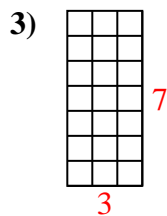
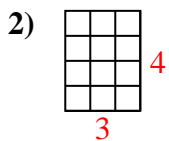
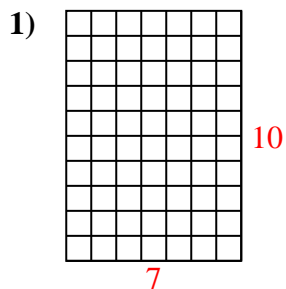
13. \_\_\_\_\_

14. \_\_\_\_\_

15. \_\_\_\_\_



Determine the area. Each **SVGREPLACE** = 1 square unit ( $u^2$ ).



Answers

1. 70  $u^2$

2. 12  $u^2$

3. 21  $u^2$

4. 42  $u^2$

5. 28  $u^2$

6. 36  $u^2$

7. 40  $u^2$

8. 16  $u^2$

9. 72  $u^2$

10. 16  $u^2$

11. 63  $u^2$

12. 4  $u^2$

13. 30  $u^2$

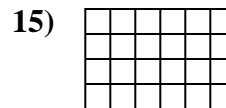
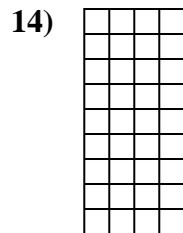
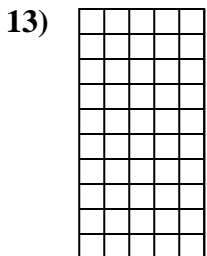
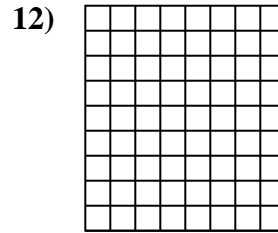
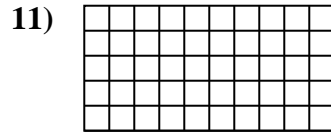
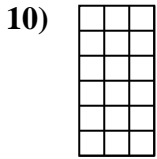
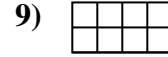

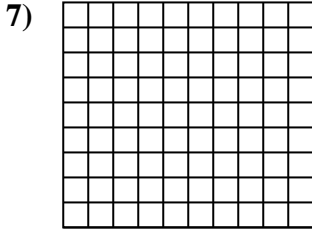
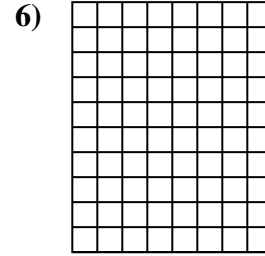
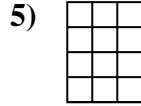
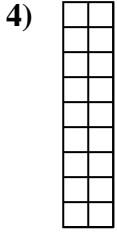
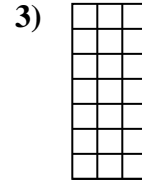
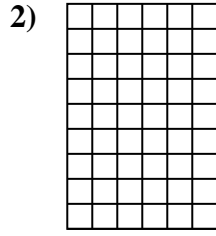
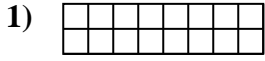
14. 45  $u^2$

15. 15  $u^2$





Determine the area. Each **SVGREPLACE** = 1 square unit ( $u^2$ ).



Answers

1. \_\_\_\_\_

2. \_\_\_\_\_

3. \_\_\_\_\_

4. \_\_\_\_\_

5. \_\_\_\_\_

6. \_\_\_\_\_

7. \_\_\_\_\_

8. \_\_\_\_\_

9. \_\_\_\_\_

10. \_\_\_\_\_

11. \_\_\_\_\_

12. \_\_\_\_\_

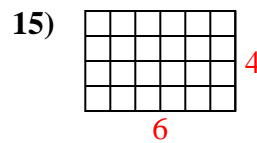
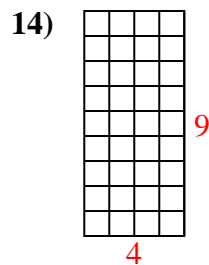
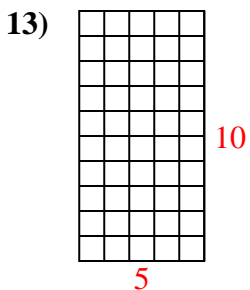
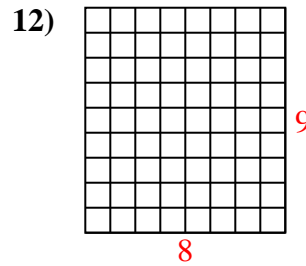
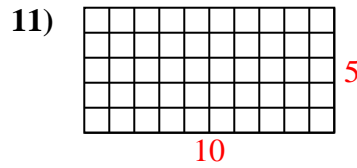
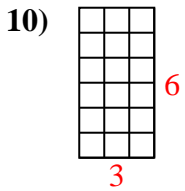
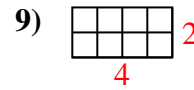
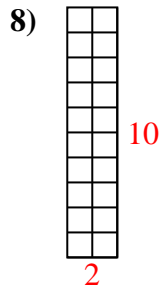
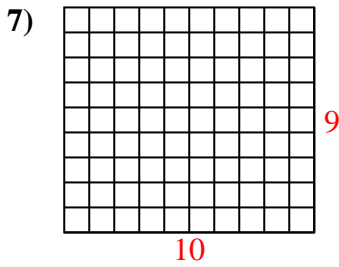
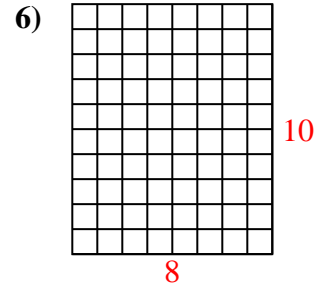
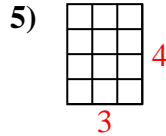
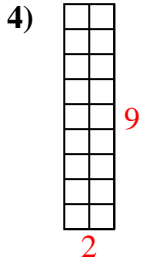
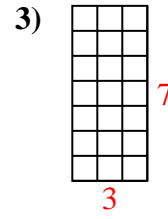
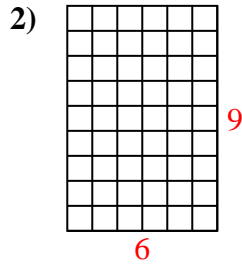
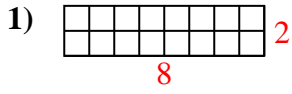
13. \_\_\_\_\_

14. \_\_\_\_\_

15. \_\_\_\_\_



Determine the area. Each **SVGREPLACE** = 1 square unit ( $u^2$ ).



Answers

1. 16  $u^2$

2. 54  $u^2$

3. 21  $u^2$

4. 18  $u^2$

5. 12  $u^2$

6. 80  $u^2$

7. 90  $u^2$

8. 20  $u^2$

9. 8  $u^2$

10. 18  $u^2$

11. 50  $u^2$

12. 72  $u^2$

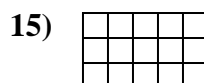
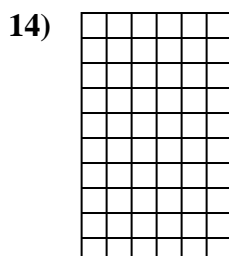
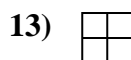
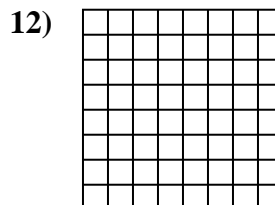
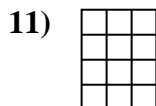
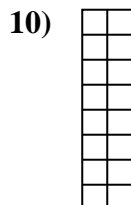

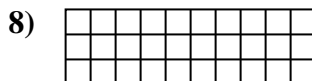
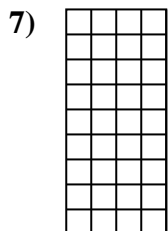
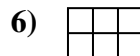
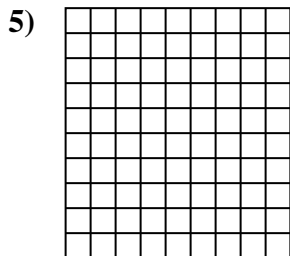
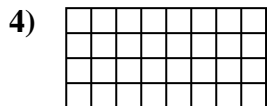
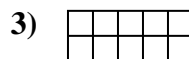
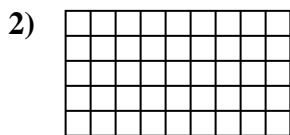

13. 50  $u^2$

14. 36  $u^2$

15. 24  $u^2$



Determine the area. Each **SVGREPLACE** = 1 square unit ( $u^2$ ).



**Answers**

1. \_\_\_\_\_

2. \_\_\_\_\_

3. \_\_\_\_\_

4. \_\_\_\_\_

5. \_\_\_\_\_

6. \_\_\_\_\_

7. \_\_\_\_\_

8. \_\_\_\_\_

9. \_\_\_\_\_

10. \_\_\_\_\_

11. \_\_\_\_\_

12. \_\_\_\_\_

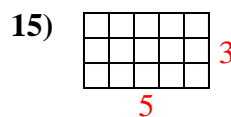
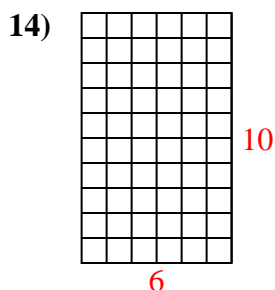
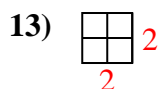
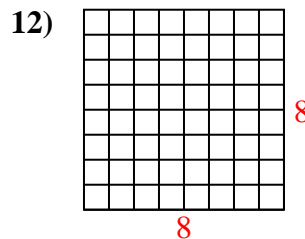
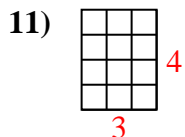
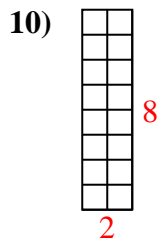
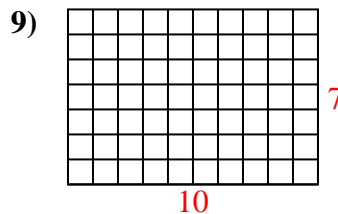
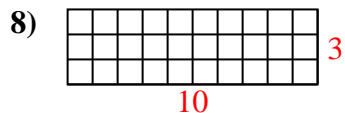
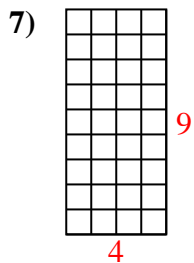
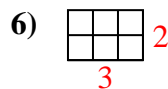
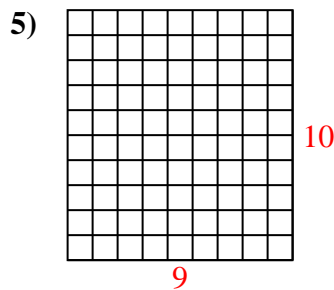
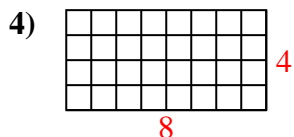
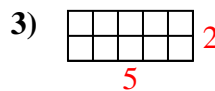
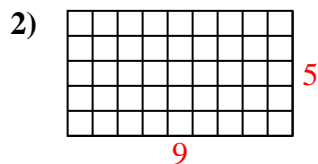
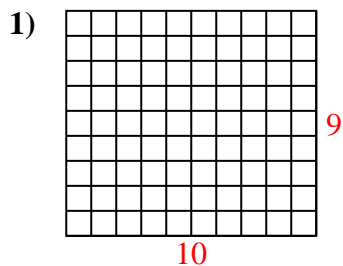
13. \_\_\_\_\_

14. \_\_\_\_\_

15. \_\_\_\_\_



Determine the area. Each **SVGREPLACE** = 1 square unit ( $u^2$ ).



Answers

1. 90  $u^2$

2. 45  $u^2$

3. 10  $u^2$

4. 32  $u^2$

5. 90  $u^2$

6. 6  $u^2$

7. 36  $u^2$

8. 30  $u^2$

9. 70  $u^2$

10. 16  $u^2$

11. 12  $u^2$

12. 64  $u^2$

13. 4  $u^2$

14. 60  $u^2$

15. 15  $u^2$