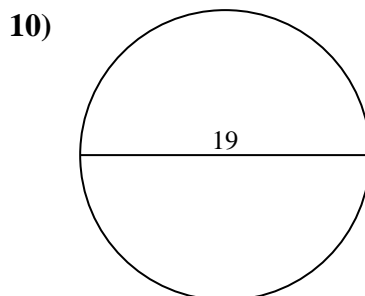
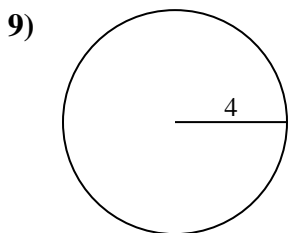
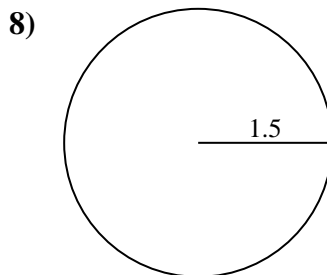
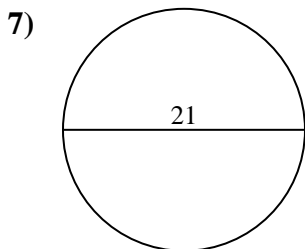
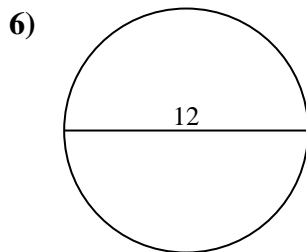
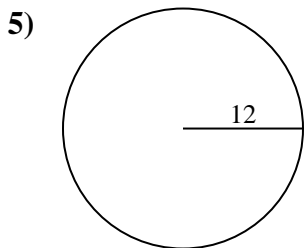
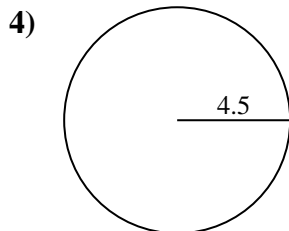
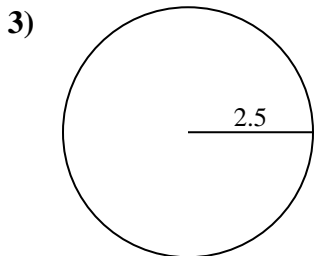
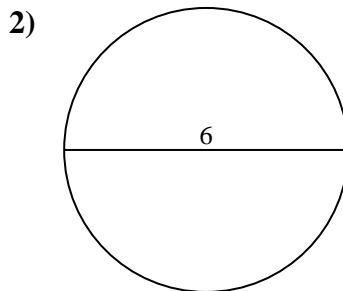
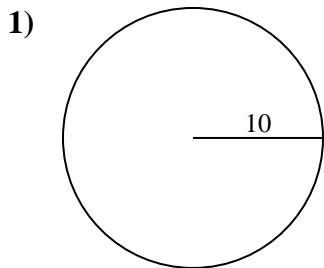




Find the circumference (in cm) of the circle. Circles are not to scale.



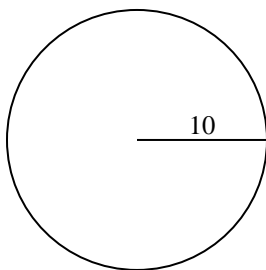
Answers

- 1. _____
- 2. _____
- 3. _____
- 4. _____
- 5. _____
- 6. _____
- 7. _____
- 8. _____
- 9. _____
- 10. _____

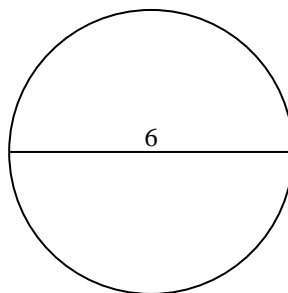


Find the circumference (in cm) of the circle. Circles are not to scale.

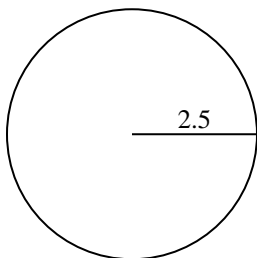
1)



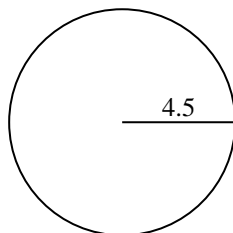
2)



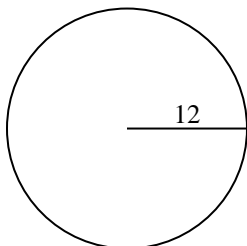
3)



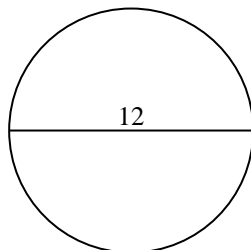
4)



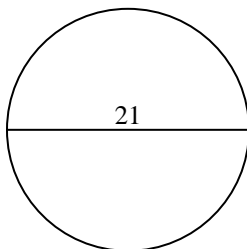
5)



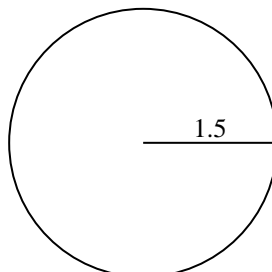
6)



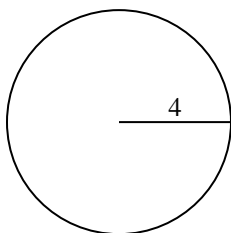
7)



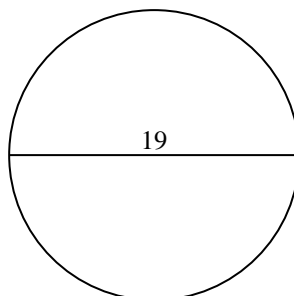
8)



9)



10)

**Answers**

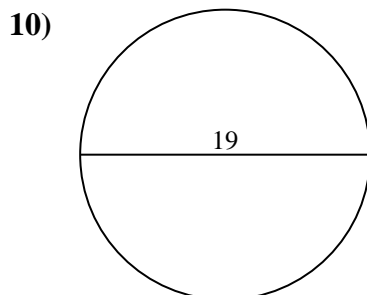
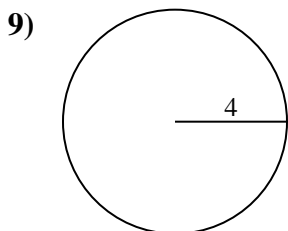
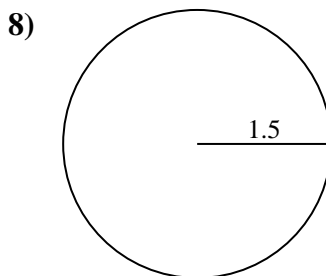
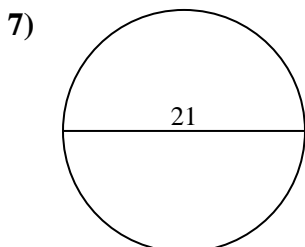
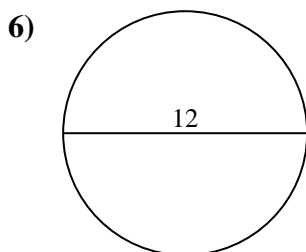
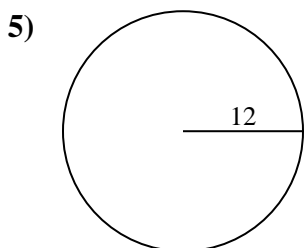
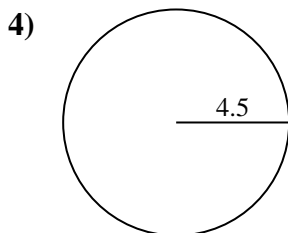
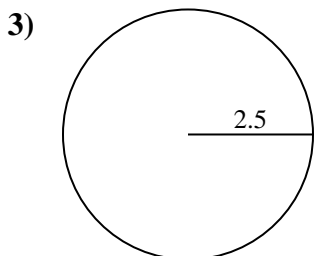
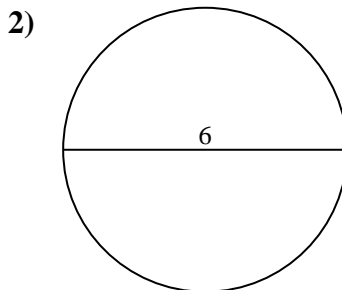
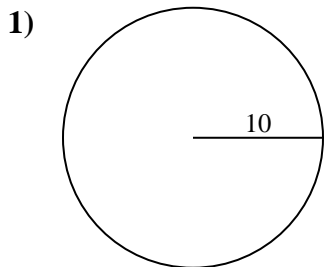
1. 62.83 cm
2. 18.85 cm
3. 15.71 cm
4. 28.27 cm
5. 75.4 cm
6. 37.7 cm
7. 65.97 cm
8. 9.42 cm
9. 25.13 cm
10. 59.69 cm



Find the circumference (in cm) of the circle. Circles are not to scale.

- | | | | | |
|----------|----------|----------|----------|----------|
| 65.97 cm | 25.13 cm | 59.69 cm | 75.4 cm | 28.27 cm |
| 9.42 cm | 37.7 cm | 15.71 cm | 18.85 cm | 62.83 cm |

Answers



- 1. _____
- 2. _____
- 3. _____
- 4. _____
- 5. _____
- 6. _____
- 7. _____
- 8. _____
- 9. _____
- 10. _____