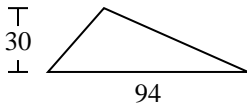


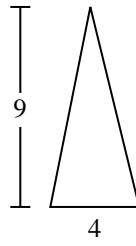


Find the area of the triangle. Round your answer to the nearest 10th.

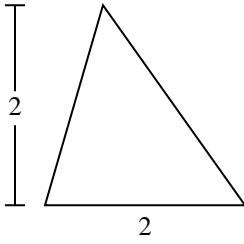
1)



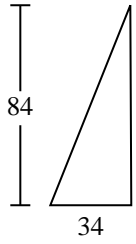
2)



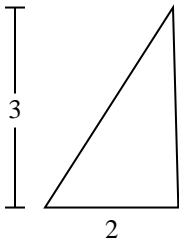
3)



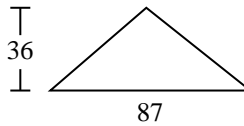
4)



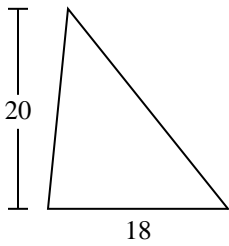
5)



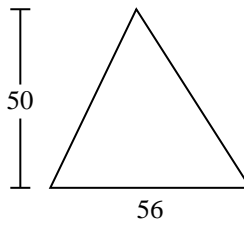
6)



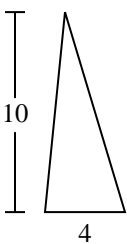
7)



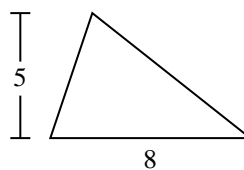
8)



9)



10)



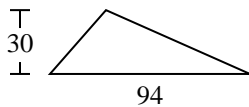
Answers

1. _____
2. _____
3. _____
4. _____
5. _____
6. _____
7. _____
8. _____
9. _____
10. _____

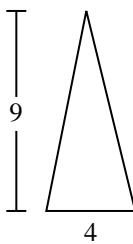


Find the area of the triangle. Round your answer to the nearest 10th.

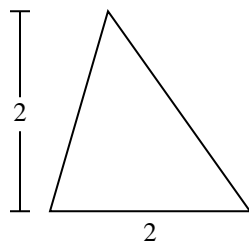
1)



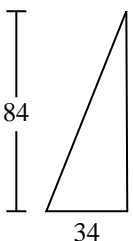
2)



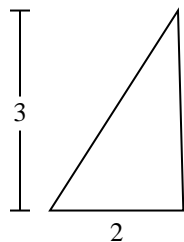
3)



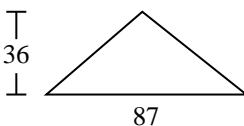
4)



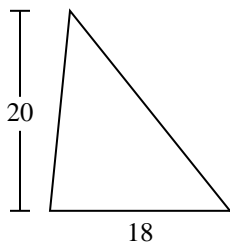
5)



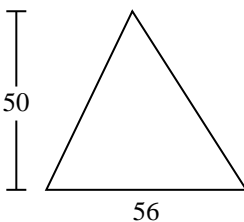
6)



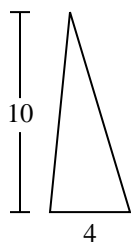
7)



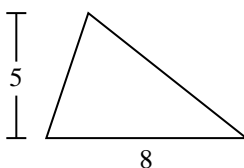
8)



9)



10)

Answers1. 1,4102. 183. 24. 1,4285. 36. 1,5667. 1808. 1,4009. 2010. 20

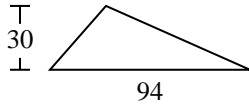


Find the area of the triangle. Round your answer to the nearest 10th.

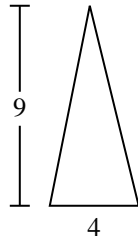
180	1,428	18	1,566	1,400
3	2	20	1,410	

Answers

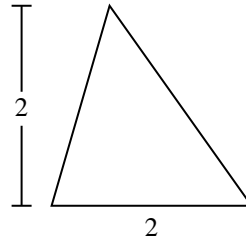
1)



2)



3)



1. _____

2. _____

3. _____

4. _____

5. _____

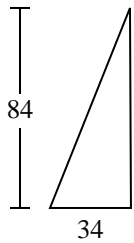
6. _____

7. _____

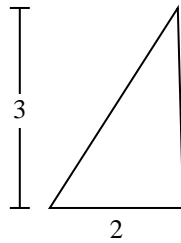
8. _____

9. _____

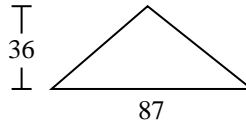
4)



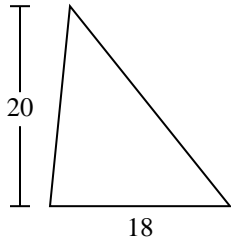
5)



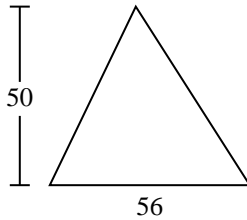
6)



7)



8)



9)

