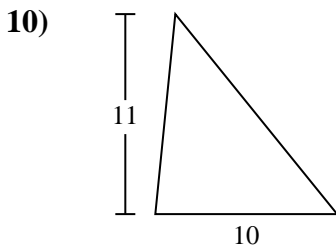
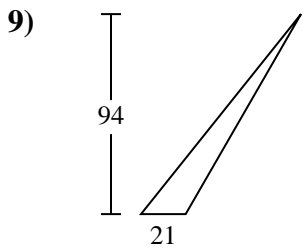
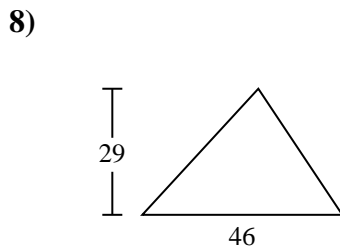
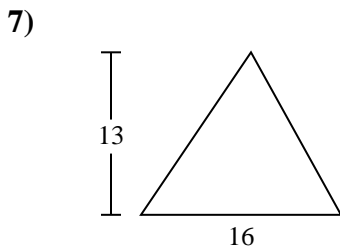
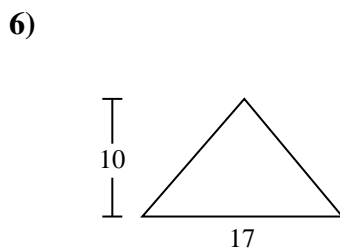
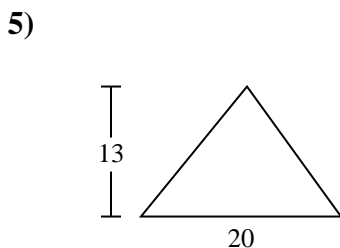
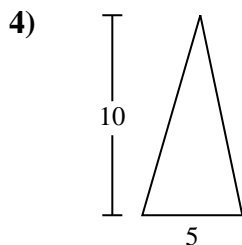
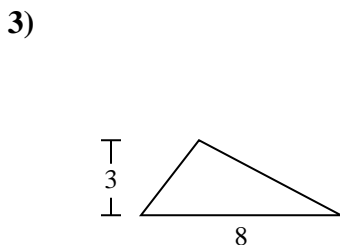
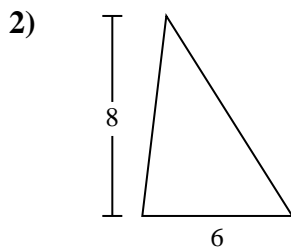
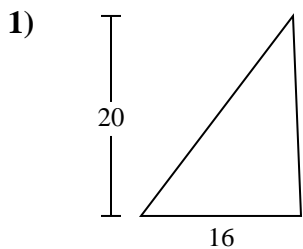




Find the area of the triangle. Round your answer to the nearest 10th.

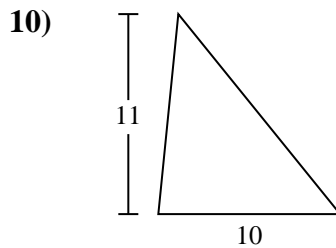
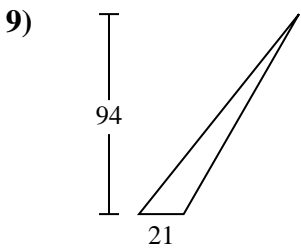
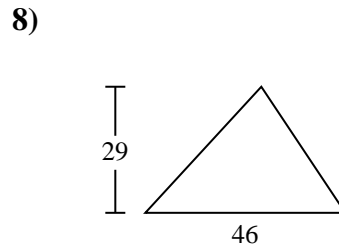
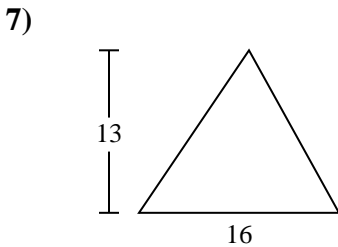
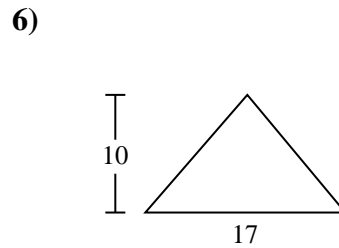
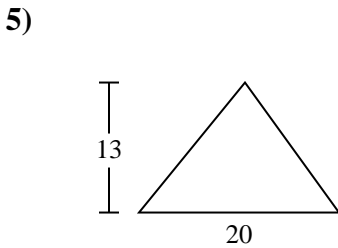
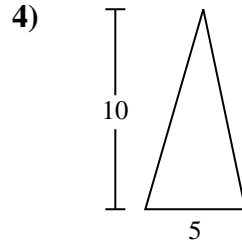
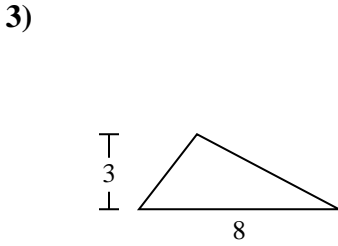
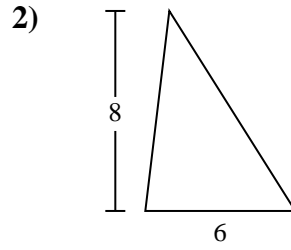
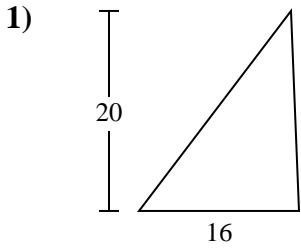


Answers

- 1. \_\_\_\_\_
- 2. \_\_\_\_\_
- 3. \_\_\_\_\_
- 4. \_\_\_\_\_
- 5. \_\_\_\_\_
- 6. \_\_\_\_\_
- 7. \_\_\_\_\_
- 8. \_\_\_\_\_
- 9. \_\_\_\_\_
- 10. \_\_\_\_\_



Find the area of the triangle. Round your answer to the nearest 10th.



Answers

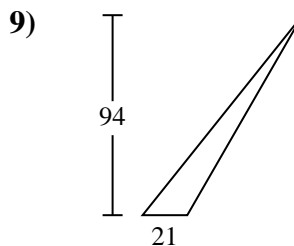
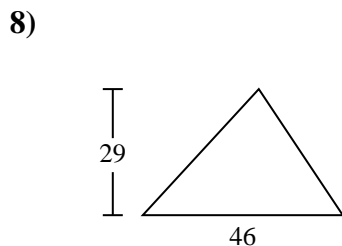
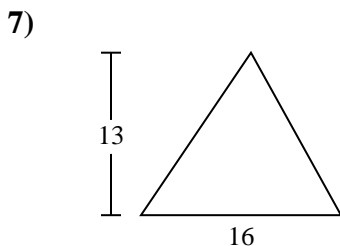
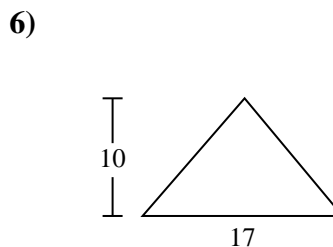
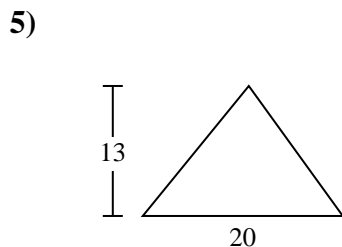
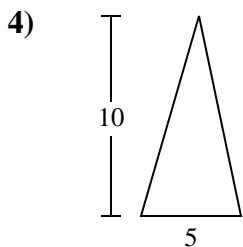
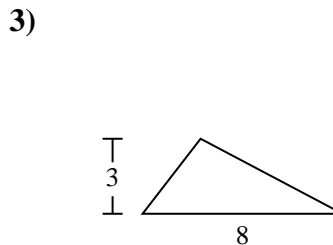
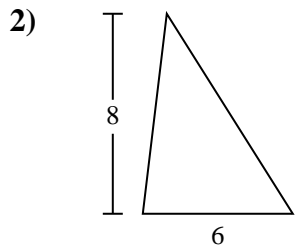
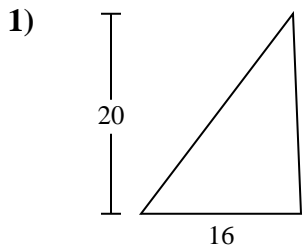
- 1. 160
- 2. 24
- 3. 12
- 4. 25
- 5. 130
- 6. 85
- 7. 104
- 8. 667
- 9. 987
- 10. 55



Find the area of the triangle. Round your answer to the nearest 10th.

25	160	85	24	667
987	104	12	130	

Answers



1. \_\_\_\_\_
2. \_\_\_\_\_
3. \_\_\_\_\_
4. \_\_\_\_\_
5. \_\_\_\_\_
6. \_\_\_\_\_
7. \_\_\_\_\_
8. \_\_\_\_\_
9. \_\_\_\_\_