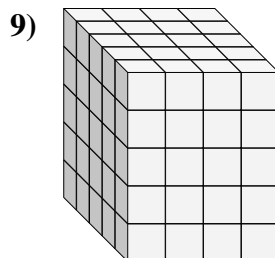
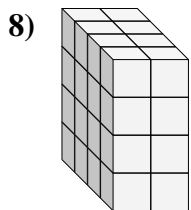
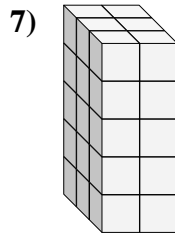
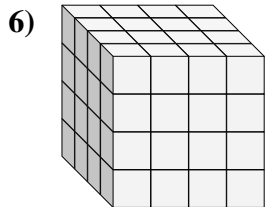
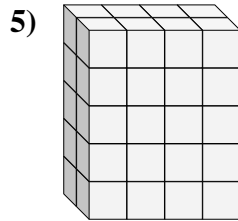
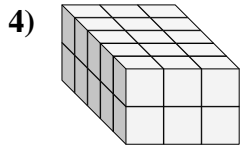
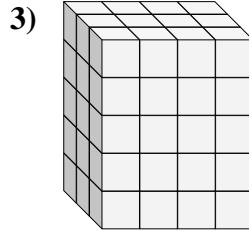
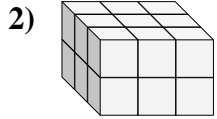
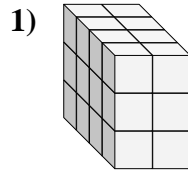
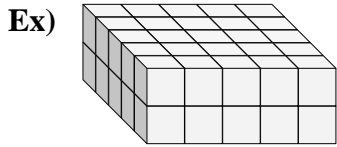




Find the length, width and height of the rectangular prism. Then find the volume.



Answers

Ex. 5 5 2 50

1. _____

2. _____

3. _____

4. _____

5. _____

6. _____

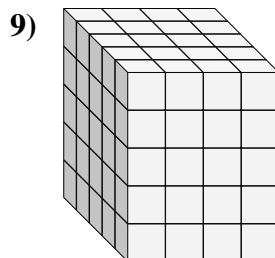
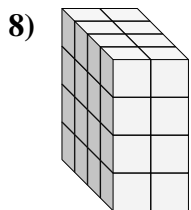
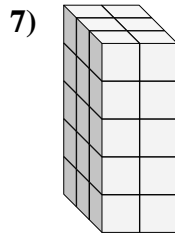
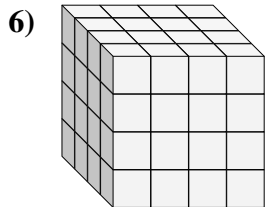
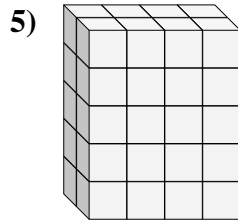
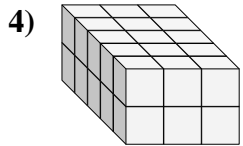
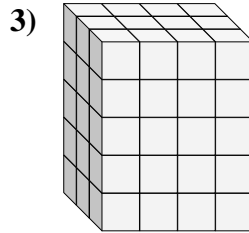
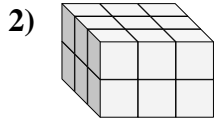
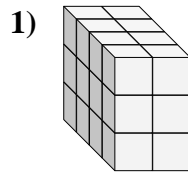
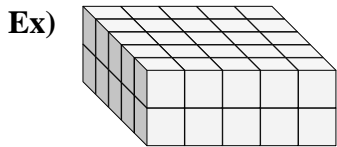
7. _____

8. _____

9. _____



Find the length, width and height of the rectangular prism. Then find the volume.



Answers

Ex. 5 5 2 50

1. 4 2 3 24

2. 3 3 2 18

3. 3 4 5 60

4. 5 3 2 30

5. 2 4 5 40

6. 4 4 4 64

7. 3 2 5 30

8. 4 2 4 32

9. 5 4 5 100