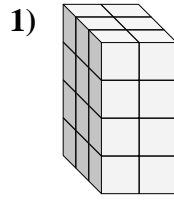
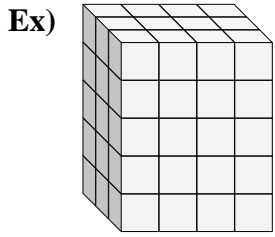




Find the length, width and height of the rectangular prism. Then find the volume.

Answers



Ex. 3 4 5 60

1. _____

2. _____

3. _____

4. _____

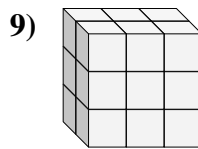
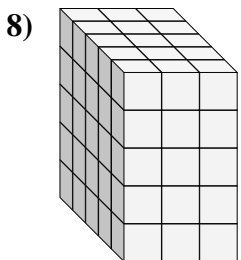
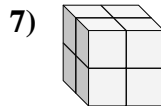
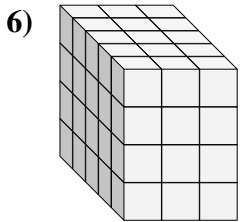
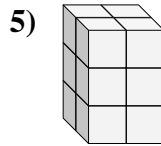
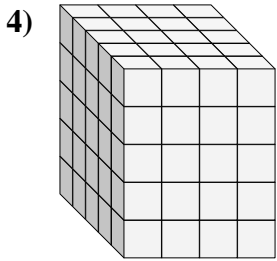
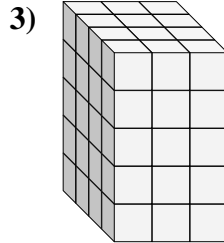
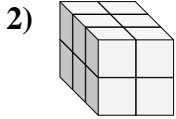
5. _____

6. _____

7. _____

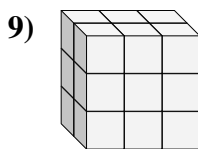
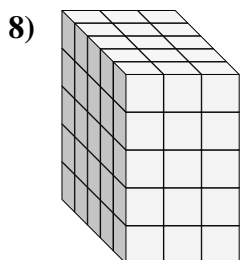
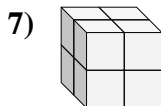
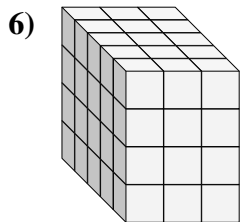
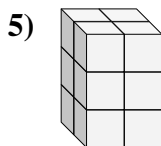
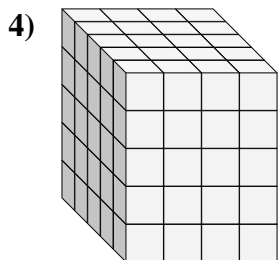
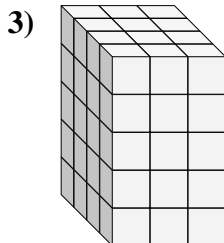
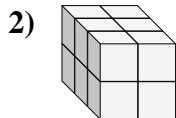
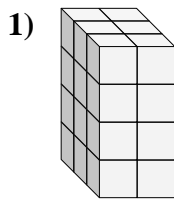
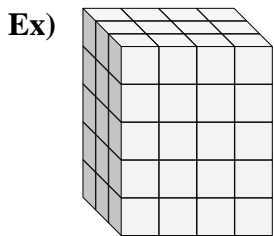
8. _____

9. _____





Find the length, width and height of the rectangular prism. Then find the volume.



Answers

Ex. 3 4 5 60

1. 3 2 4 24

2. 3 2 2 12

3. 4 3 5 60

4. 5 4 3 100

5. 2 2 3 12

6. 5 3 4 60

7. 2 2 2 8

8. 5 3 5 75

9. 2 3 3 18