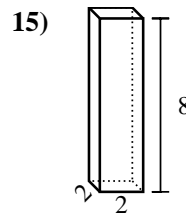
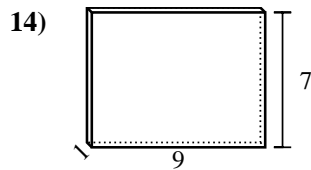
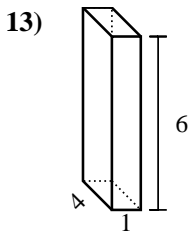
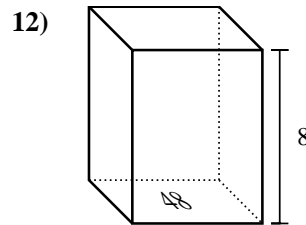
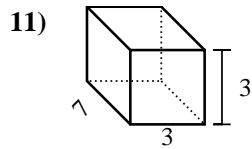
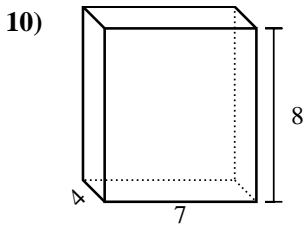
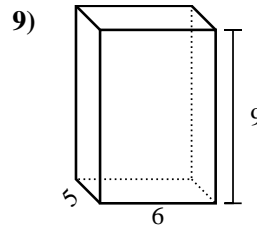
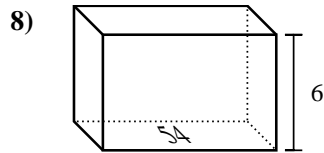
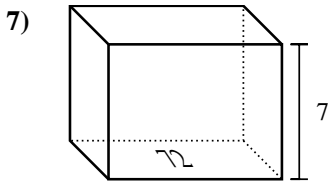
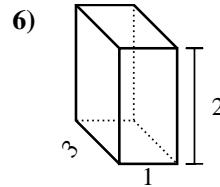
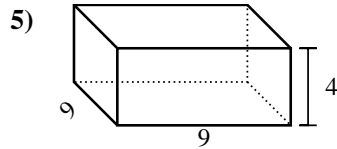
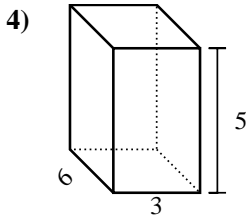
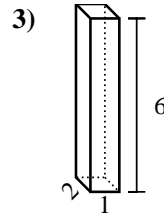
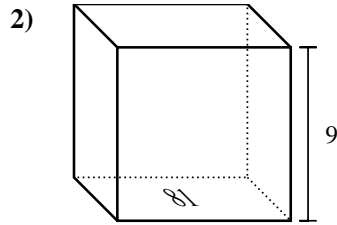
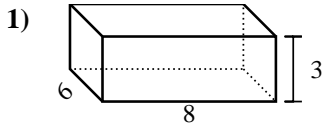




Find the volume of each rectangular prism. Units are in cm (not to scale). Remember  $V = BH$  and  $V = L \times W \times H$

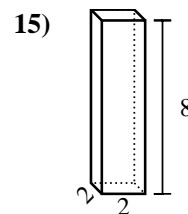
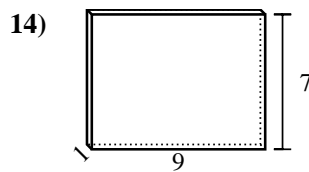
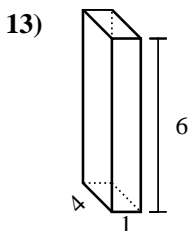
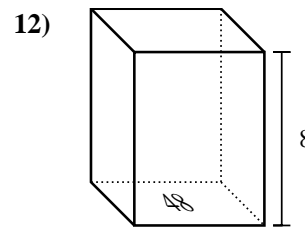
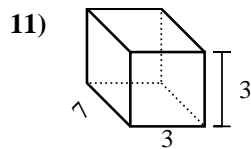
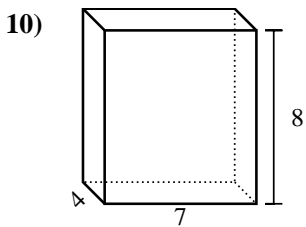
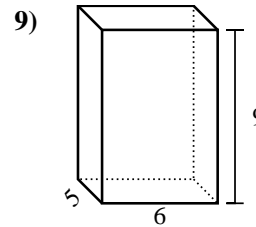
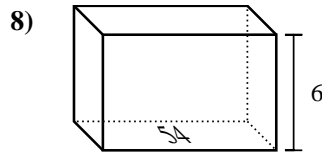
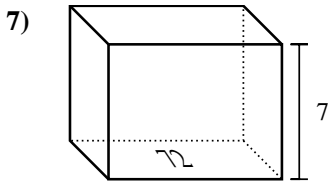
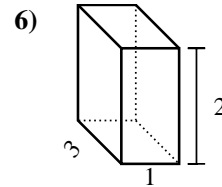
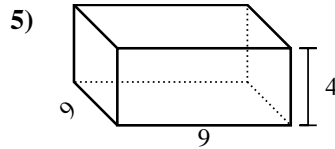
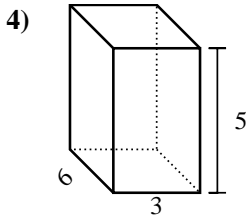
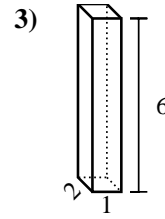
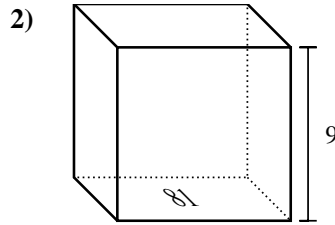
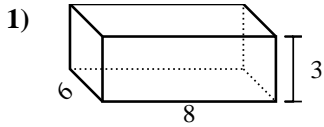


Answers

1. \_\_\_\_\_
2. \_\_\_\_\_
3. \_\_\_\_\_
4. \_\_\_\_\_
5. \_\_\_\_\_
6. \_\_\_\_\_
7. \_\_\_\_\_
8. \_\_\_\_\_
9. \_\_\_\_\_
10. \_\_\_\_\_
11. \_\_\_\_\_
12. \_\_\_\_\_
13. \_\_\_\_\_
14. \_\_\_\_\_
15. \_\_\_\_\_



Find the volume of each rectangular prism. Units are in cm (not to scale). Remember  $V = BH$  and  $V = L \times W \times H$



Answers

1. 144 cm<sup>3</sup>
2. 729 cm<sup>3</sup>
3. 12 cm<sup>3</sup>
4. 90 cm<sup>3</sup>
5. 324 cm<sup>3</sup>
6. 6 cm<sup>3</sup>
7. 504 cm<sup>3</sup>
8. 324 cm<sup>3</sup>
9. 270 cm<sup>3</sup>
10. 224 cm<sup>3</sup>
11. 63 cm<sup>3</sup>
12. 384 cm<sup>3</sup>
13. 24 cm<sup>3</sup>
14. 63 cm<sup>3</sup>
15. 32 cm<sup>3</sup>