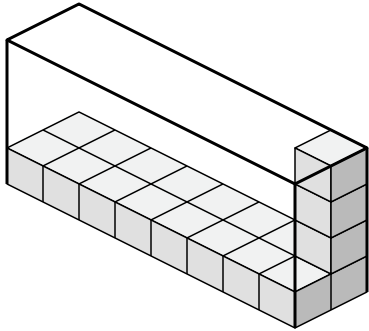




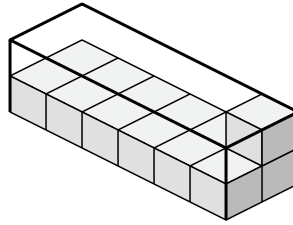
Create an expression to determine the volume of each box.

Answers

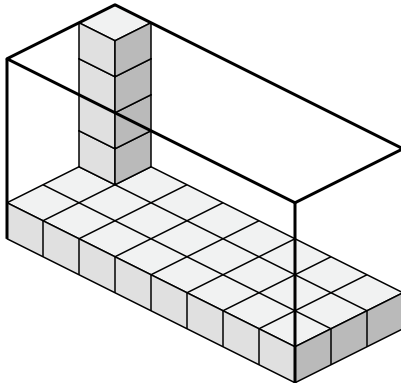
1)



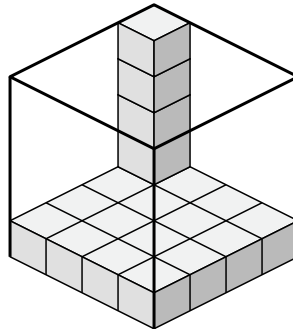
2)



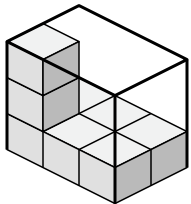
3)



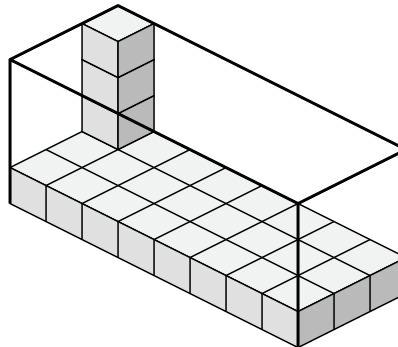
4)



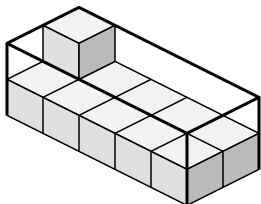
5)



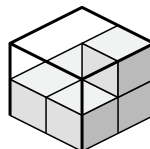
6)



7)



8)

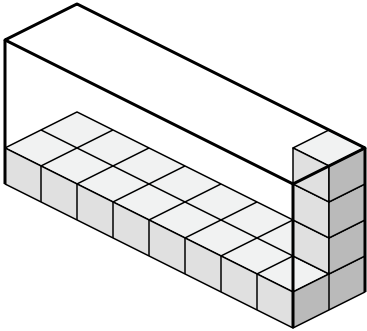


- 1. \_\_\_\_\_
- 2. \_\_\_\_\_
- 3. \_\_\_\_\_
- 4. \_\_\_\_\_
- 5. \_\_\_\_\_
- 6. \_\_\_\_\_
- 7. \_\_\_\_\_
- 8. \_\_\_\_\_

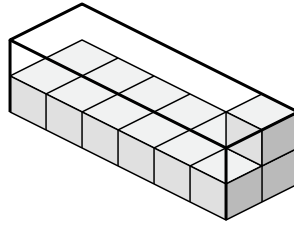


Create an expression to determine the volume of each box.

1)



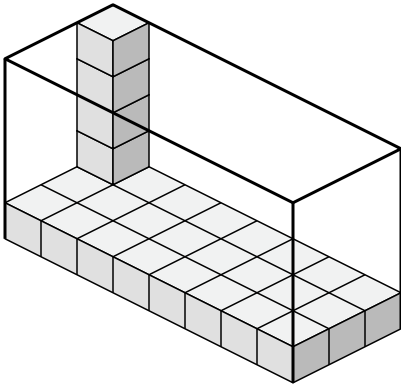
2)



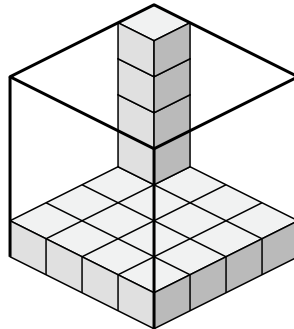
1.  $8 \times 2 \times 4$

2.  $6 \times 2 \times 2$

3)



4)



3.  $8 \times 3 \times 5$

4.  $4 \times 4 \times 5$

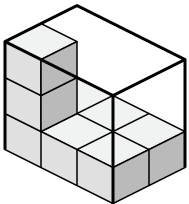
5.  $3 \times 2 \times 3$

6.  $8 \times 3 \times 4$

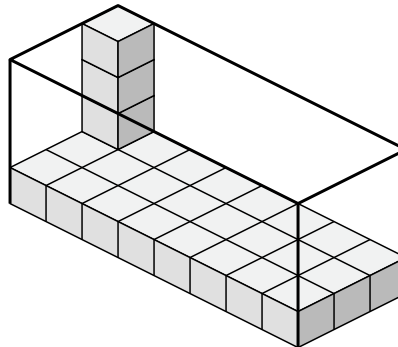
7.  $5 \times 2 \times 2$

8.  $2 \times 2 \times 2$

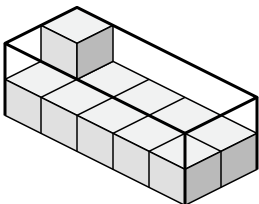
5)



6)



7)



8)

