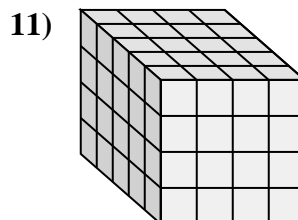
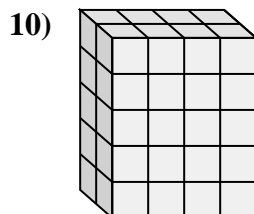
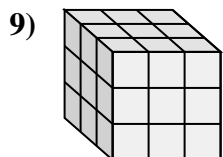
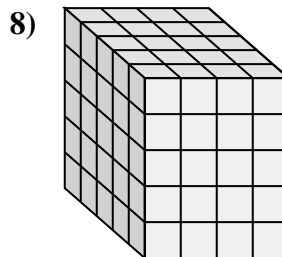
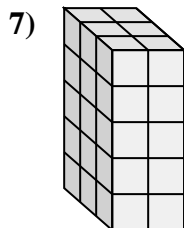
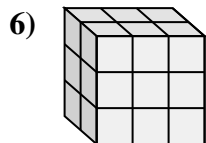
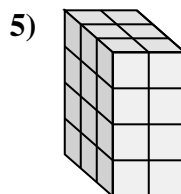
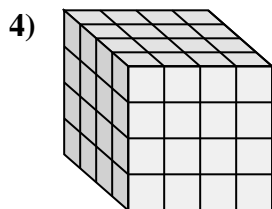
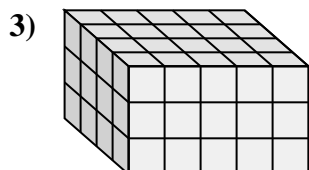
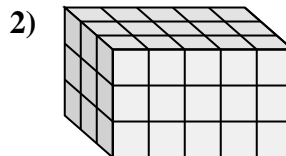
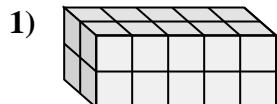
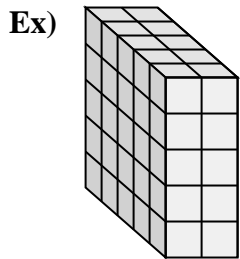




Match each problem with the equation that could represent it. Answer with the missing term and letter.



Answers

Ex. F, 2

1. I, 20

2. H, 3

3. B, 4

4. G, 4

5. D, 4

6. K, 2

7. A, 3

8. E, 5

9. C, 3

10. L, 5

11. J, 5

A. $__ \times 2 \times 5 = 30$

B. $__ \times 5 \times 3 = 60$

C. $3 \times 3 \times __ = 27$

D. $3 \times 2 \times __ = 24$

E. $__ \times 4 \times 5 = 100$

F. $5 \times __ \times 5 = 50$

G. $__ \times 4 \times 4 = 64$

H. $3 \times 5 \times __ = 45$

I. $2 \times 5 \times 2 = __$

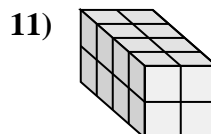
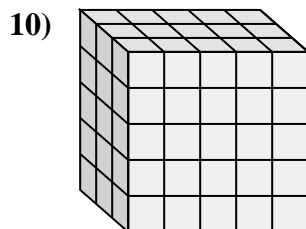
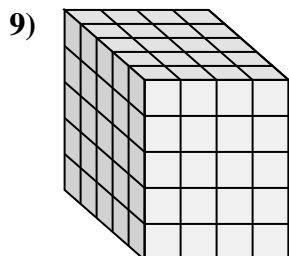
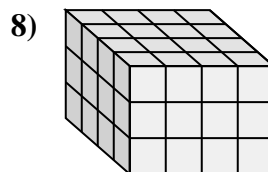
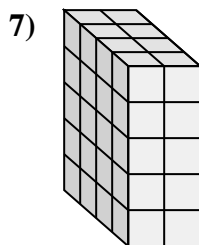
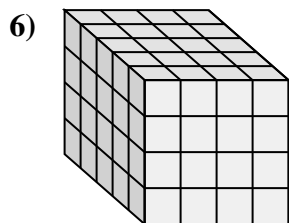
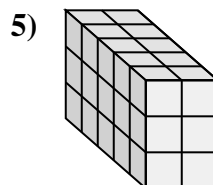
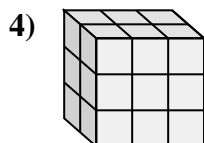
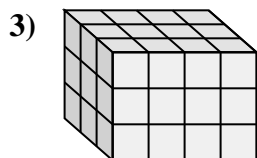
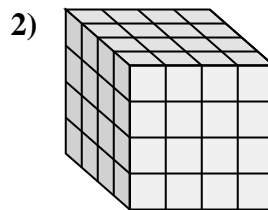
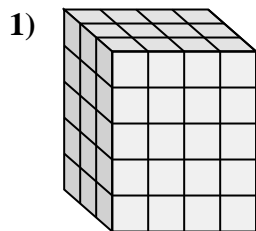
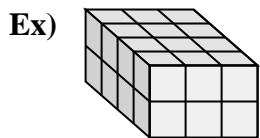
J. $__ \times 4 \times 4 = 80$

K. $__ \times 3 \times 3 = 18$

L. $2 \times 4 \times __ = 40$



Match each problem with the equation that could represent it. Answer with the missing term and letter.



A. $4 \times 4 \times \underline{\quad} = 48$

B. $3 \times 4 \times 5 = \underline{\quad}$

C. $4 \times 2 \times 2 = \underline{\quad}$

D. $5 \times 4 \times \underline{\quad} = 100$

E. $\underline{\quad} \times 2 \times 5 = 40$

F. $5 \times 2 \times \underline{\quad} = 30$

G. $3 \times 4 \times \underline{\quad} = 36$

H. $2 \times 3 \times \underline{\quad} = 18$

I. $5 \times \underline{\quad} \times 4 = 80$

J. $\underline{\quad} \times 3 \times 2 = 24$

K. $4 \times \underline{\quad} \times 4 = 64$

L. $\underline{\quad} \times 5 \times 5 = 75$

Answers

Ex. J, 4

1. B, 60

2. K, 4

3. G, 3

4. H, 3

5. F, 3

6. I, 4

7. E, 4

8. A, 3

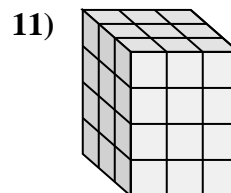
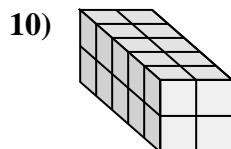
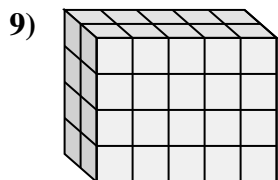
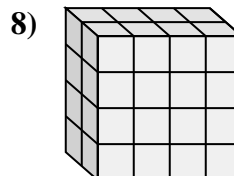
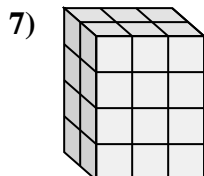
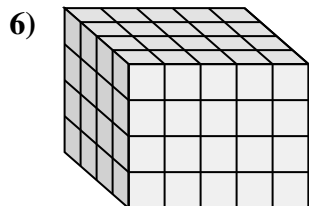
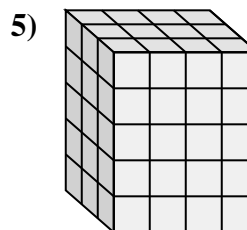
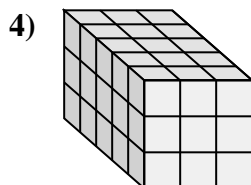
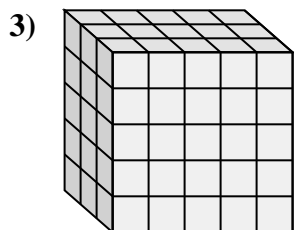
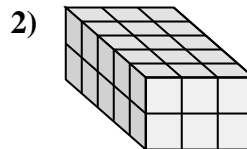
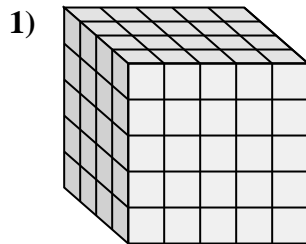
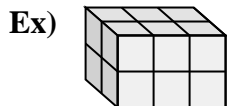
9. D, 5

10. L, 3

11. C, 16



Match each problem with the equation that could represent it. Answer with the missing term and letter.



Answers

Ex. B, 2

1. I, 5

2. K, 30

3. H, 75

4. F, 5

5. A, 4

6. E, 4

7. D, 4

8. L, 2

9. C, 5

10. G, 2

11. J, 3

A. $3 \times \underline{\quad} \times 5 = 60$

B. $\underline{\quad} \times 3 \times 2 = 12$

C. $2 \times \underline{\quad} \times 4 = 40$

D. $2 \times 3 \times \underline{\quad} = 24$

E. $4 \times 5 \times \underline{\quad} = 80$

F. $\underline{\quad} \times 3 \times 3 = 45$

G. $5 \times 2 \times \underline{\quad} = 20$

H. $3 \times 5 \times 5 = \underline{\quad}$

I. $4 \times 5 \times \underline{\quad} = 100$

J. $\underline{\quad} \times 3 \times 4 = 36$

K. $5 \times 3 \times 2 = \underline{\quad}$

L. $\underline{\quad} \times 4 \times 4 = 32$

