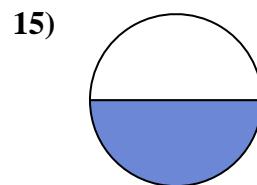
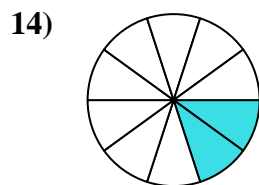
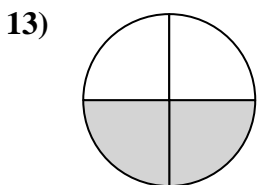
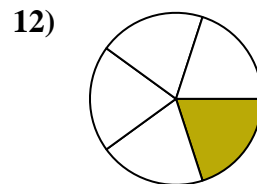
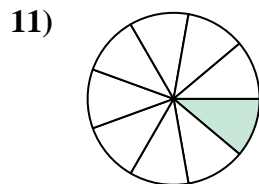
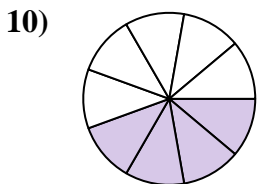
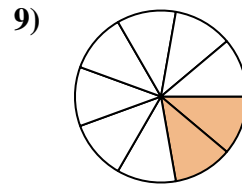
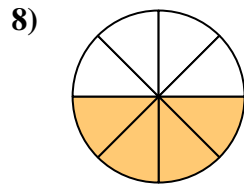
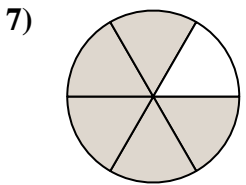
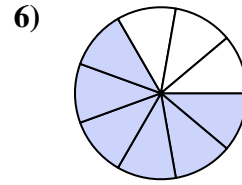
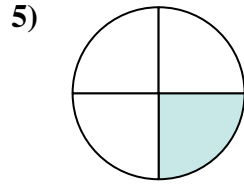
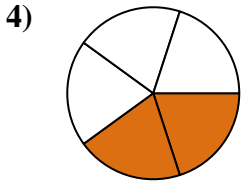
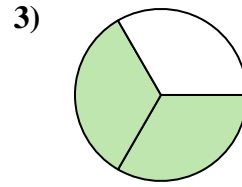
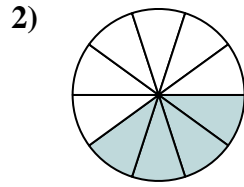
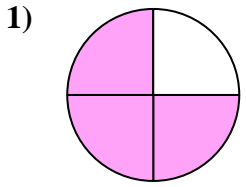




Find the angle (in degrees) of the shaded portion of the circle.

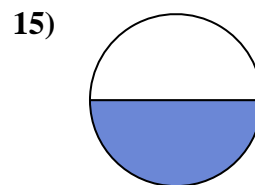
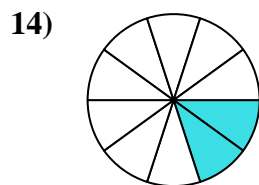
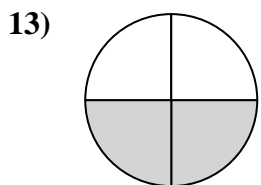
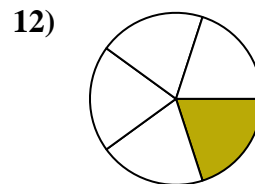
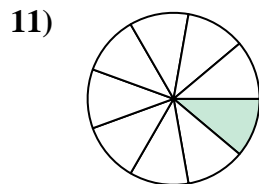
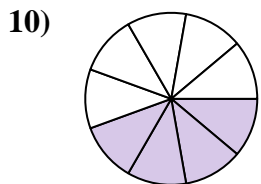
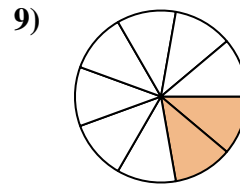
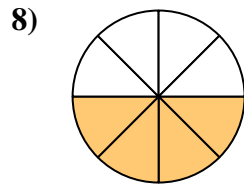
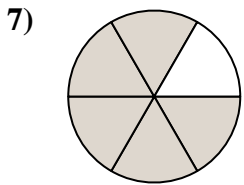
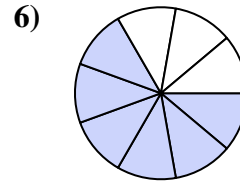
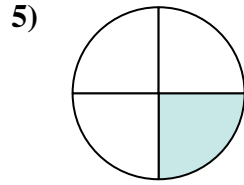
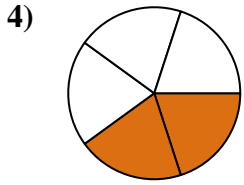
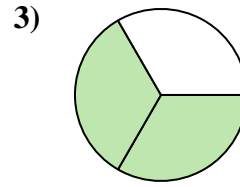
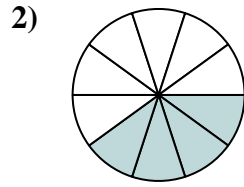
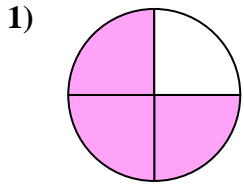
**Answers**



1. \_\_\_\_\_
2. \_\_\_\_\_
3. \_\_\_\_\_
4. \_\_\_\_\_
5. \_\_\_\_\_
6. \_\_\_\_\_
7. \_\_\_\_\_
8. \_\_\_\_\_
9. \_\_\_\_\_
10. \_\_\_\_\_
11. \_\_\_\_\_
12. \_\_\_\_\_
13. \_\_\_\_\_
14. \_\_\_\_\_
15. \_\_\_\_\_



Find the angle (in degrees) of the shaded portion of the circle.



Answers

1. 270

2. 144

3. 240

4. 144

5. 90

6. 240

7. 300

8. 180

9. 80

10. 160

11. 40

12. 72

13. 180

14. 72

15. 180



Find the angle (in degrees) of the shaded portion of the circle.

Answers

180

80

144

40

160

90

72

240

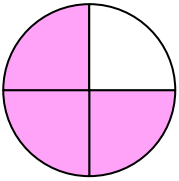
300

144

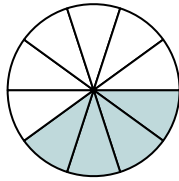
270

240

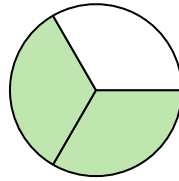
1)



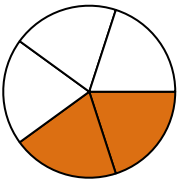
2)



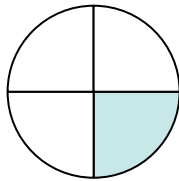
3)



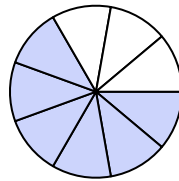
4)



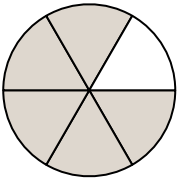
5)



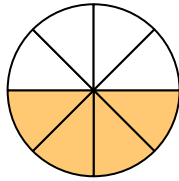
6)



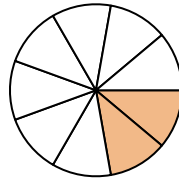
7)



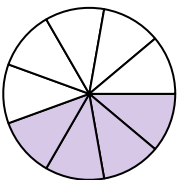
8)



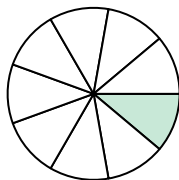
9)



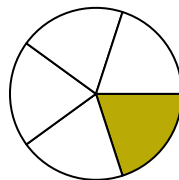
10)



11)



12)



1. \_\_\_\_\_

2. \_\_\_\_\_

3. \_\_\_\_\_

4. \_\_\_\_\_

5. \_\_\_\_\_

6. \_\_\_\_\_

7. \_\_\_\_\_

8. \_\_\_\_\_

9. \_\_\_\_\_

10. \_\_\_\_\_

11. \_\_\_\_\_

12. \_\_\_\_\_