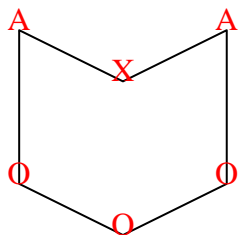




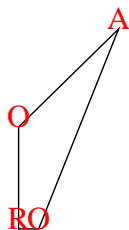


Count the number of Acute, Obtuse, Right and Reflex angles in each shape.


Ex)



1)



2)



Answers

Ex. 2 3 0 1

1. 1 2 1 0

2. 0 0 4 0

3. 1 3 4 3

4. 0 3 2 0

5. 2 1 1 1

6. 5 0 0 5

7. 3 0 0 0

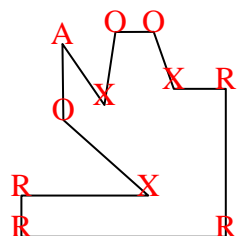
8. 2 2 0 0

9. 4 2 0 4

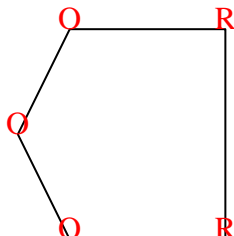
10. 2 0 1 0

11. 2 2 0 0

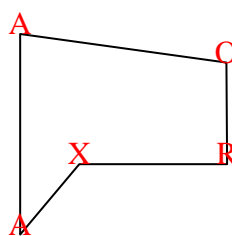
3)



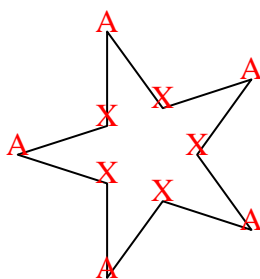
4)



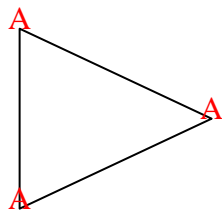
5)



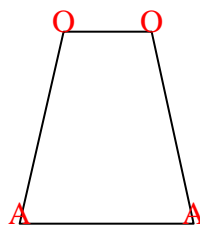
6)



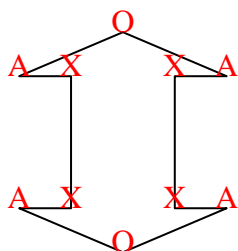
7)



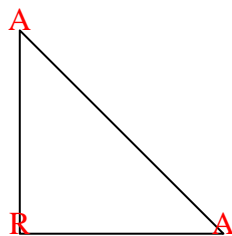
8)



9)



10)



11)

