



Determine if the angle shown is acute, obtuse, right or straight.

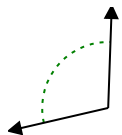
Answers

Ex)

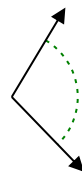


Ex. **right**

1)



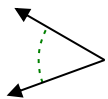
2)



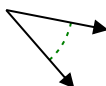
1. _____

2. _____

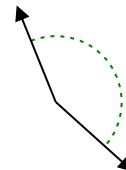
3)



4)



5)



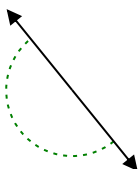
3. _____

4. _____

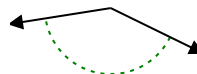
6)



7)



8)

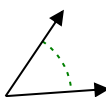


5. _____

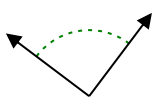
6. _____

7. _____

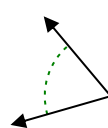
9)



10)



11)

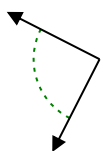


8. _____

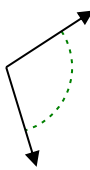
9. _____

10. _____

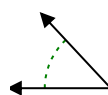
12)



13)



14)




11. _____

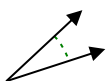
12. _____

13. _____

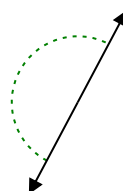
15)



16)



17)

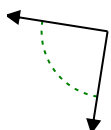


14. _____

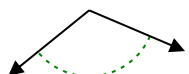
15. _____

16. _____

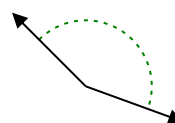
18)



19)



20)



17. _____

18. _____

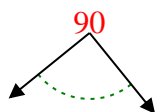
19. _____

20. _____

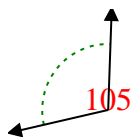


Determine if the angle shown is acute, obtuse, right or straight.

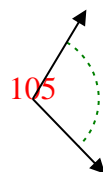
Ex)



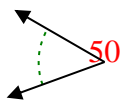
1)



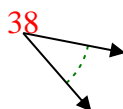
2)



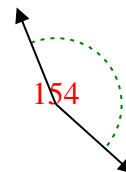
3)



4)



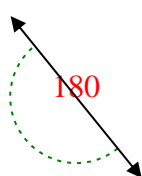
5)



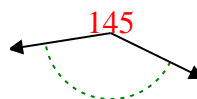
6)



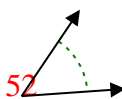
7)



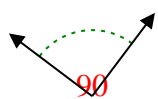
8)



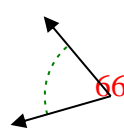
9)



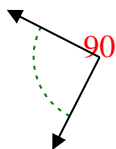
10)



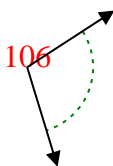
11)



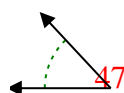
12)



13)



14)



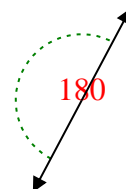
15)



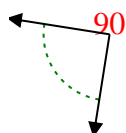
16)



17)



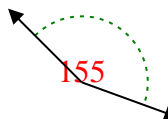
18)



19)



20)



Answers

Ex. **right**

1. **obtuse**

2. **obtuse**

3. **acute**

4. **acute**

5. **obtuse**

6. **acute**

7. **straight**

8. **obtuse**

9. **acute**

10. **right**

11. **acute**

12. **right**

13. **obtuse**

14. **acute**

15. **acute**

16. **acute**

17. **straight**

18. **right**

19. **obtuse**

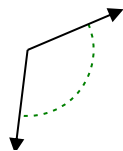
20. **obtuse**



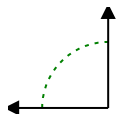
Determine if the angle shown is acute, obtuse, right or straight.

Answers

Ex)



1)



2)

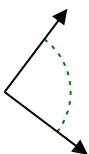


Ex. **obtuse**

1. _____

2. _____

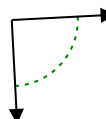
3)



4)



5)



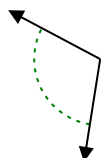
3. _____

4. _____

6)



7)



8)

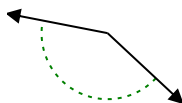


5. _____

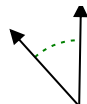
6. _____

7. _____

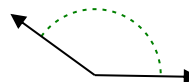
9)



10)



11)

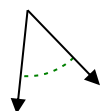


8. _____

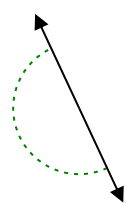
9. _____

10. _____

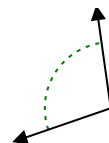
12)



13)



14)

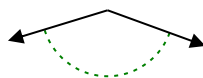


11. _____

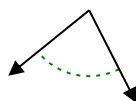
12. _____

13. _____

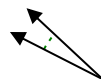
15)



16)



17)

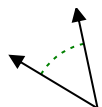


14. _____

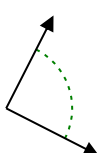
15. _____

16. _____

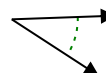
18)



19)



20)



17. _____

18. _____

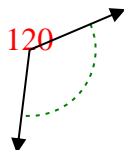
19. _____

20. _____

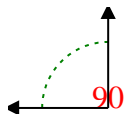


Determine if the angle shown is acute, obtuse, right or straight.

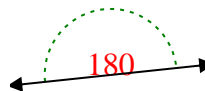
Ex)



1)



2)



Answers

Ex. **obtuse**

1. **right**

2. **straight**

3. **right**

4. **acute**

5. **right**

6. **obtuse**

7. **obtuse**

8. **acute**

9. **obtuse**

10. **acute**

11. **obtuse**

12. **acute**

13. **straight**

14. **obtuse**

15. **obtuse**

16. **acute**

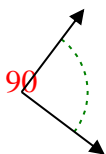
17. **acute**

18. **acute**

19. **right**

20. **acute**

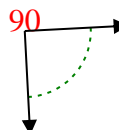
3)



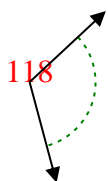
4)



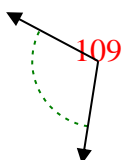
5)



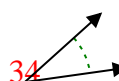
6)



7)



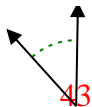
8)



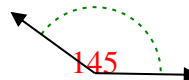
9)



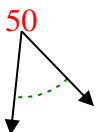
10)



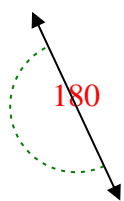
11)



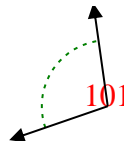
12)



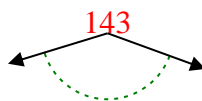
13)



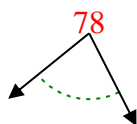
14)



15)



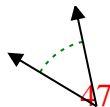
16)



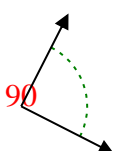
17)



18)



19)



20)





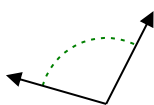
Determine if the angle shown is acute, obtuse, right or straight.

Answers

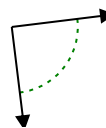
Ex)



1)



2)



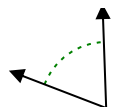
Ex.

obtuse

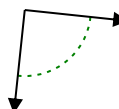
3)



4)



5)



1.

2.

3.

4.

5.

6.

7.

8.

9.

10.

11.

12.

13.

14.

15.

16.

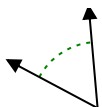
17.

18.

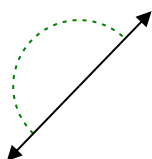
19.

20.

6)



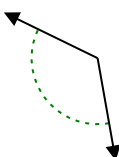
7)



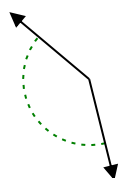
8)



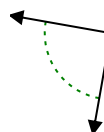
9)



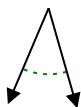
10)



11)



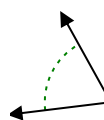
12)



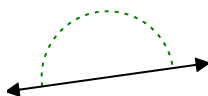
13)



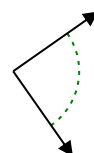
14)



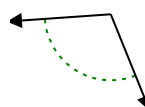
15)



16)



17)



18)



19)



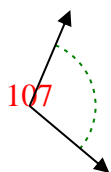
20)



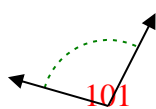


Determine if the angle shown is acute, obtuse, right or straight.

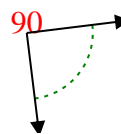
Ex)



1)



2)



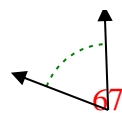
Ex.

obtuse

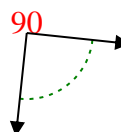
3)



4)



5)



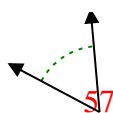
1.

obtuse

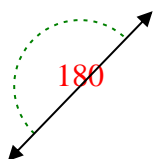
2.

right

6)



7)



8)



3.

acute

4.

acute

5.

right

6.

acute

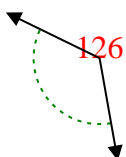
7.

straight

8.

acute

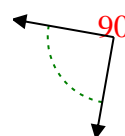
9)



10)



11)



9.

obtuse

10.

obtuse

11.

right

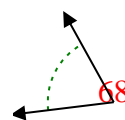
12)



13)



14)



12.

acute

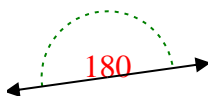
13.

acute

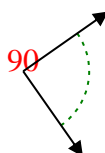
14.

acute

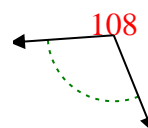
15)



16)



17)



15.

straight

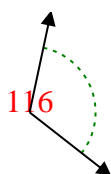
16.

right

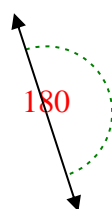
17.

obtuse

18)



19)



20)



18.

obtuse

19.

straight

20.

obtuse

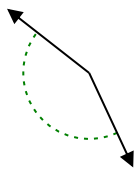


Determine if the angle shown is acute, obtuse, right or straight.

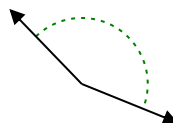
Ex)



1)



2)

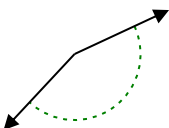


Answers

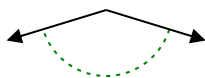
Ex. **straight**

- 1. _____
- 2. _____
- 3. _____
- 4. _____
- 5. _____
- 6. _____
- 7. _____
- 8. _____
- 9. _____
- 10. _____
- 11. _____
- 12. _____
- 13. _____
- 14. _____
- 15. _____
- 16. _____
- 17. _____
- 18. _____
- 19. _____
- 20. _____

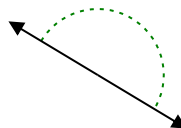
3)



4)



5)



6)



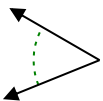
7)



8)



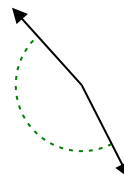
9)



10)



11)



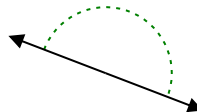
12)



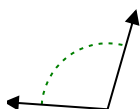
13)



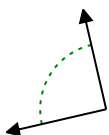
14)



15)



16)



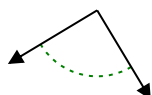
17)



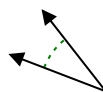
18)



19)



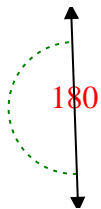
20)



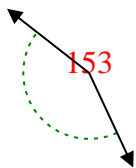


Determine if the angle shown is acute, obtuse, right or straight.

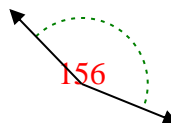
Ex)



1)



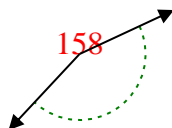
2)



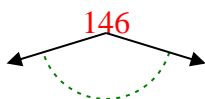
Answers

Ex. **straight**

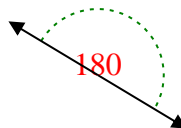
3)



4)



5)



1. **obtuse**

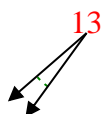
2. **obtuse**

3. **obtuse**

4. **obtuse**

5. **straight**

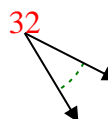
6)



7)



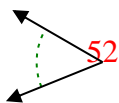
8)



6. **acute**

7. **acute**

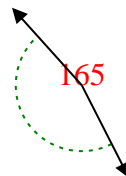
9)



10)



11)



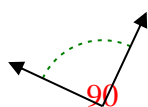
8. **acute**

9. **acute**

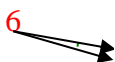
10. **acute**

11. **obtuse**

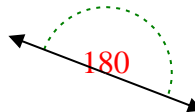
12)



13)



14)

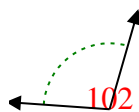


12. **right**

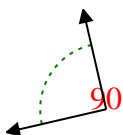
13. **acute**

14. **straight**

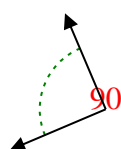
15)



16)



17)



15. **obtuse**

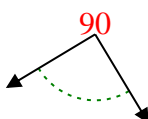
16. **right**

17. **right**

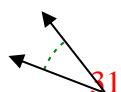
18)



19)



20)



18. **obtuse**

19. **right**

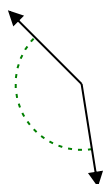
20. **acute**



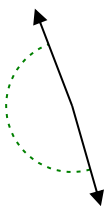
Determine if the angle shown is acute, obtuse, right or straight.

Answers

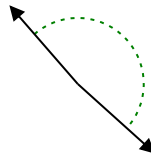
Ex)



1)



2)

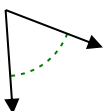


Ex. **obtuse**

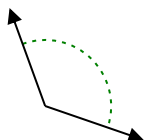
1. _____

2. _____

3)



4)



5)

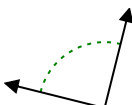


3. _____

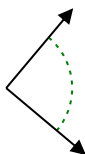
4. _____

5. _____

6)



7)



8)

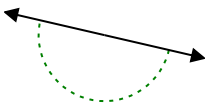


6. _____

7. _____

8. _____

9)



10)



11)

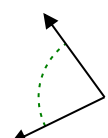


9. _____

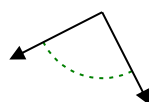
10. _____

11. _____

12)



13)



14)

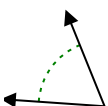


12. _____

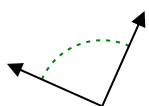
13. _____

14. _____

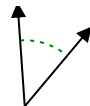
15)



16)



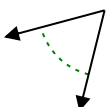
17)



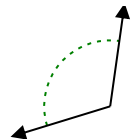
15. _____

16. _____

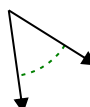
18)



19)



20)



18. _____

19. _____

20. _____

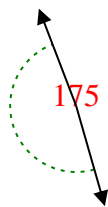


Determine if the angle shown is acute, obtuse, right or straight.

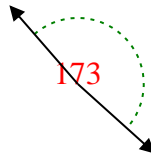
Ex)



1)



2)



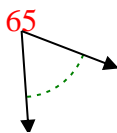
Answers

Ex. **obtuse**

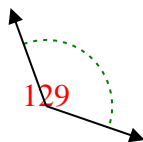
1. **obtuse**

2. **obtuse**

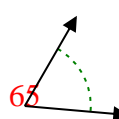
3)



4)



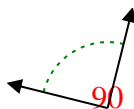
5)



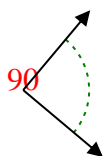
3. **acute**

4. **obtuse**

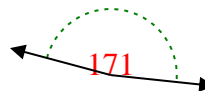
6)



7)



8)

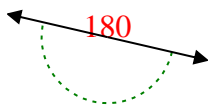


5. **acute**

6. **right**

7. **right**

9)



10)



11)

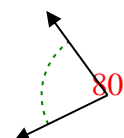


8. **obtuse**

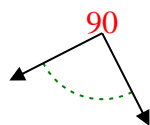
9. **straight**

10. **acute**

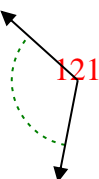
12)



13)



14)

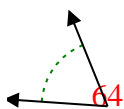


11. **straight**

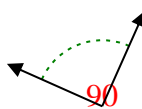
12. **acute**

13. **right**

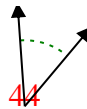
15)



16)



17)

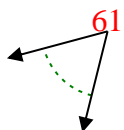


14. **obtuse**

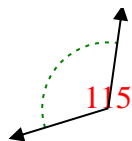
15. **acute**

16. **right**

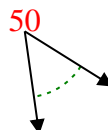
18)



19)



20)



17. **acute**

18. **acute**

19. **obtuse**

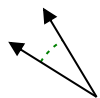
20. **acute**



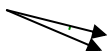
Determine if the angle shown is acute, obtuse, right or straight.

Answers

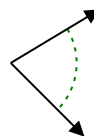
Ex)



1)



2)

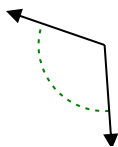


Ex. **acute**

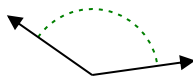
1. _____

2. _____

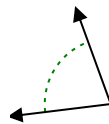
3)



4)



5)

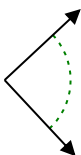


3. _____

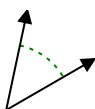
4. _____

5. _____

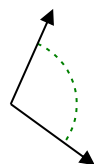
6)



7)



8)

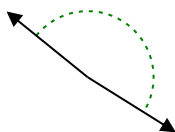


6. _____

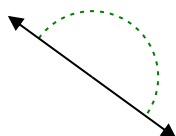
7. _____

8. _____

9)



10)



11)



9. _____

10. _____

11. _____

12)



13)



14)

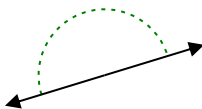


12. _____

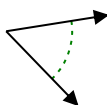
13. _____

14. _____

15)



16)



17)

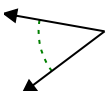


15. _____

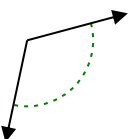
16. _____

17. _____

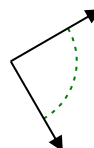
18)



19)



20)



18. _____

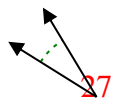
19. _____

20. _____

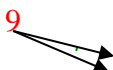


Determine if the angle shown is acute, obtuse, right or straight.

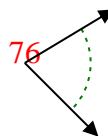
Ex)



1)



2)

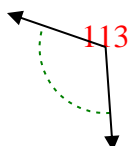


Ex. **acute**

1. **acute**

2. **acute**

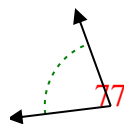
3)



4)



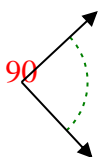
5)



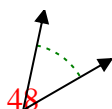
3. **obtuse**

4. **obtuse**

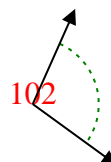
6)



7)



8)

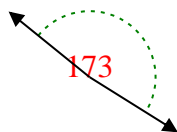


5. **acute**

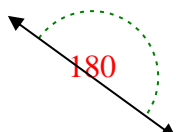
6. **right**

7. **acute**

9)



10)



11)



8. **obtuse**

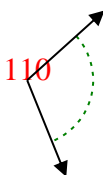
9. **obtuse**

10. **straight**

12)



13)



14)

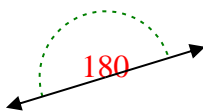


11. **obtuse**

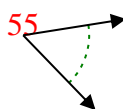
12. **obtuse**

13. **obtuse**

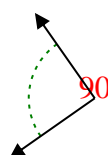
15)



16)



17)

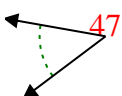


14. **right**

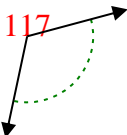
15. **straight**

16. **acute**

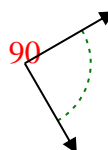
18)



19)



20)



17. **right**

18. **acute**

19. **obtuse**

20. **right**

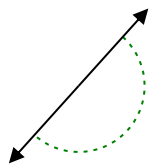
Answers



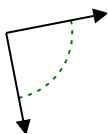
Determine if the angle shown is acute, obtuse, right or straight.

Answers

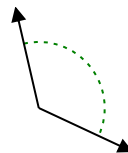
Ex)



1)



2)

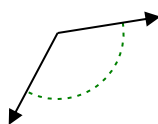


Ex. **straight**

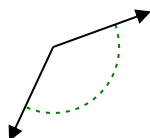
1. _____

2. _____

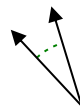
3)



4)



5)



3. _____

4. _____

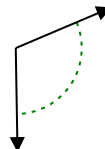
6)



7)



8)

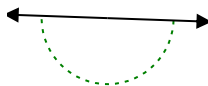


5. _____

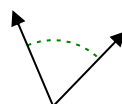
6. _____

7. _____

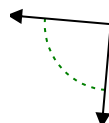
9)



10)



11)

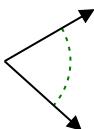


8. _____

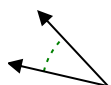
9. _____

10. _____

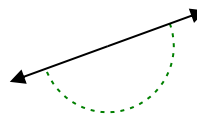
12)



13)



14)

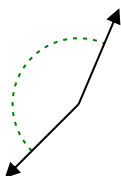


11. _____

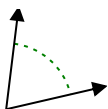
12. _____

13. _____

15)



16)



17)

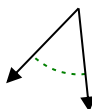


14. _____

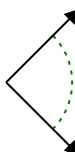
15. _____

16. _____

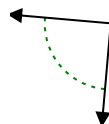
18)



19)



20)



17. _____

18. _____

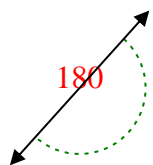
19. _____

20. _____

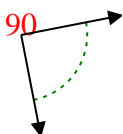


Determine if the angle shown is acute, obtuse, right or straight.

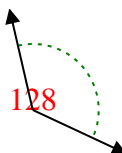
Ex)



1)



2)



Ex. **straight**

1. **right**

2. **obtuse**

3. **obtuse**

4. **obtuse**

5. **acute**

6. **obtuse**

7. **obtuse**

8. **obtuse**

9. **straight**

10. **acute**

11. **right**

12. **acute**

13. **acute**

14. **straight**

15. **obtuse**

16. **acute**

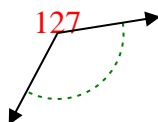
17. **acute**

18. **acute**

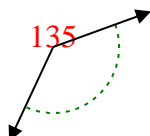
19. **right**

20. **right**

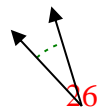
3)



4)



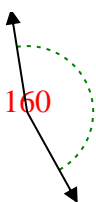
5)



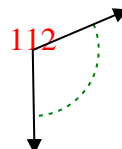
6)



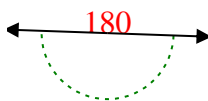
7)



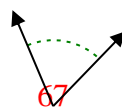
8)



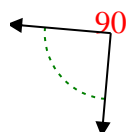
9)



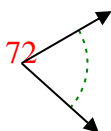
10)



11)



12)



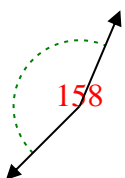
13)



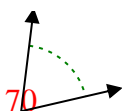
14)



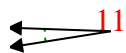
15)



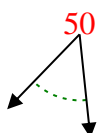
16)



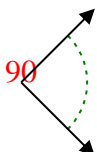
17)



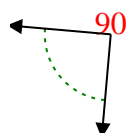
18)



19)



20)





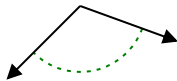
Determine if the angle shown is acute, obtuse, right or straight.

Answers

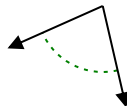
Ex)



1)



2)

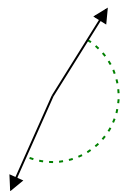


Ex. **acute**

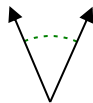
1. _____

2. _____

3)



4)



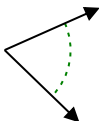
5)



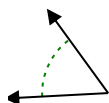
3. _____

4. _____

6)



7)



8)

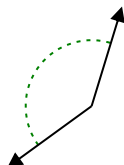


5. _____

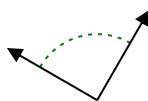
6. _____

7. _____

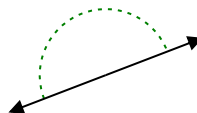
9)



10)



11)

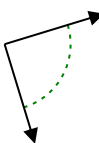


8. _____

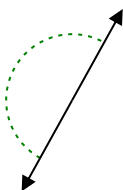
9. _____

10. _____

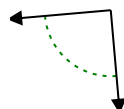
12)



13)



14)

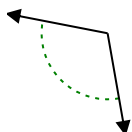


11. _____

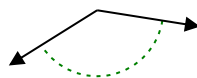
12. _____

13. _____

15)



16)



17)

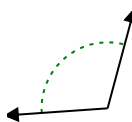


14. _____

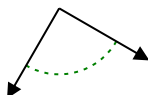
15. _____

16. _____

18)



19)



20)



17. _____

18. _____

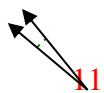
19. _____

20. _____

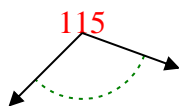


Determine if the angle shown is acute, obtuse, right or straight.

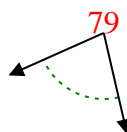
Ex)



1)



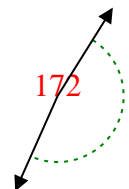
2)



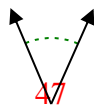
Answers

Ex. **acute**

3)



4)



5)



1. **obtuse**

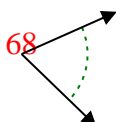
2. **acute**

3. **obtuse**

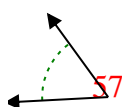
4. **acute**

5. **acute**

6)



7)



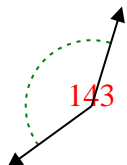
8)



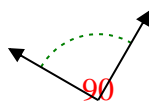
6. **acute**

7. **acute**

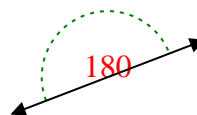
9)



10)



11)



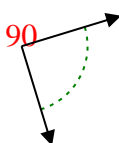
8. **acute**

9. **obtuse**

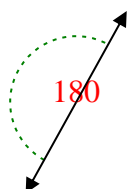
10. **right**

11. **straight**

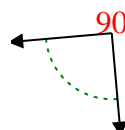
12)



13)



14)

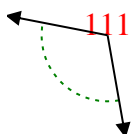


12. **right**

13. **straight**

14. **right**

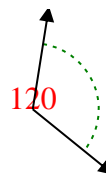
15)



16)



17)

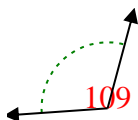


15. **obtuse**

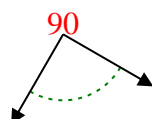
16. **obtuse**

17. **obtuse**

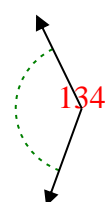
18)



19)



20)



18. **obtuse**

19. **right**

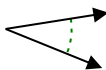
20. **obtuse**



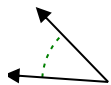
Determine if the angle shown is acute, obtuse, right or straight.

Answers

Ex)



1)



2)

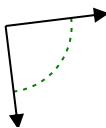


Ex. **acute**

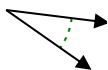
1. _____

2. _____

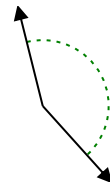
3)



4)



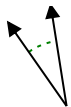
5)



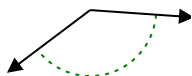
3. _____

4. _____

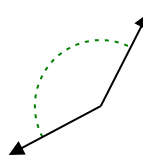
6)



7)



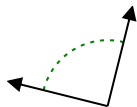
8)



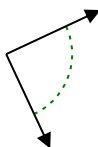
5. _____

6. _____

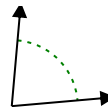
9)



10)



11)



7. _____

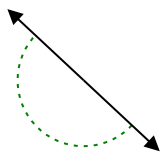
8. _____

9. _____

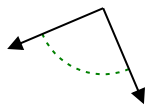
10. _____

11. _____

12)



13)



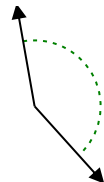
14)



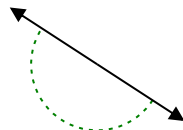
12. _____

13. _____

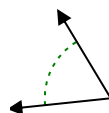
15)



16)



17)



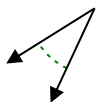
14. _____

15. _____

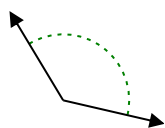
16. _____

17. _____

18)



19)



20)



18. _____

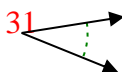
19. _____

20. _____

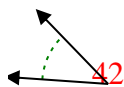


Determine if the angle shown is acute, obtuse, right or straight.

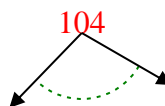
Ex)



1)



2)



Ex. **acute**

1. **acute**

2. **obtuse**

3. **right**

4. **acute**

5. **obtuse**

6. **acute**

7. **obtuse**

8. **obtuse**

9. **right**

10. **right**

11. **acute**

12. **straight**

13. **right**

14. **obtuse**

15. **obtuse**

16. **straight**

17. **acute**

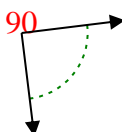
18. **acute**

19. **obtuse**

20. **obtuse**

20. **obtuse**

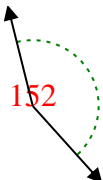
3)



4)



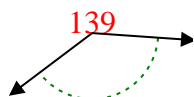
5)



6)



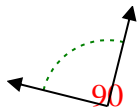
7)



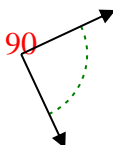
8)



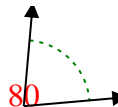
9)



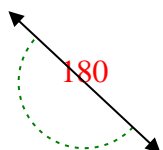
10)



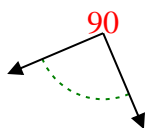
11)



12)



13)



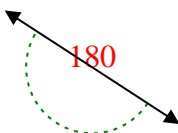
14)



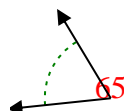
15)



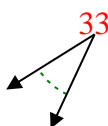
16)



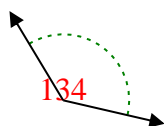
17)



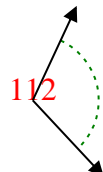
18)



19)



20)

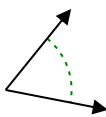




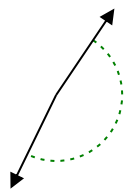
Determine if the angle shown is acute, obtuse, right or straight.

Answers

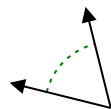
Ex)



1)



2)

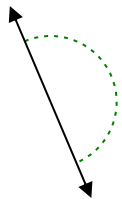


Ex. **acute**

1. _____

2. _____

3)



4)



5)



3. _____

4. _____

5. _____

6)



7)



8)

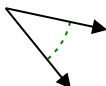


6. _____

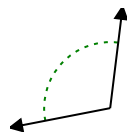
7. _____

8. _____

9)



10)



11)



9. _____

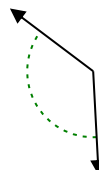
10. _____

11. _____

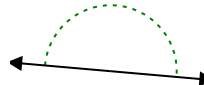
12)



13)



14)

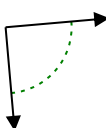


12. _____

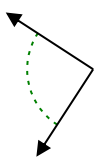
13. _____

14. _____

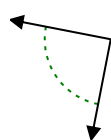
15)



16)



17)



15. _____

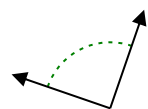
16. _____

17. _____

18)



19)



20)



18. _____

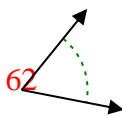
19. _____

20. _____

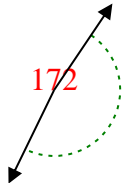


Determine if the angle shown is acute, obtuse, right or straight.

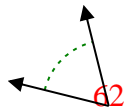
Ex)



1)



2)

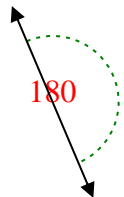


Ex. **acute**

1. **obtuse**

2. **acute**

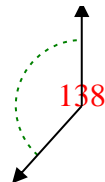
3)



4)



5)



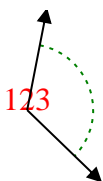
3. **straight**

4. **acute**

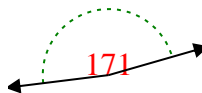
6)



7)



8)

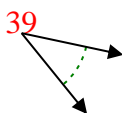


5. **obtuse**

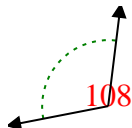
6. **obtuse**

7. **obtuse**

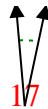
9)



10)



11)



8. **obtuse**

9. **acute**

10. **obtuse**

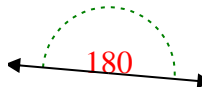
12)



13)



14)

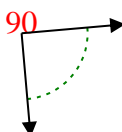


11. **acute**

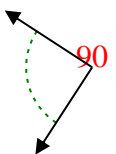
12. **acute**

13. **obtuse**

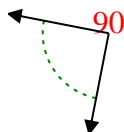
15)



16)



17)



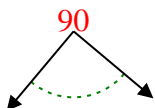
14. **straight**

15. **right**

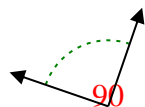
16. **right**

17. **right**

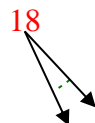
18)



19)



20)



18. **right**

19. **right**

20. **acute**