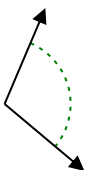




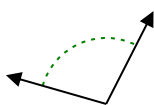
Determine if the angle shown is acute, obtuse, right or straight.

Answers

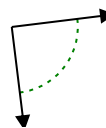
Ex)



1)



2)



Ex. **obtuse**

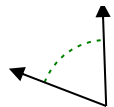
1. _____

2. _____

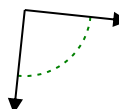
3)



4)



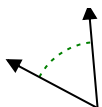
5)



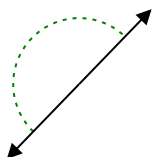
3. _____

4. _____

6)



7)



8)

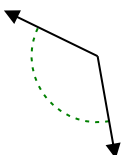


5. _____

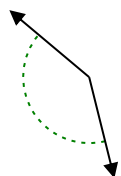
6. _____

7. _____

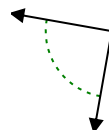
9)



10)



11)

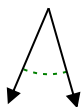


8. _____

9. _____

10. _____

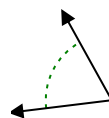
12)



13)



14)

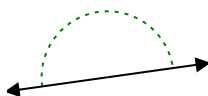


11. _____

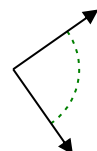
12. _____

13. _____

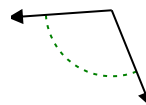
15)



16)



17)



14. _____

15. _____

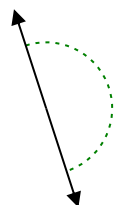
16. _____

17. _____

18)



19)



20)



18. _____

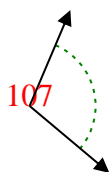
19. _____

20. _____

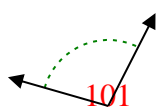


Determine if the angle shown is acute, obtuse, right or straight.

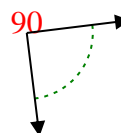
Ex)



1)



2)



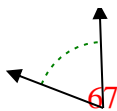
Ex.

obtuse

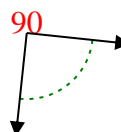
3)



4)



5)



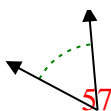
1.

obtuse

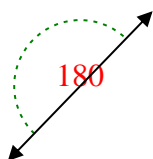
2.

right

6)



7)



8)



3.

acute

4.

acute

5.

right

6.

acute

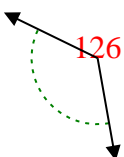
7.

straight

8.

acute

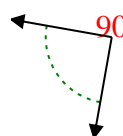
9)



10)



11)



9.

obtuse

10.

obtuse

11.

right

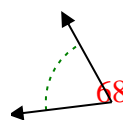
12)



13)



14)



12.

acute

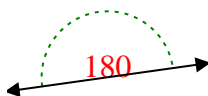
13.

acute

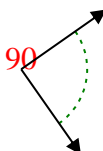
14.

acute

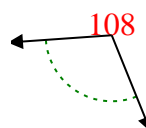
15)



16)



17)



15.

straight

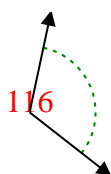
16.

right

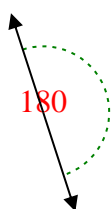
17.

obtuse

18)



19)



20)



18.

obtuse

19.

straight

20.

obtuse