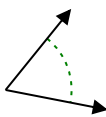




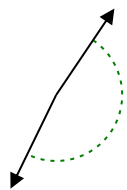
Determine if the angle shown is acute, obtuse, right or straight.

Answers

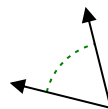
Ex)



1)



2)

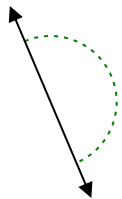


Ex. **acute**

1. _____

2. _____

3)



4)



5)



3. _____

4. _____

5. _____

6)



7)



8)

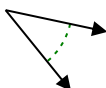


6. _____

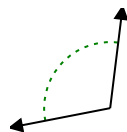
7. _____

8. _____

9)



10)



11)



9. _____

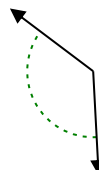
10. _____

11. _____

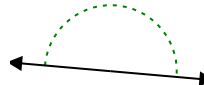
12)



13)



14)

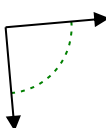


12. _____

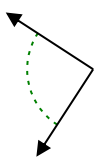
13. _____

14. _____

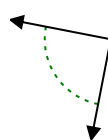
15)



16)



17)



15. _____

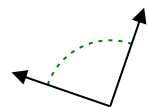
16. _____

17. _____

18)



19)



20)



18. _____

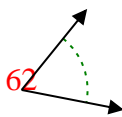
19. _____

20. _____

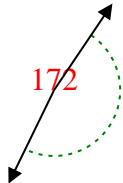


Determine if the angle shown is acute, obtuse, right or straight.

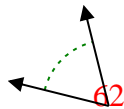
Ex)



1)



2)

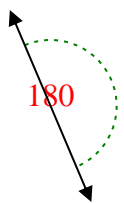


Ex. acute

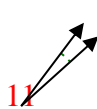
1. obtuse

2. acute

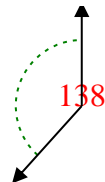
3)



4)



5)

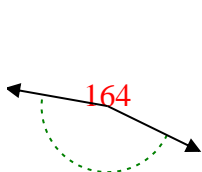


3. straight

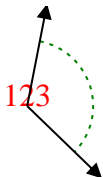
4. acute

5. obtuse

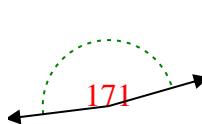
6)



7)



8)

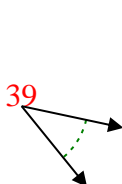


6. obtuse

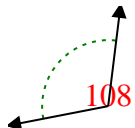
7. obtuse

8. obtuse

9)



10)



11)



9. acute

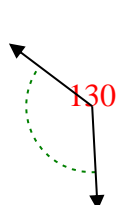
10. obtuse

11. acute

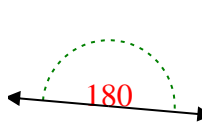
12)



13)



14)

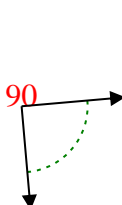


12. acute

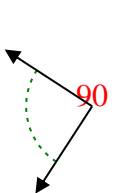
13. obtuse

14. straight

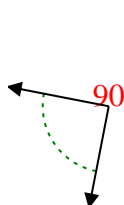
15)



16)



17)

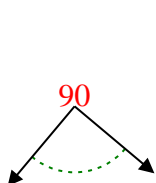


15. right

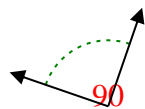
16. right

17. right

18)



19)



20)



18. right

19. right

20. acute