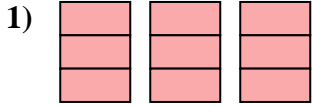


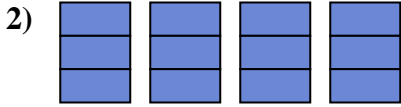


Write the shaded amount as a fraction.

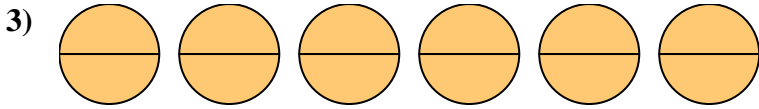
Answers



1. \_\_\_\_\_

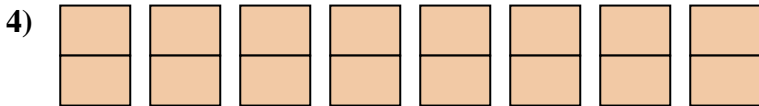


2. \_\_\_\_\_



3. \_\_\_\_\_

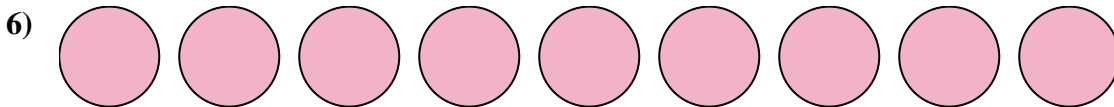
4. \_\_\_\_\_



5. \_\_\_\_\_

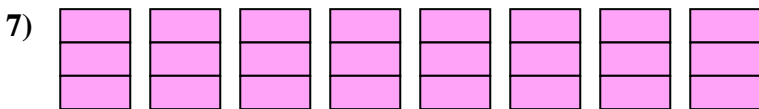


6. \_\_\_\_\_



7. \_\_\_\_\_

8. \_\_\_\_\_



9. \_\_\_\_\_

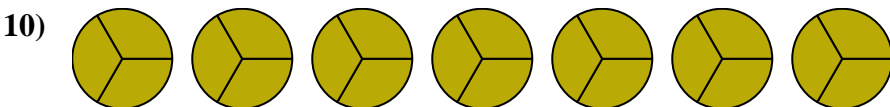


10. \_\_\_\_\_

11. \_\_\_\_\_

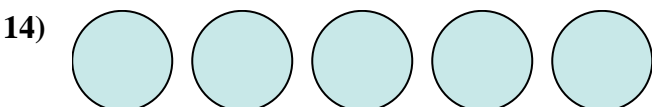
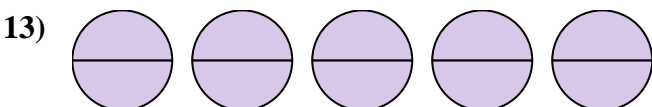
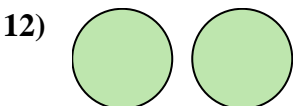
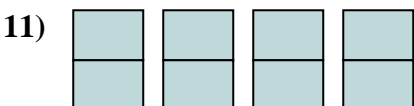


12. \_\_\_\_\_



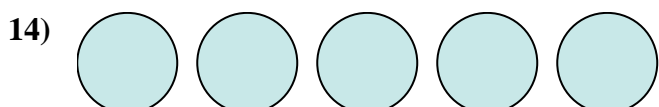
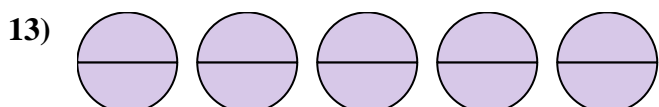
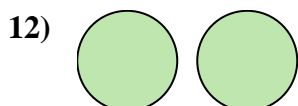
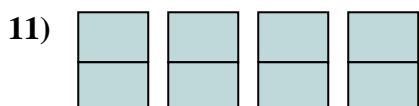
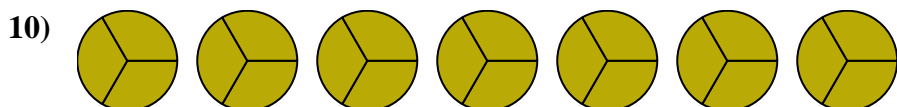
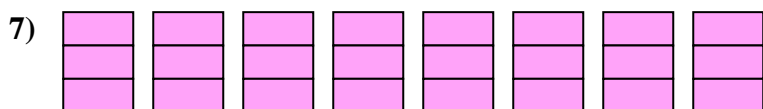
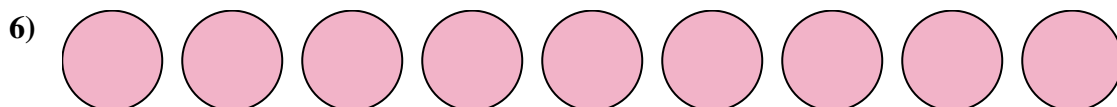
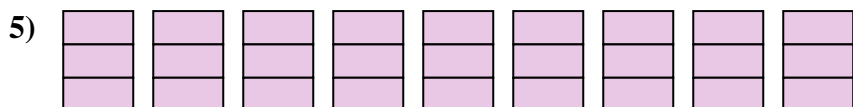
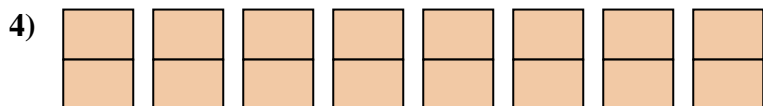
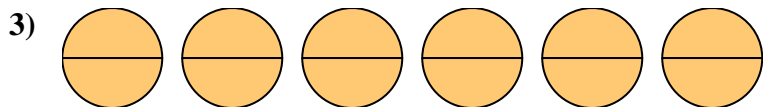
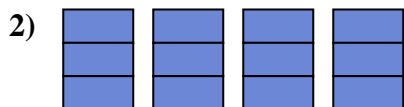
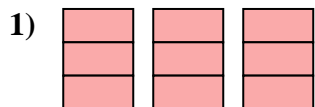
13. \_\_\_\_\_

14. \_\_\_\_\_





Write the shaded amount as a fraction.



Answers

1.  $\frac{9}{3}$

2.  $\frac{12}{3}$

3.  $\frac{12}{2}$

4.  $\frac{16}{2}$

5.  $\frac{27}{3}$

6.  $\frac{9}{1}$

7.  $\frac{24}{3}$

8.  $\frac{6}{2}$

9.  $\frac{3}{1}$

10.  $\frac{21}{3}$

11.  $\frac{8}{2}$

12.  $\frac{2}{1}$

13.  $\frac{10}{2}$

14.  $\frac{5}{1}$