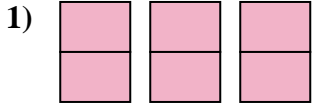


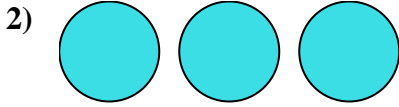


Write the shaded amount as a fraction.

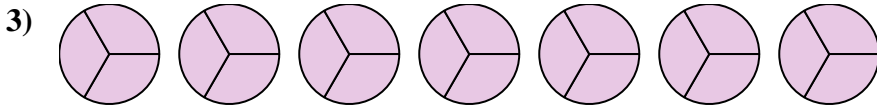
Answers



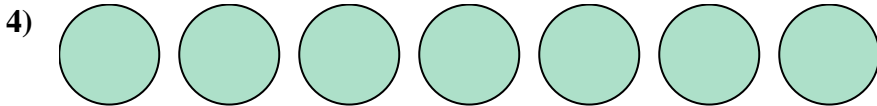
1. \_\_\_\_\_



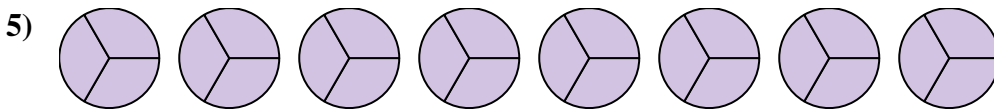
2. \_\_\_\_\_



3. \_\_\_\_\_



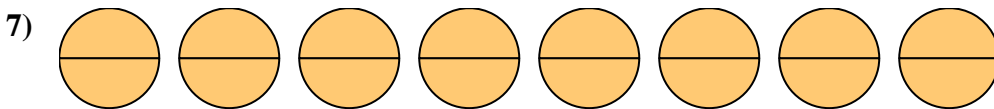
5. \_\_\_\_\_



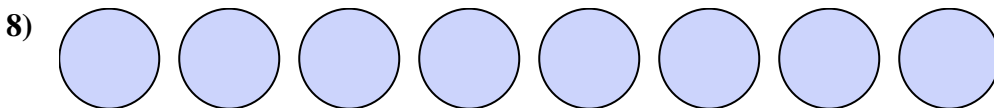
6. \_\_\_\_\_



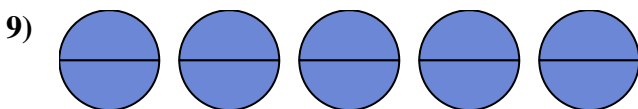
7. \_\_\_\_\_



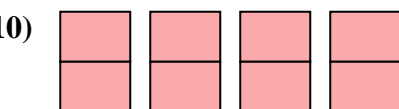
8. \_\_\_\_\_



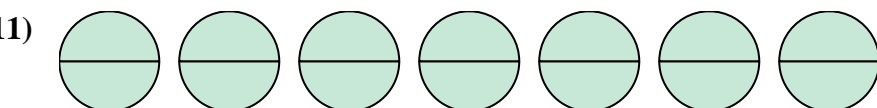
9. \_\_\_\_\_




10. \_\_\_\_\_



11. \_\_\_\_\_



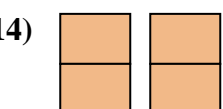
12. \_\_\_\_\_



13. \_\_\_\_\_

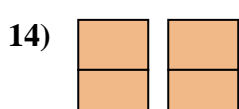

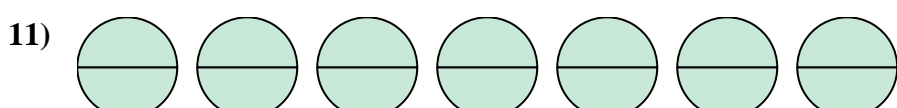
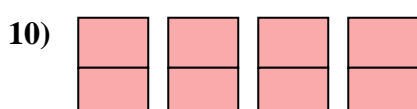
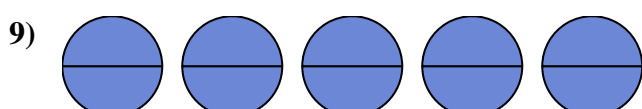
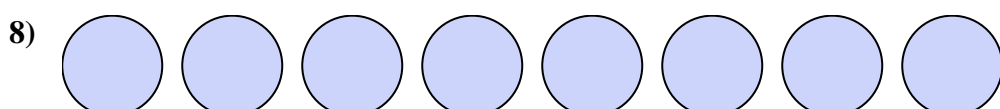
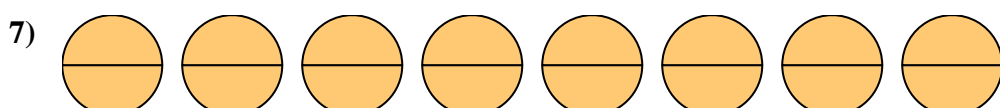
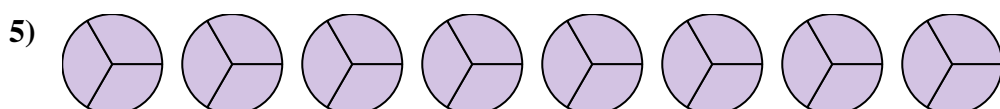

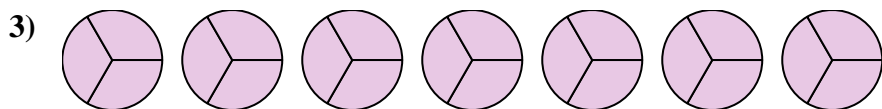

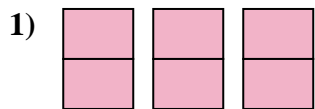


14. \_\_\_\_\_





Write the shaded amount as a fraction.



Answers

1.  $\frac{6}{2}$

2.  $\frac{3}{1}$

3.  $\frac{21}{3}$

4.  $\frac{7}{1}$

5.  $\frac{24}{3}$

6.  $\frac{12}{3}$

7.  $\frac{16}{2}$

8.  $\frac{8}{1}$

9.  $\frac{10}{2}$

10.  $\frac{8}{2}$

11.  $\frac{14}{2}$

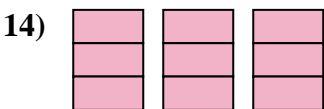
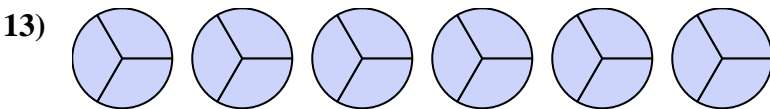
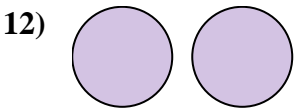
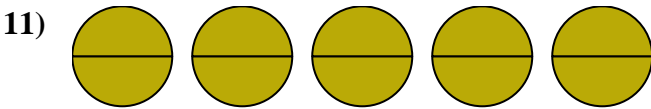
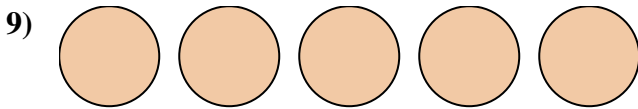
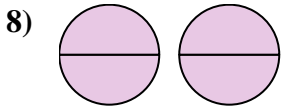
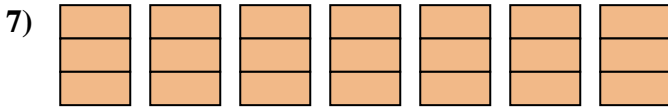
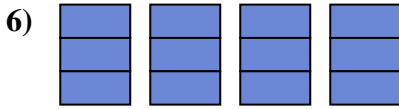
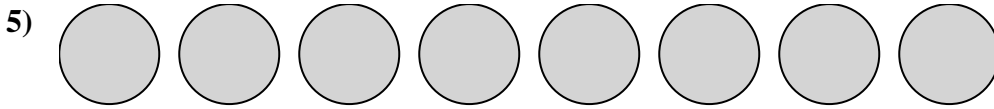
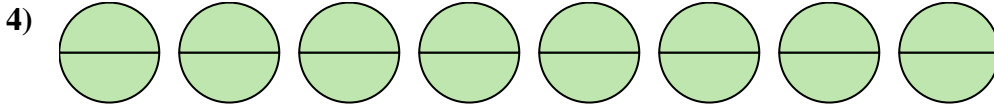
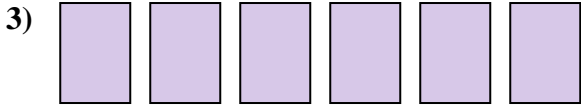
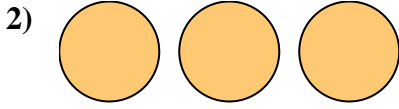
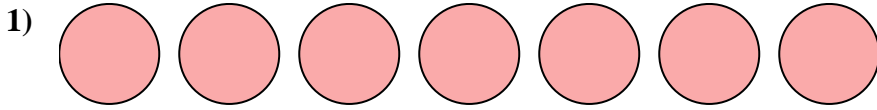
12.  $\frac{4}{1}$

13.  $\frac{6}{1}$

14.  $\frac{4}{2}$



Write the shaded amount as a fraction.



Answers

1. \_\_\_\_\_

2. \_\_\_\_\_

3. \_\_\_\_\_

4. \_\_\_\_\_

5. \_\_\_\_\_

6. \_\_\_\_\_

7. \_\_\_\_\_

8. \_\_\_\_\_

9. \_\_\_\_\_

10. \_\_\_\_\_

11. \_\_\_\_\_

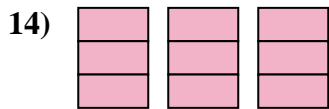
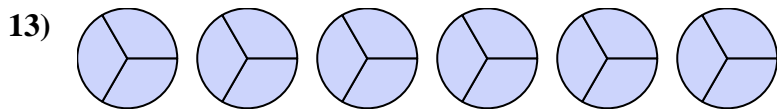
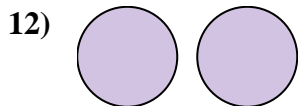
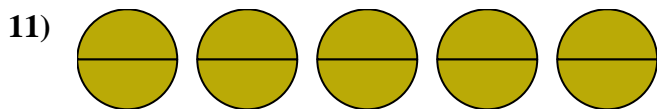
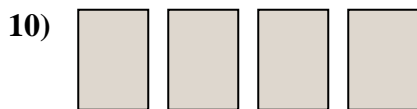
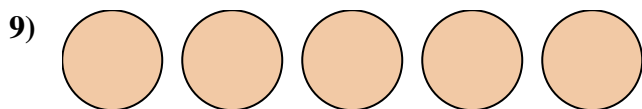
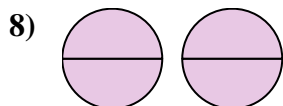
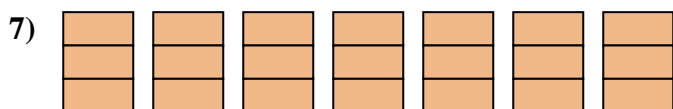
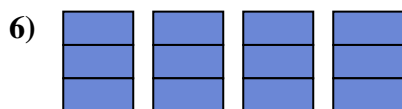
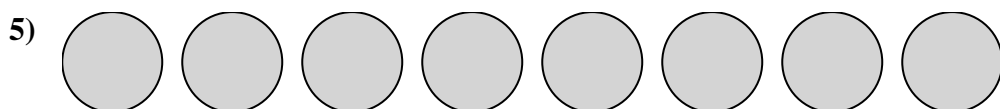
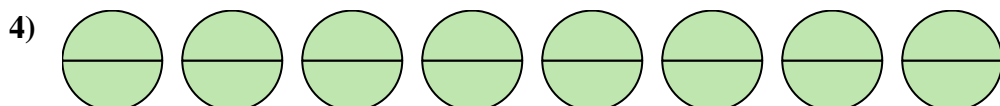

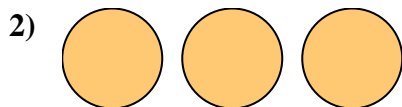
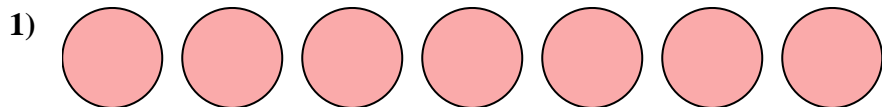
12. \_\_\_\_\_

13. \_\_\_\_\_

14. \_\_\_\_\_



Write the shaded amount as a fraction.



Answers

1.  $\frac{7}{1}$

2.  $\frac{3}{1}$

3.  $\frac{6}{1}$

4.  $\frac{16}{2}$

5.  $\frac{8}{1}$

6.  $\frac{12}{3}$

7.  $\frac{21}{3}$

8.  $\frac{4}{2}$

9.  $\frac{5}{1}$

10.  $\frac{4}{1}$

11.  $\frac{10}{2}$

12.  $\frac{2}{1}$

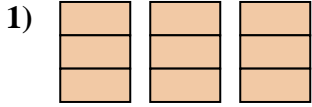
13.  $\frac{18}{3}$

14.  $\frac{9}{3}$

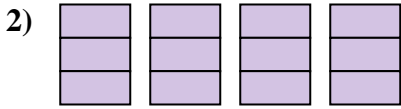


Write the shaded amount as a fraction.

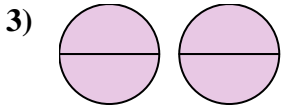
Answers



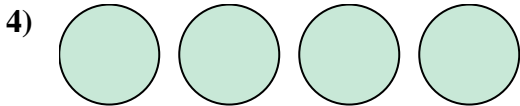
1. \_\_\_\_\_



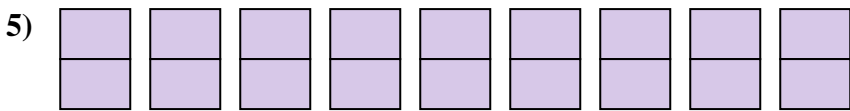
2. \_\_\_\_\_




3. \_\_\_\_\_



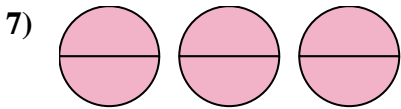
4. \_\_\_\_\_



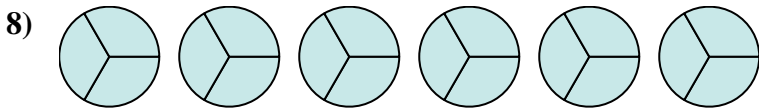
5. \_\_\_\_\_



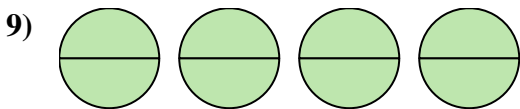
6. \_\_\_\_\_



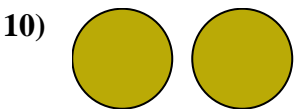
7. \_\_\_\_\_



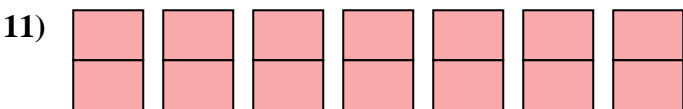
8. \_\_\_\_\_



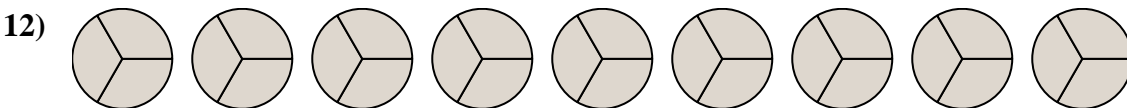
9. \_\_\_\_\_



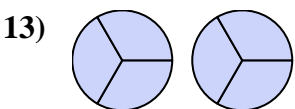
10. \_\_\_\_\_



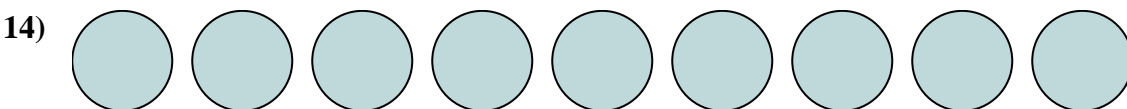
11. \_\_\_\_\_



12. \_\_\_\_\_



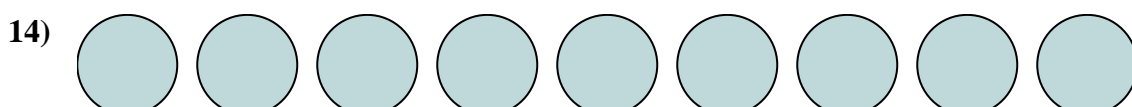
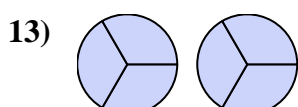
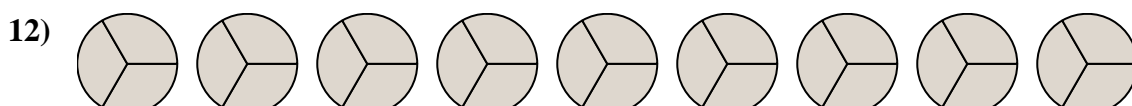
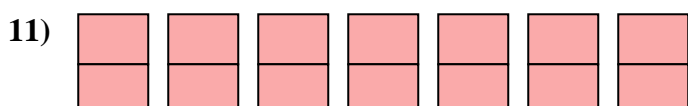

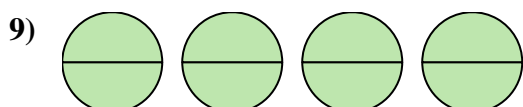
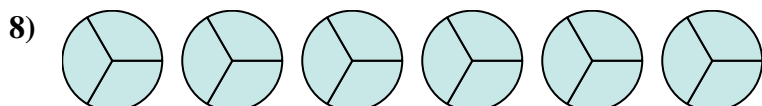
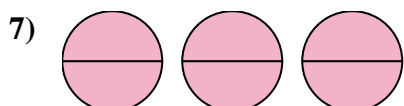

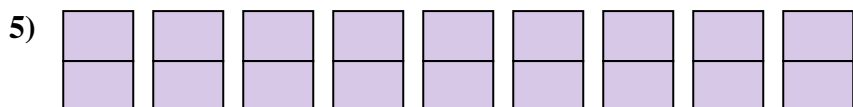
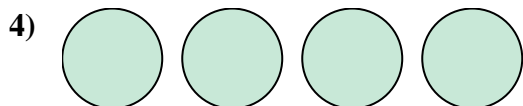
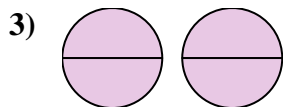
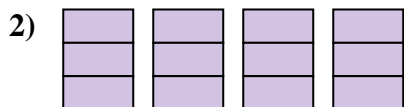
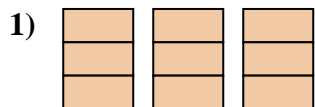
13. \_\_\_\_\_



14. \_\_\_\_\_



Write the shaded amount as a fraction.



Answers

1.  $\frac{9}{3}$

2.  $\frac{12}{3}$

3.  $\frac{4}{2}$

4.  $\frac{4}{1}$

5.  $\frac{18}{2}$

6.  $\frac{6}{1}$

7.  $\frac{6}{2}$

8.  $\frac{18}{3}$

9.  $\frac{8}{2}$

10.  $\frac{2}{1}$

11.  $\frac{14}{2}$

12.  $\frac{27}{3}$

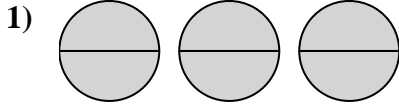
13.  $\frac{6}{3}$

14.  $\frac{9}{1}$

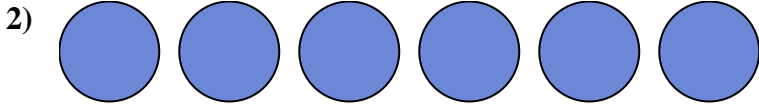


Write the shaded amount as a fraction.


Answers




1. \_\_\_\_\_



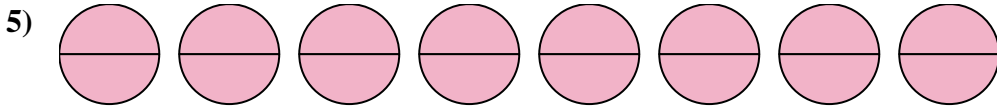
2. \_\_\_\_\_



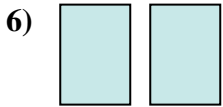
3. \_\_\_\_\_



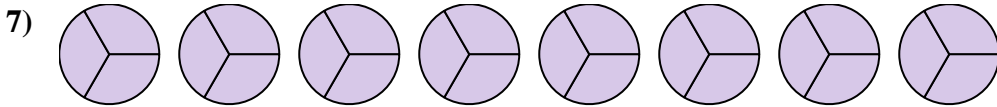
4. \_\_\_\_\_



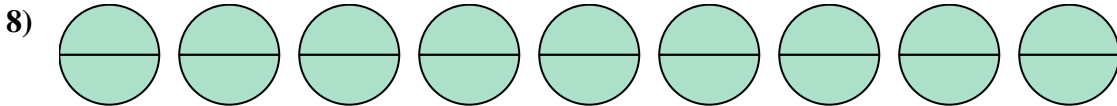
5. \_\_\_\_\_



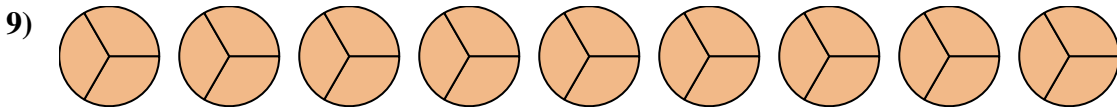
6. \_\_\_\_\_



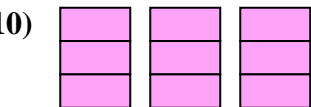
7. \_\_\_\_\_



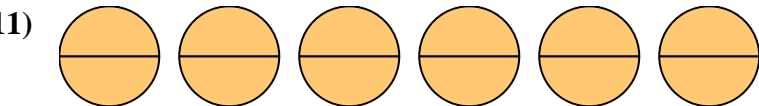
8. \_\_\_\_\_



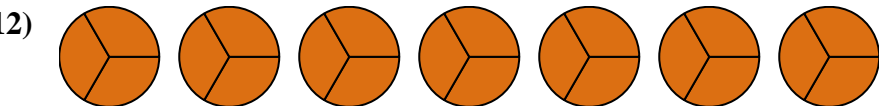
9. \_\_\_\_\_



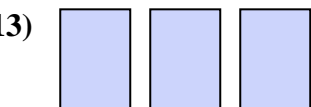
10. \_\_\_\_\_



11. \_\_\_\_\_



12. \_\_\_\_\_



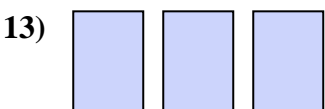
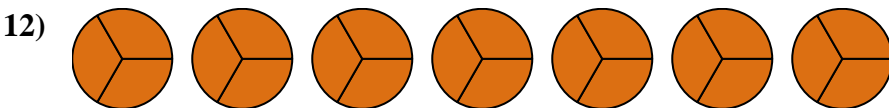
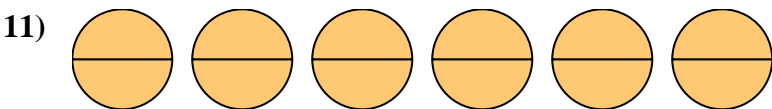
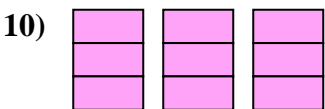
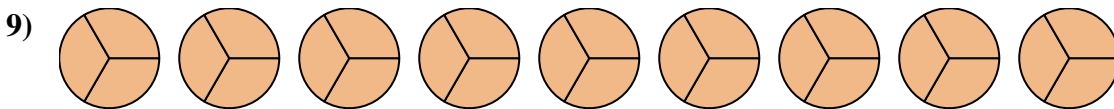
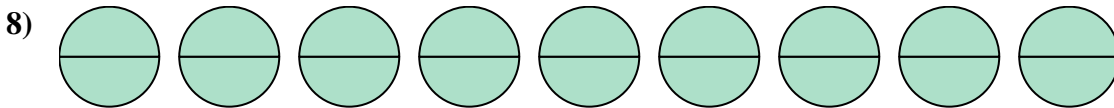
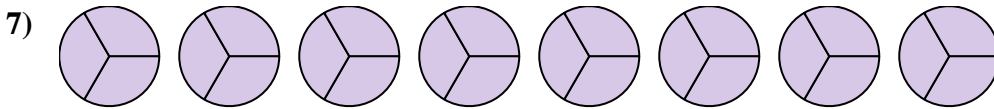
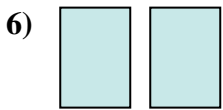
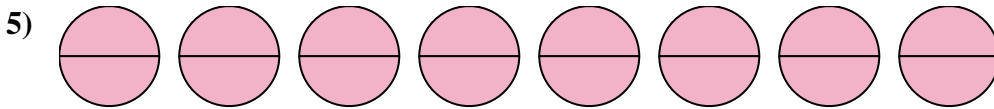

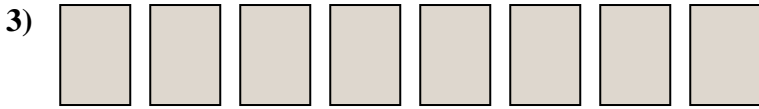
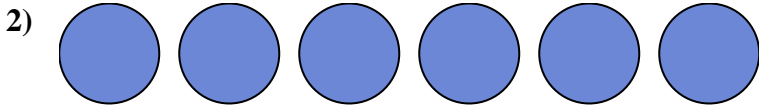
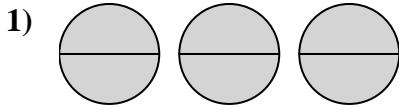
13. \_\_\_\_\_



14. \_\_\_\_\_



Write the shaded amount as a fraction.



Answers

1.  $\frac{6}{2}$

2.  $\frac{6}{1}$

3.  $\frac{8}{1}$

4.  $\frac{4}{1}$

5.  $\frac{16}{2}$

6.  $\frac{2}{1}$

7.  $\frac{24}{3}$

8.  $\frac{18}{2}$

9.  $\frac{27}{3}$

10.  $\frac{9}{3}$

11.  $\frac{12}{2}$

12.  $\frac{21}{3}$

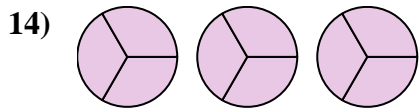
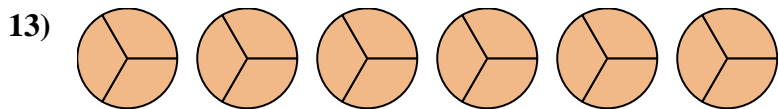
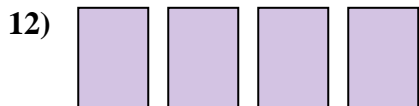
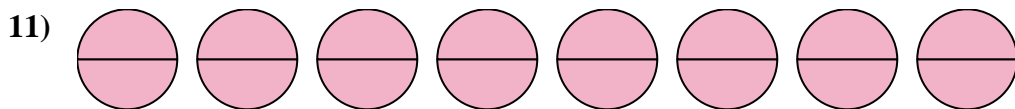
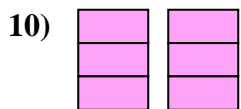
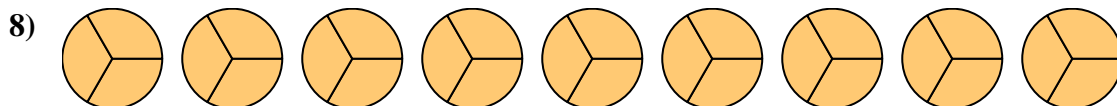
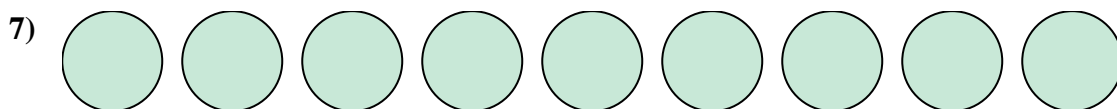

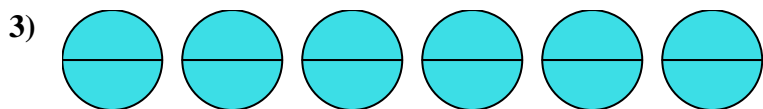
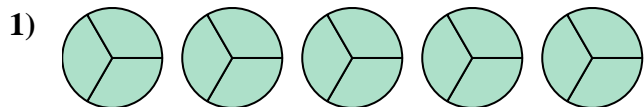
13.  $\frac{3}{1}$

14.  $\frac{6}{3}$





Write the shaded amount as a fraction.



Answers

1. \_\_\_\_\_

2. \_\_\_\_\_

3. \_\_\_\_\_

4. \_\_\_\_\_

5. \_\_\_\_\_

6. \_\_\_\_\_

7. \_\_\_\_\_

8. \_\_\_\_\_

9. \_\_\_\_\_

10. \_\_\_\_\_

11. \_\_\_\_\_

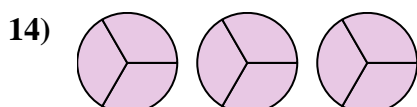
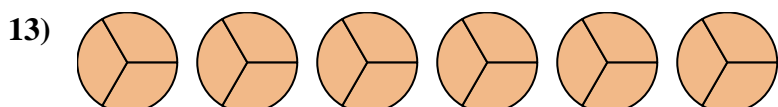
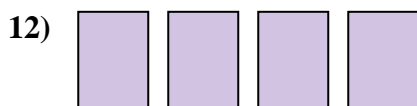
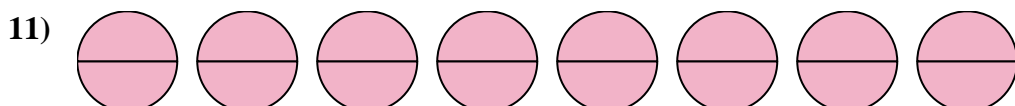
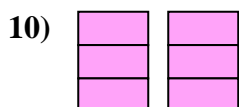
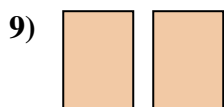
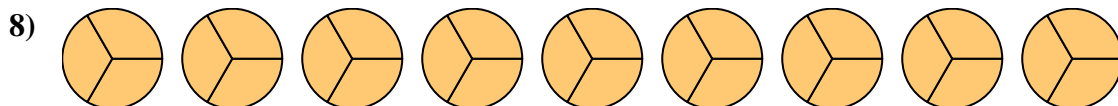
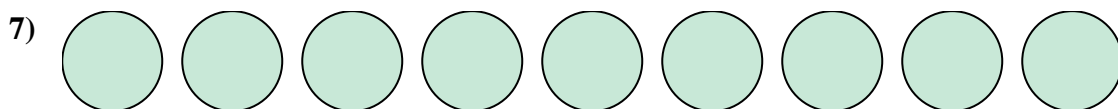
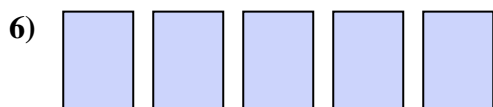

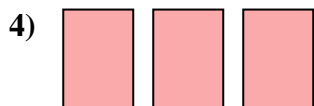
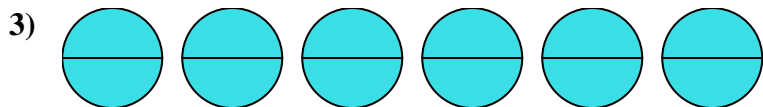
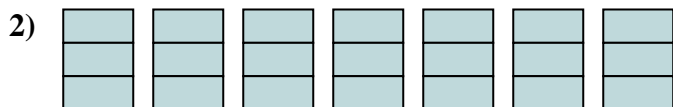
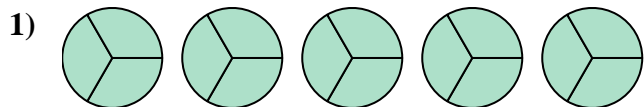
12. \_\_\_\_\_

13. \_\_\_\_\_

14. \_\_\_\_\_



Write the shaded amount as a fraction.



Answers

1.  $\frac{15}{3}$

2.  $\frac{21}{3}$

3.  $\frac{12}{2}$

4.  $\frac{3}{1}$

5.  $\frac{4}{2}$

6.  $\frac{5}{1}$

7.  $\frac{9}{1}$

8.  $\frac{27}{3}$

9.  $\frac{2}{1}$

10.  $\frac{6}{3}$

11.  $\frac{16}{2}$

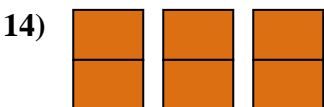
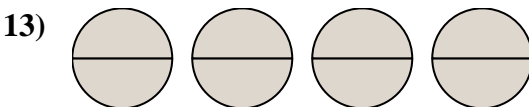
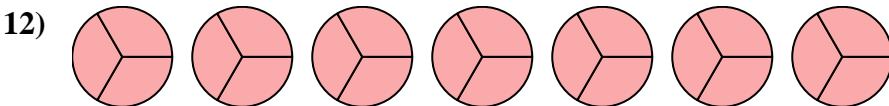
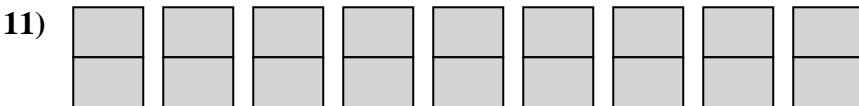
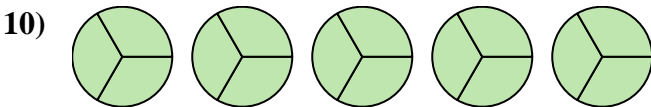
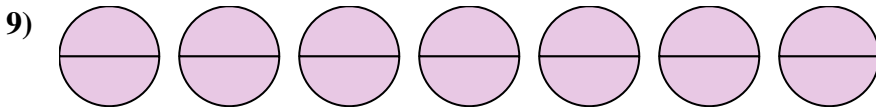
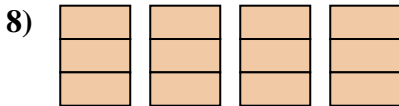
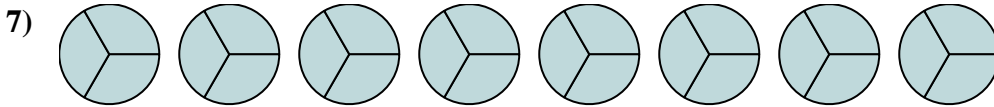
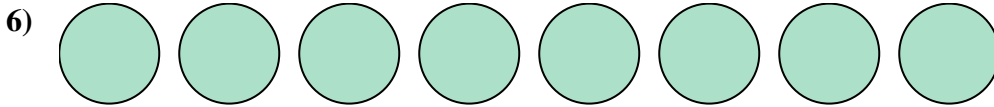
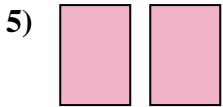

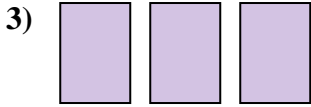
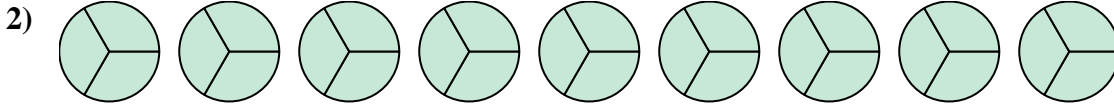
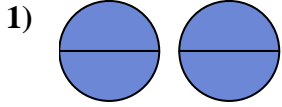
12.  $\frac{4}{1}$

13.  $\frac{18}{3}$

14.  $\frac{9}{3}$



Write the shaded amount as a fraction.



Answers

1. \_\_\_\_\_

2. \_\_\_\_\_

3. \_\_\_\_\_

4. \_\_\_\_\_

5. \_\_\_\_\_

6. \_\_\_\_\_

7. \_\_\_\_\_

8. \_\_\_\_\_

9. \_\_\_\_\_

10. \_\_\_\_\_

11. \_\_\_\_\_

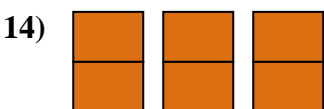
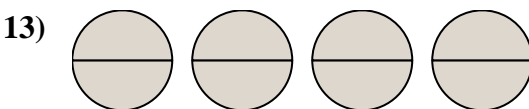
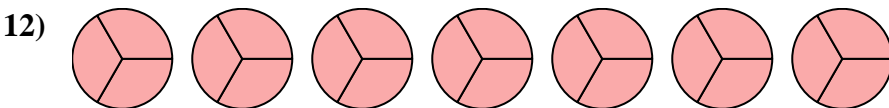
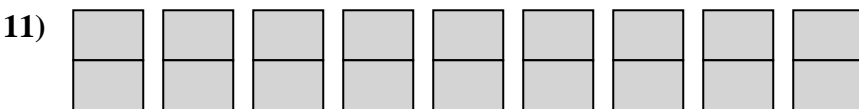
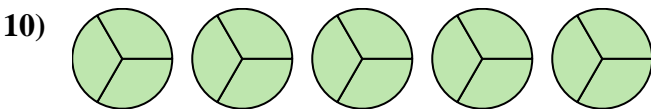
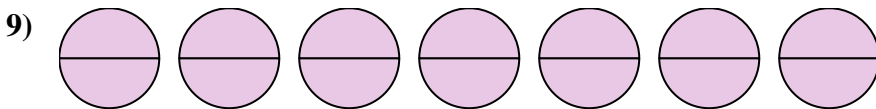
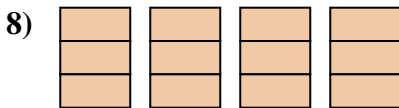
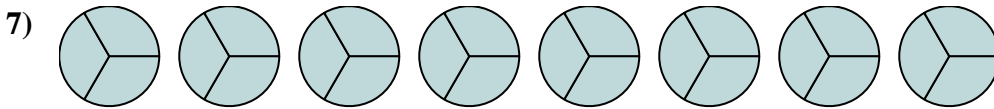
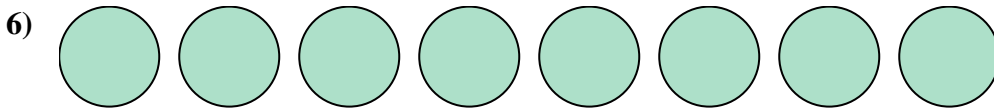
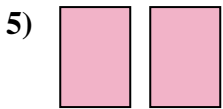

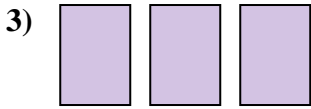
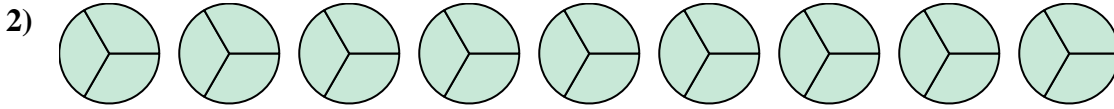
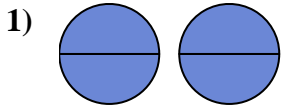
12. \_\_\_\_\_

13. \_\_\_\_\_

14. \_\_\_\_\_



Write the shaded amount as a fraction.



Answers

1.  $\frac{4}{2}$

2.  $\frac{27}{3}$

3.  $\frac{3}{1}$

4.  $\frac{7}{1}$

5.  $\frac{2}{1}$

6.  $\frac{8}{1}$

7.  $\frac{24}{3}$

8.  $\frac{12}{3}$

9.  $\frac{14}{2}$

10.  $\frac{15}{3}$

11.  $\frac{18}{2}$

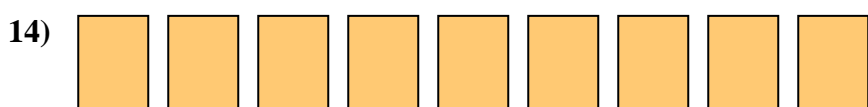
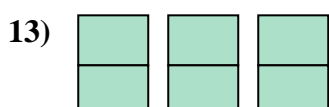
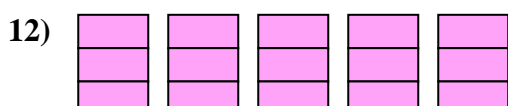
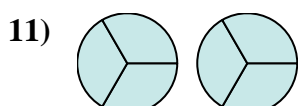
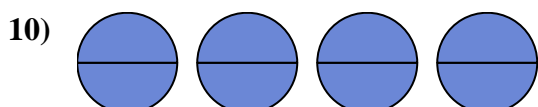
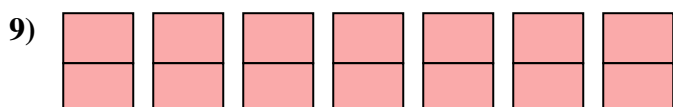
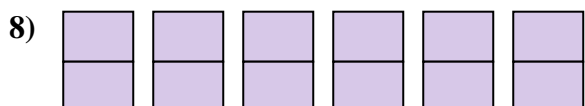
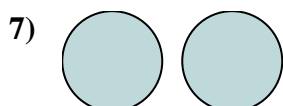
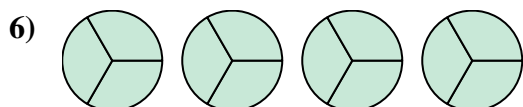
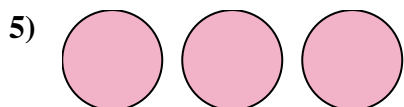
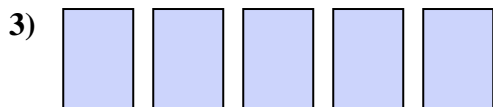

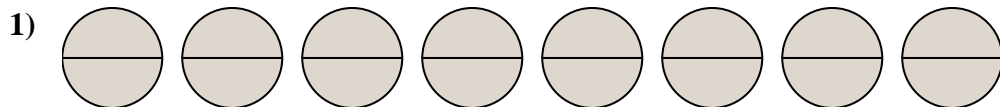
12.  $\frac{21}{3}$

13.  $\frac{8}{2}$

14.  $\frac{6}{2}$



Write the shaded amount as a fraction.



Answers

1. \_\_\_\_\_

2. \_\_\_\_\_

3. \_\_\_\_\_

4. \_\_\_\_\_

5. \_\_\_\_\_

6. \_\_\_\_\_

7. \_\_\_\_\_

8. \_\_\_\_\_

9. \_\_\_\_\_

10. \_\_\_\_\_

11. \_\_\_\_\_

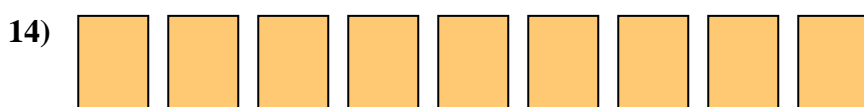
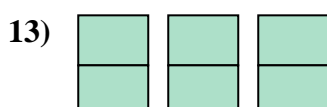
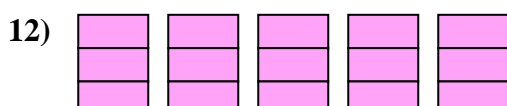
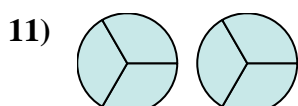
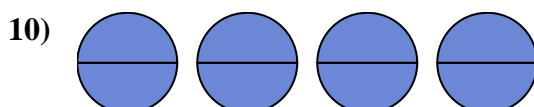
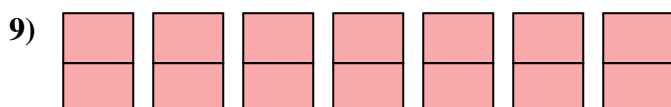
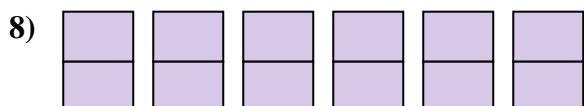
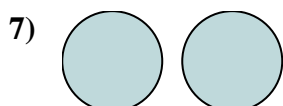
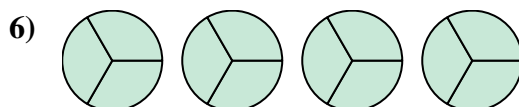
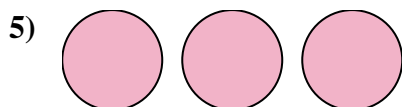
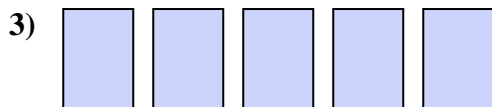

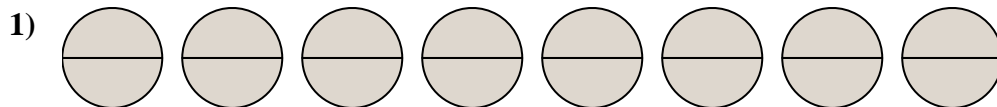
12. \_\_\_\_\_

13. \_\_\_\_\_

14. \_\_\_\_\_



Write the shaded amount as a fraction.



Answers

1.  $\frac{16}{2}$

2.  $\frac{6}{1}$

3.  $\frac{5}{1}$

4.  $\frac{4}{1}$

5.  $\frac{3}{1}$

6.  $\frac{12}{3}$

7.  $\frac{2}{1}$

8.  $\frac{12}{2}$

9.  $\frac{14}{2}$

10.  $\frac{8}{2}$

11.  $\frac{6}{3}$

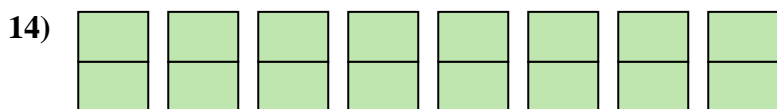
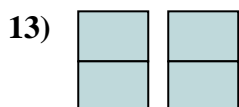
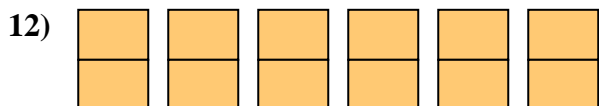
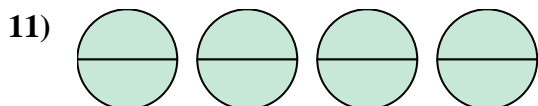
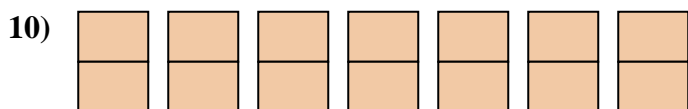
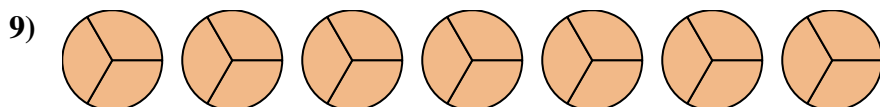
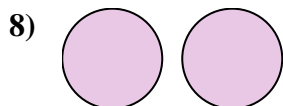
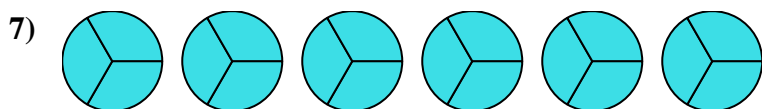
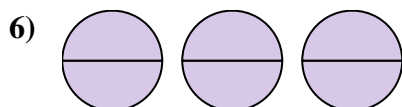
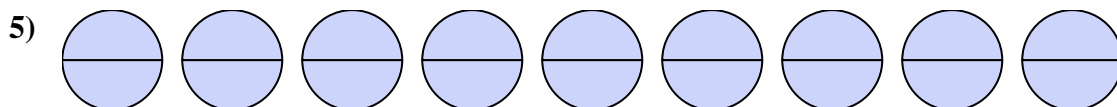
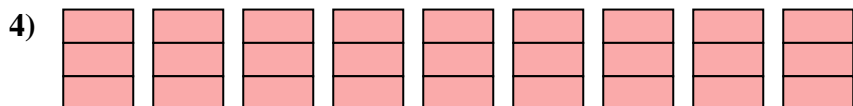
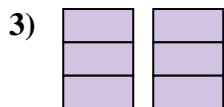
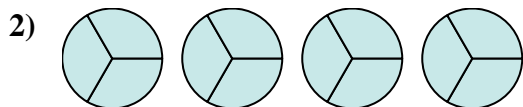
12.  $\frac{15}{3}$

13.  $\frac{6}{2}$

14.  $\frac{9}{1}$



Write the shaded amount as a fraction.



Answers

1. \_\_\_\_\_

2. \_\_\_\_\_

3. \_\_\_\_\_

4. \_\_\_\_\_

5. \_\_\_\_\_

6. \_\_\_\_\_

7. \_\_\_\_\_

8. \_\_\_\_\_

9. \_\_\_\_\_

10. \_\_\_\_\_

11. \_\_\_\_\_

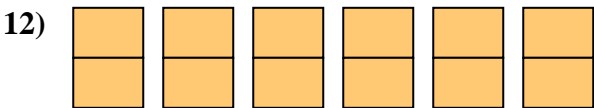
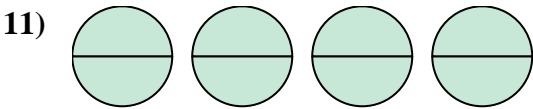
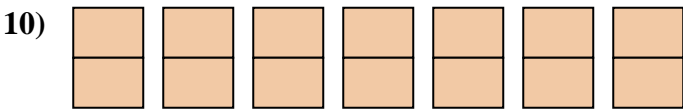
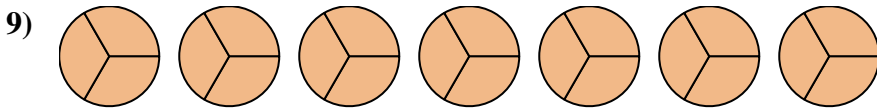
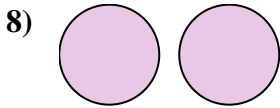
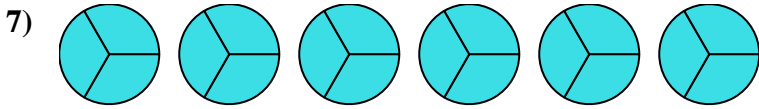
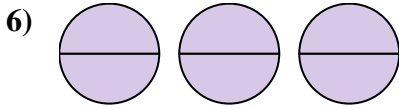
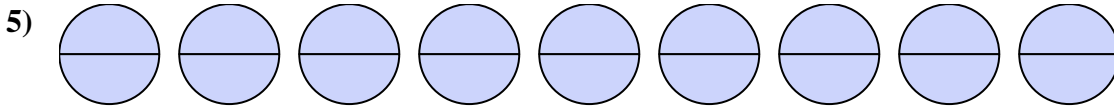
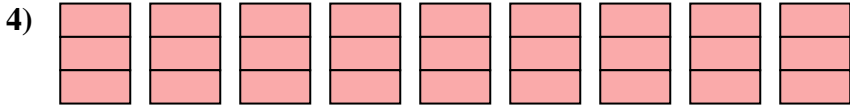
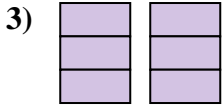
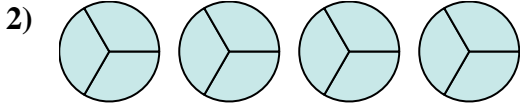
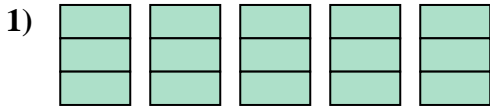
12. \_\_\_\_\_

13. \_\_\_\_\_

14. \_\_\_\_\_



Write the shaded amount as a fraction.



Answers

1.  $\frac{15}{3}$

2.  $\frac{12}{3}$

3.  $\frac{6}{3}$

4.  $\frac{27}{3}$

5.  $\frac{18}{2}$

6.  $\frac{6}{2}$

7.  $\frac{18}{3}$

8.  $\frac{2}{1}$

9.  $\frac{21}{3}$

10.  $\frac{14}{2}$

11.  $\frac{8}{2}$

12.  $\frac{12}{2}$

13.  $\frac{4}{2}$

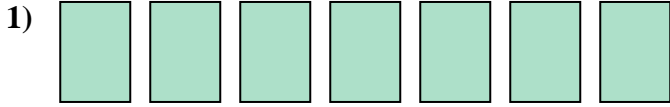
14.  $\frac{16}{2}$



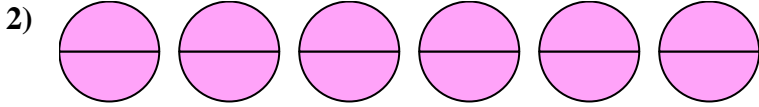


Write the shaded amount as a fraction.

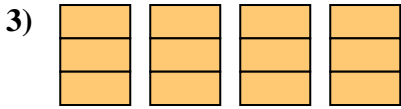
Answers



1. \_\_\_\_\_

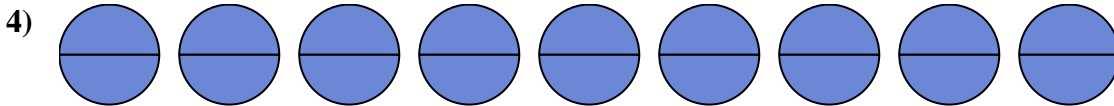


2. \_\_\_\_\_

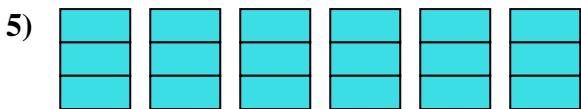


3. \_\_\_\_\_

4. \_\_\_\_\_

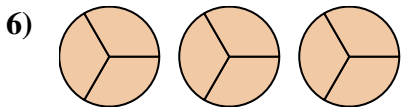


5. \_\_\_\_\_

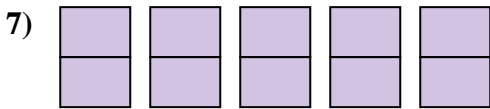


6. \_\_\_\_\_

7. \_\_\_\_\_

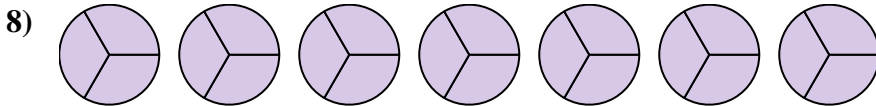


8. \_\_\_\_\_

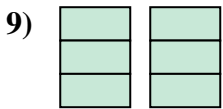


9. \_\_\_\_\_

10. \_\_\_\_\_

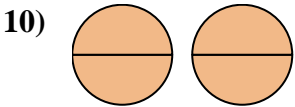


11. \_\_\_\_\_

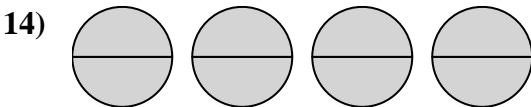
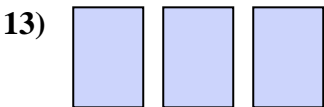
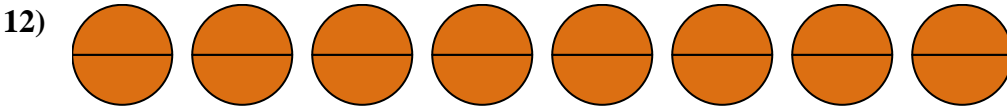
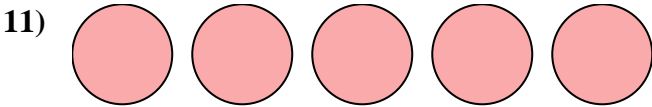


12. \_\_\_\_\_

13. \_\_\_\_\_

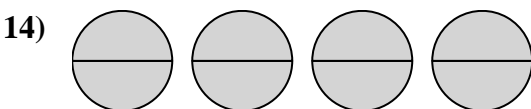
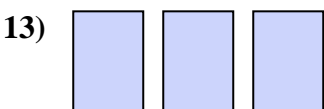
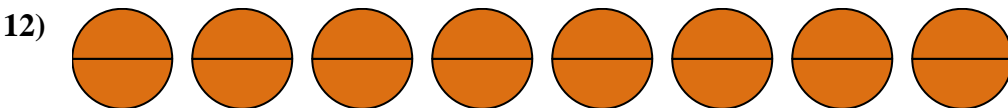
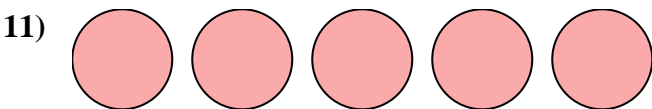
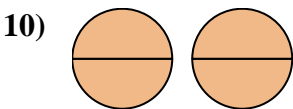
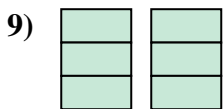
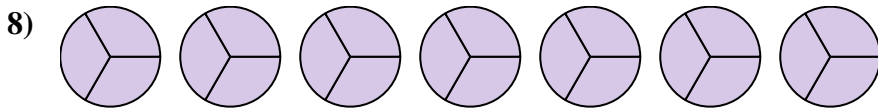
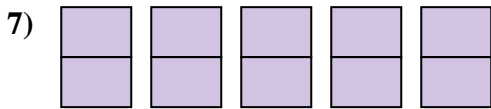
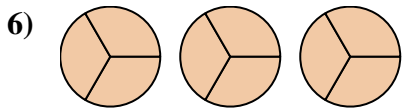
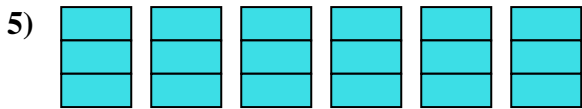
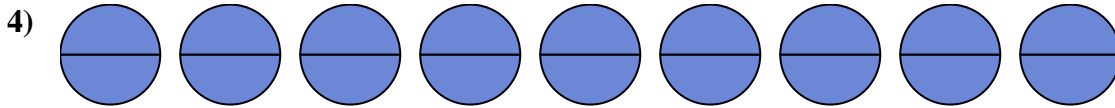
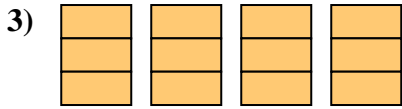
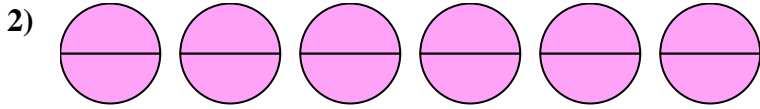
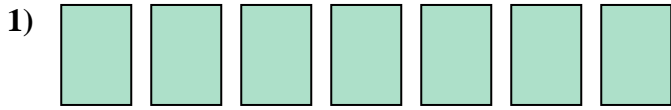


14. \_\_\_\_\_





Write the shaded amount as a fraction.



Answers

1.  $\frac{7}{1}$

2.  $\frac{12}{2}$

3.  $\frac{12}{3}$

4.  $\frac{18}{2}$

5.  $\frac{18}{3}$

6.  $\frac{9}{3}$

7.  $\frac{10}{2}$

8.  $\frac{21}{3}$

9.  $\frac{6}{3}$

10.  $\frac{4}{2}$

11.  $\frac{5}{1}$

12.  $\frac{16}{2}$


13.  $\frac{3}{1}$

14.  $\frac{8}{2}$

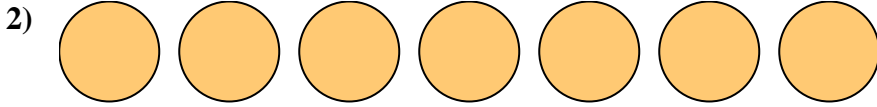


Write the shaded amount as a fraction.


Answers



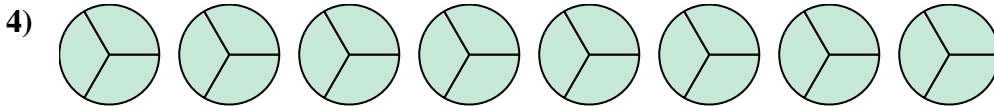
1. \_\_\_\_\_



2. \_\_\_\_\_



3. \_\_\_\_\_



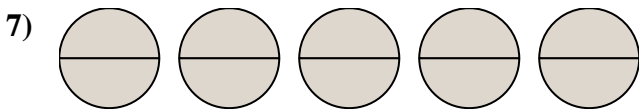
4. \_\_\_\_\_



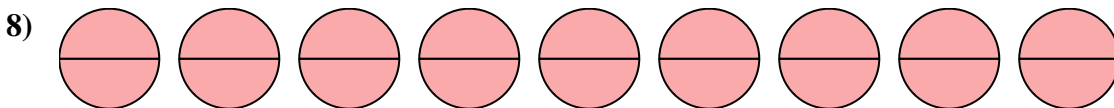
5. \_\_\_\_\_




6. \_\_\_\_\_



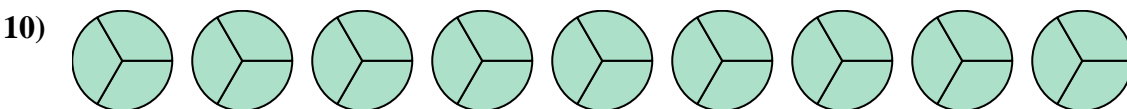
7. \_\_\_\_\_



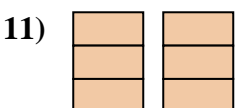
8. \_\_\_\_\_



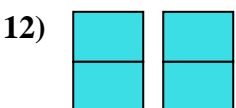
9. \_\_\_\_\_



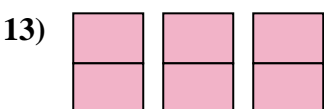
10. \_\_\_\_\_



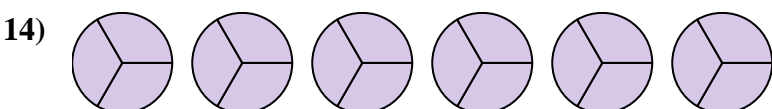
11. \_\_\_\_\_



12. \_\_\_\_\_



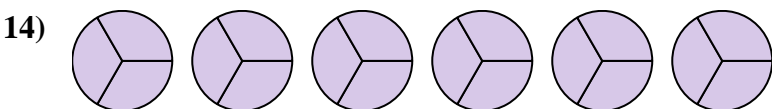
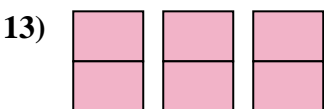
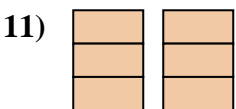
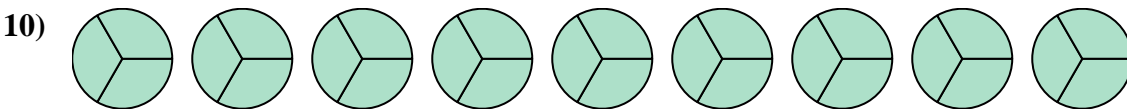

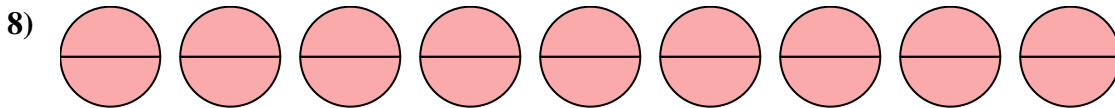
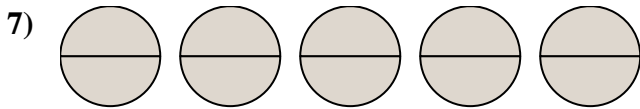
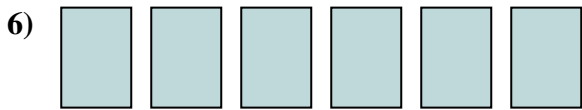
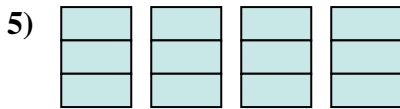
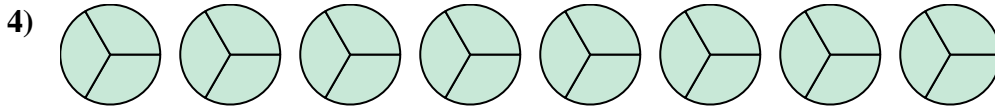

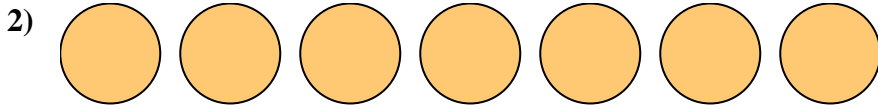

13. \_\_\_\_\_



14. \_\_\_\_\_



Write the shaded amount as a fraction.



Answers

1.  $\frac{12}{2}$

2.  $\frac{7}{1}$

3.  $\frac{4}{1}$

4.  $\frac{24}{3}$

5.  $\frac{12}{3}$

6.  $\frac{6}{1}$

7.  $\frac{10}{2}$

8.  $\frac{18}{2}$

9.  $\frac{3}{1}$

10.  $\frac{27}{3}$

11.  $\frac{6}{3}$

12.  $\frac{4}{2}$

13.  $\frac{6}{2}$

14.  $\frac{18}{3}$