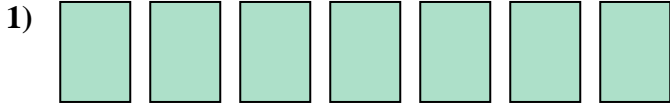


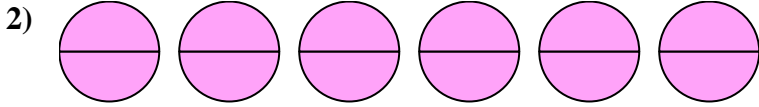


Write the shaded amount as a fraction.

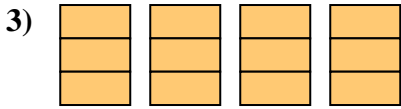
Answers



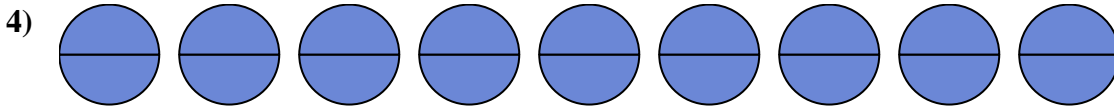
1. \_\_\_\_\_



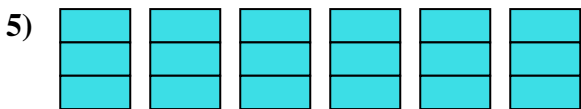
2. \_\_\_\_\_



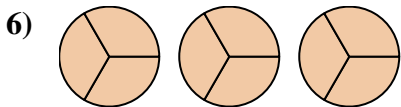
3. \_\_\_\_\_



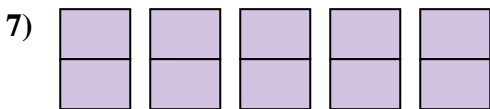
4. \_\_\_\_\_



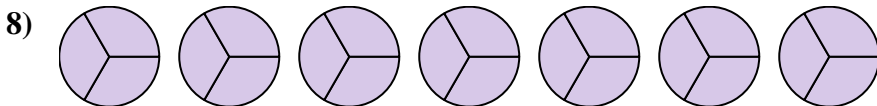
5. \_\_\_\_\_



6. \_\_\_\_\_



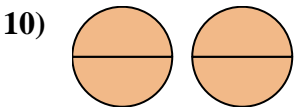
7. \_\_\_\_\_



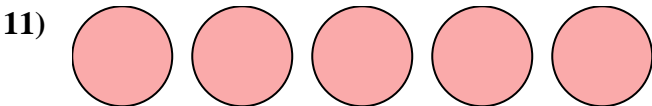
8. \_\_\_\_\_



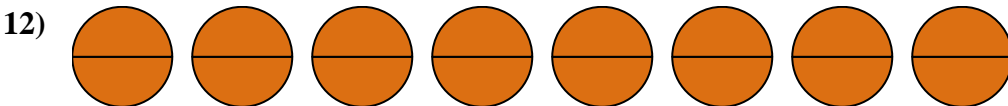
9. \_\_\_\_\_



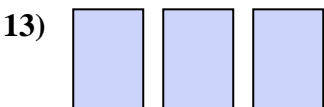
10. \_\_\_\_\_



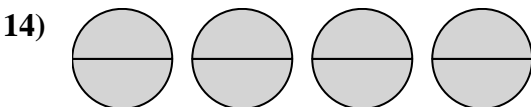
11. \_\_\_\_\_



12. \_\_\_\_\_



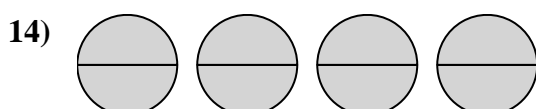
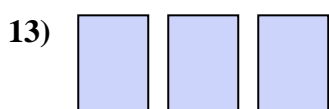
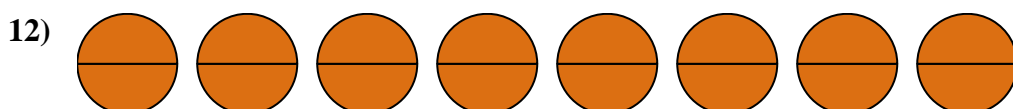
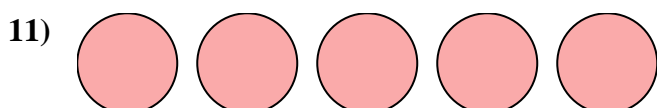
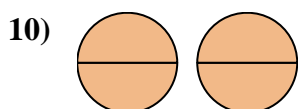
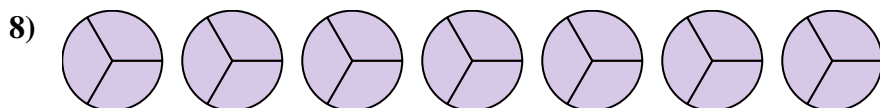
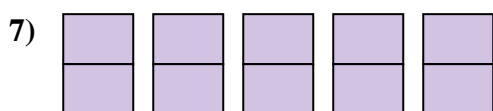
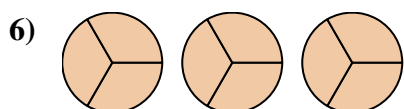
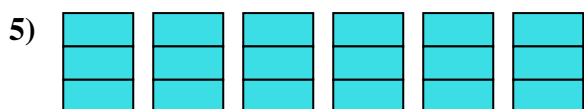
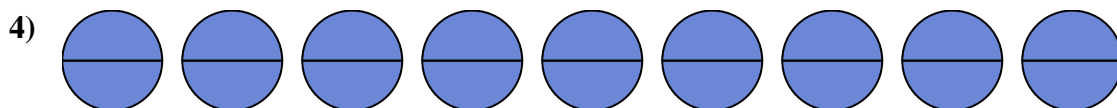
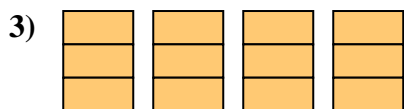
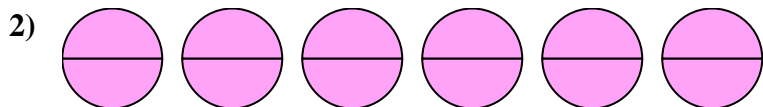
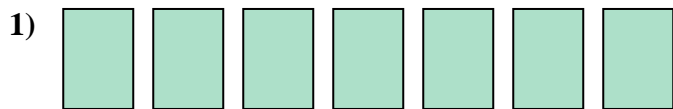
13. \_\_\_\_\_



14. \_\_\_\_\_



Write the shaded amount as a fraction.



Answers

1.  $\frac{7}{1}$

2.  $\frac{12}{2}$

3.  $\frac{12}{3}$

4.  $\frac{18}{2}$

5.  $\frac{18}{3}$

6.  $\frac{9}{3}$

7.  $\frac{10}{2}$

8.  $\frac{21}{3}$

9.  $\frac{6}{3}$

10.  $\frac{4}{2}$

11.  $\frac{5}{1}$

12.  $\frac{16}{2}$

13.  $\frac{3}{1}$

14.  $\frac{8}{2}$