



Solve each problem using a tape diagram.

Answers

1) Adam had 56 cherries. He ate 26 of them. How many cherries does Adam have left?

1. \_\_\_\_\_

2) A waiter has 74 customers. If 26 left, how many customers would the waiter still have?

2. \_\_\_\_\_

3) Rachel's hair was 39 centimeters long. If she cut off 22 centimeters, how long is her hair now?

3. \_\_\_\_\_

4. \_\_\_\_\_

4) At the zoo a cage had 71 snakes. If 29 were hiding, how many snakes were not hiding?

5. \_\_\_\_\_

6. \_\_\_\_\_

5) A clown had 91 balloons. He gave 41 away at a party. How many balloons would he have left over?

7. \_\_\_\_\_

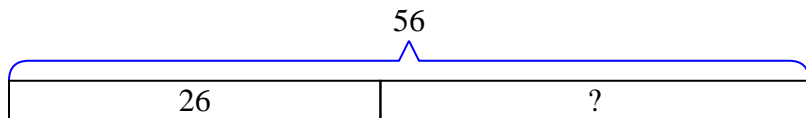
6) A pet store had 47 gerbils. If they sold 35 of them, how many would they have left?

7) Lana had 76 pieces of paper in her folder. She used 43 pieces. How many pieces does she have now?

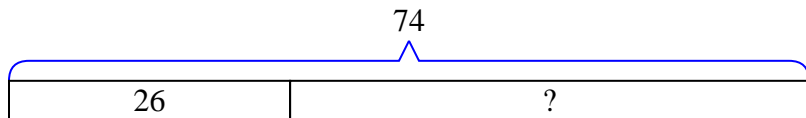


Solve each problem using a tape diagram.

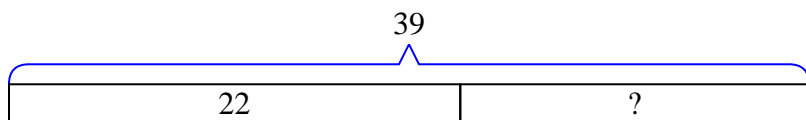
- 1) Adam had 56 cherries. He ate 26 of them. How many cherries does Adam have left?



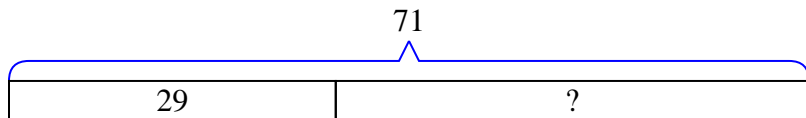
- 2) A waiter has 74 customers. If 26 left, how many customers would the waiter still have?



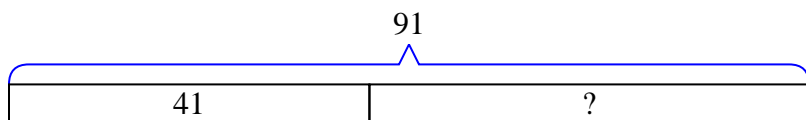
- 3) Rachel's hair was 39 centimeters long. If she cut off 22 centimeters, how long is her hair now?



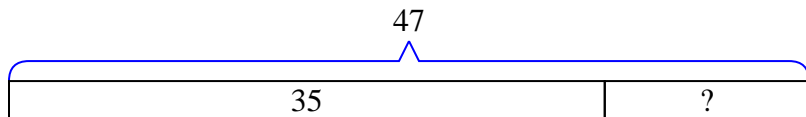
- 4) At the zoo a cage had 71 snakes. If 29 were hiding, how many snakes were not hiding?



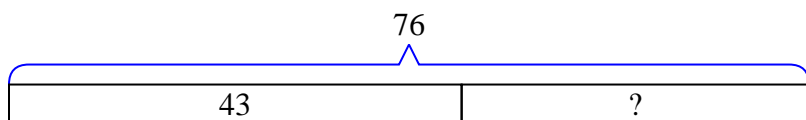
- 5) A clown had 91 balloons. He gave 41 away at a party. How many balloons would he have left over?



- 6) A pet store had 47 gerbils. If they sold 35 of them, how many would they have left?



- 7) Lana had 76 pieces of paper in her folder. She used 43 pieces. How many pieces does she have now?

**Answers**1. 302. 483. 174. 425. 506. 127. 33