



Solve each problem using a tape diagram.

Answers

Ex) Edward's Ice Cream Hut had Chocolate or Vanilla shakes. On the 4th of July they sold 204 shakes total with the ratio of chocolate to vanilla being 7:5. How many chocolate shakes did they sell?

Ex. 119

1) At the fair the ratio of male to females was 2:3. If there are 415 people at the fair how many males are there?

1. _____

2. _____

3. _____

4. _____

5. _____

2) In August, Olivia's Clothing Store sold 1,207 shirts with the ratio of short sleeve to long sleeve being 9:8. How many short sleeve shirts were sold?

3) A store had 705 sodas, both diet and regular. The ratio of diet sodas to regular sodas was 7:8. How many diet sodas were there?


4) Mike was looking at his streaming music stats. The ratio of songs he liked to disliked was 4:10. If he listened to 266 songs total how many did he like?

5) A cable company had 624 subscribers. The ratio of regular subscribers to premium subscribers was 9:4. How many regular subscribers did they have?




Solve each problem using a tape diagram.

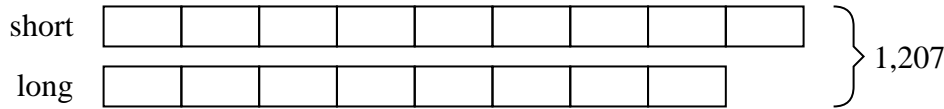
- Ex) Edward's Ice Cream Hut had Chocolate or Vanilla shakes. On the 4th of July they sold 204 shakes total with the ratio of chocolate to vanilla being 7:5. How many chocolate shakes did they sell?



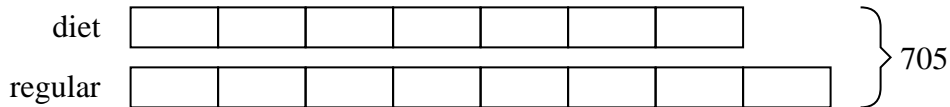
- 1) At the fair the ratio of male to females was 2:3. If there are 415 people at the fair how many males are there?



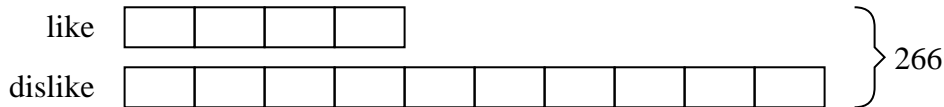
- 2) In August, Olivia's Clothing Store sold 1,207 shirts with the ratio of short sleeve to long sleeve being 9:8. How many short sleeve shirts were sold?



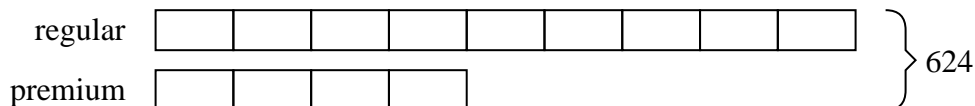
- 3) A store had 705 sodas, both diet and regular. The ratio of diet sodas to regular sodas was 7:8. How many diet sodas were there?



- 4) Mike was looking at his streaming music stats. The ratio of songs he liked to disliked was 4:10. If he listened to 266 songs total how many did he like?



- 5) A cable company had 624 subscribers. The ratio of regular subscribers to premium subscribers was 9:4. How many regular subscribers did they have?

AnswersEx. 1191. 1662. 6393. 3294. 765. 432