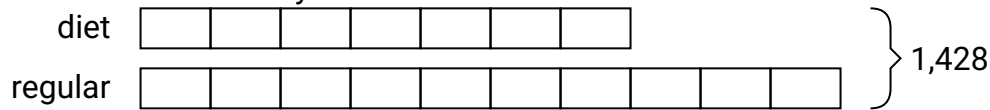


**Solve each problem using a tape diagram.****Answers**

- Ex)** A store had 1,428 sodas, both diet and regular. The ratio of diet sodas to regular sodas was 7:10. How many diet sodas were there?

Ex. 588

1. _____


2. _____

3. _____


4. _____

5. _____


- 1)** A cable company had 605 subscribers. The ratio of regular subscribers to premium subscribers was 3:8. How many regular subscribers did they have?



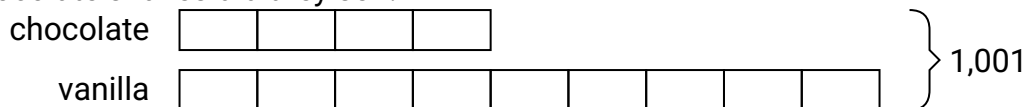
- 2)** Ned was looking at his streaming music stats. The ratio of songs he liked to disliked was 3:5. If he listened to 568 songs total how many did he like?



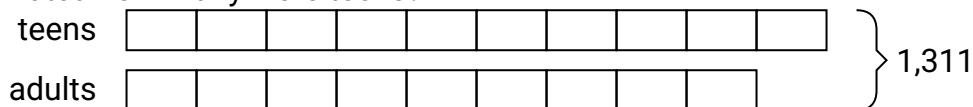
- 3)** In August, Bianca's Clothing Store sold 549 shirts with the ratio of short sleeve to long sleeve being 4:5. How many short sleeve shirts were sold?



- 4)** Mike's Ice Cream Hut had Chocolate or Vanilla shakes. On the 4th of July they sold 1,001 shakes total with the ratio of chocolate to vanilla being 4:9. How many chocolate shakes did they sell?



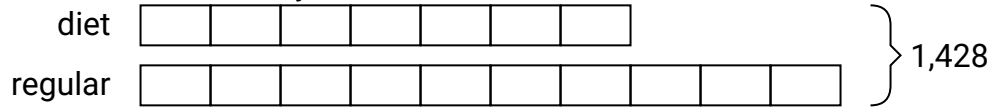
- 5)** During an local election the ratio of teens to adults who voted was 10:9. If 1,311 people voted how many were teens?



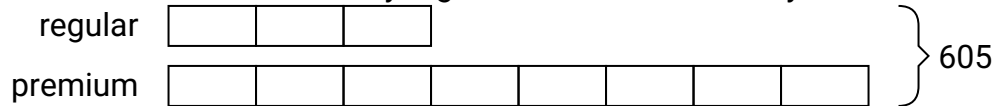


Solve each problem using a tape diagram.


- Ex) A store had 1,428 sodas, both diet and regular. The ratio of diet sodas to regular sodas was 7:10. How many diet sodas were there?




- 1) A cable company had 605 subscribers. The ratio of regular subscribers to premium subscribers was 3:8. How many regular subscribers did they have?



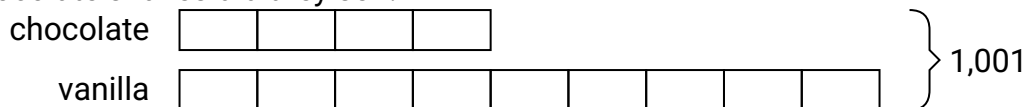
- 2) Ned was looking at his streaming music stats. The ratio of songs he liked to disliked was 3:5. If he listened to 568 songs total how many did he like?



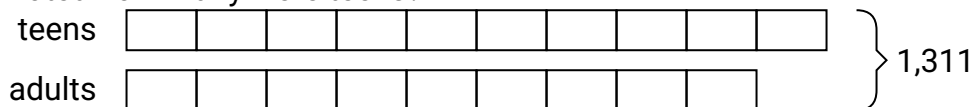
- 3) In August, Bianca's Clothing Store sold 549 shirts with the ratio of short sleeve to long sleeve being 4:5. How many short sleeve shirts were sold?



- 4) Mike's Ice Cream Hut had Chocolate or Vanilla shakes. On the 4th of July they sold 1,001 shakes total with the ratio of chocolate to vanilla being 4:9. How many chocolate shakes did they sell?



- 5) During an local election the ratio of teens to adults who voted was 10:9. If 1,311 people voted how many were teens?

**Answers**Ex. 5881. 1652. 2133. 2444. 3085. 690