

**Solve each problem.****Answers**

- 1) A box can hold six brownies. If a baker made thirty-five brownies, how many full boxes of brownies did he make?
- 2) A coat factory had thirty-five coats. If they wanted to put them into six boxes, with the same number of coats in each box, how many extra coats would they have left over?
- 3) A cafeteria was putting milk cartons into stacks. They had forty-five cartons and were putting them into stacks with six cartons in each stack. How many full stacks could they make?
- 4) A clown needed forty-five balloons for a party he was going to, but the balloons only came in packs of seven. How many packs of balloons would he need to buy?
- 5) Each house a carpenter builds needs six sinks. If he bought fifty-three sinks, how many houses would that cover?
- 6) Amy is making bead necklaces. She wants to use twenty-seven beads to make five necklaces. If she wants each necklace to have the same number of beads, how many beads will she have left over?

1. _____

2. _____

3. _____

4. _____

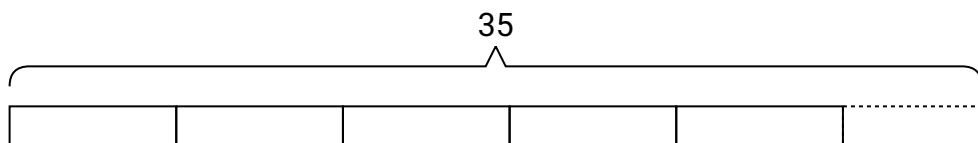
5. _____

6. _____

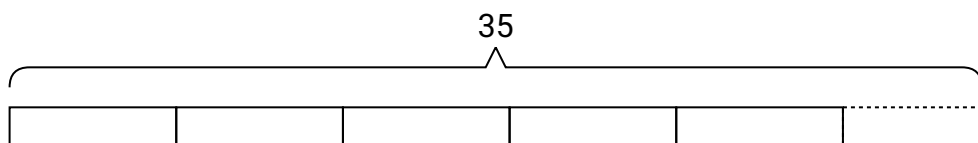


Solve each problem.

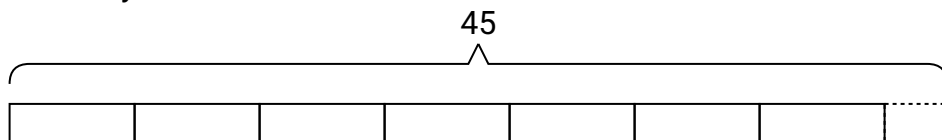
- 1) A box can hold six brownies. If a baker made thirty-five brownies, how many full boxes of brownies did he make?



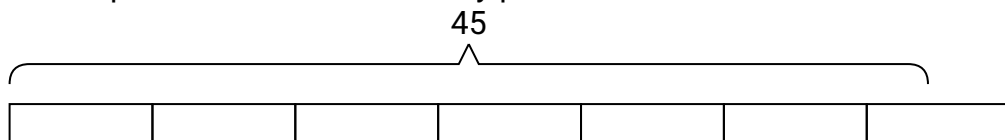
- 2) A coat factory had thirty-five coats. If they wanted to put them into six boxes, with the same number of coats in each box, how many extra coats would they have left over?



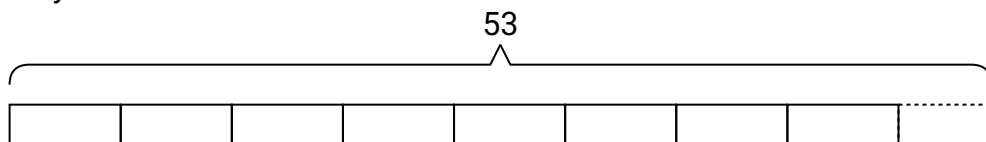
- 3) A cafeteria was putting milk cartons into stacks. They had forty-five cartons and were putting them into stacks with six cartons in each stack. How many full stacks could they make?



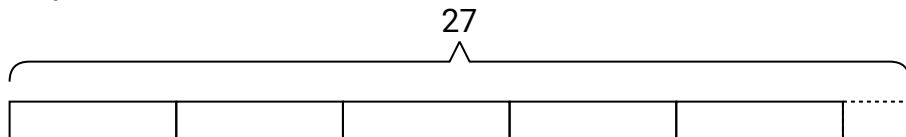
- 4) A clown needed forty-five balloons for a party he was going to, but the balloons only came in packs of seven. How many packs of balloons would he need to buy?



- 5) Each house a carpenter builds needs six sinks. If he bought fifty-three sinks, how many houses would that cover?



- 6) Amy is making bead necklaces. She wants to use twenty-seven beads to make five necklaces. If she wants each necklace to have the same number of beads, how many beads will she have left over?

**Answers**

1. **5**
2. **5**
3. **7**
4. **7**
5. **8**
6. **2**