



Determine if the angle shown is 'less', 'more' or 'equal' to 90°.

Answers

Ex)



1)



2)



Ex. less

1. _____

2. _____

3)



4)



5)



3. _____

4. _____

6)



7)



8)

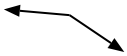


5. _____

6. _____

7. _____

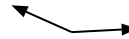
9)



10)



11)



8. _____

9. _____

10. _____

12)



13)



14)



11. _____

12. _____

13. _____

15)



16)



17)



14. _____

15. _____

16. _____

18)



19)



20)



17. _____


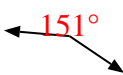
18. _____



19. _____



20. _____







Determine if the angle shown is 'less', 'more' or 'equal' to 90° .



Ex)  9) 

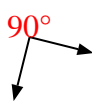

1)  10) 



2)  11) 



3)  12) 



4)  13) 


5)  14) 

6)  15) 

7)  16) 

8)  17) 

18)  19) 

20) 

Answers

- Ex. less
1. equal
2. more
3. less
4. less
5. equal
6. equal
7. equal
8. more
9. more
10. equal
11. more
12. more
13. more
14. less
15. equal
16. less
17. less
18. less
19. equal
20. equal