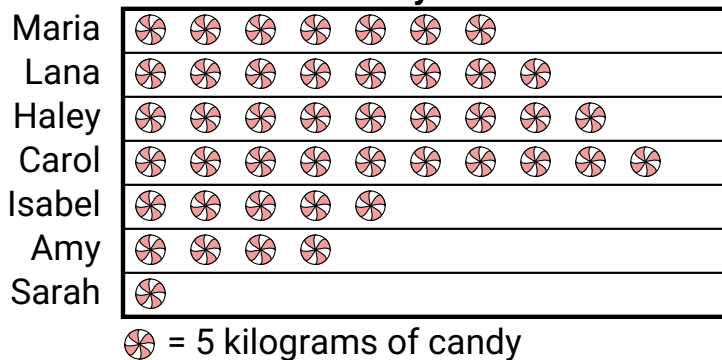


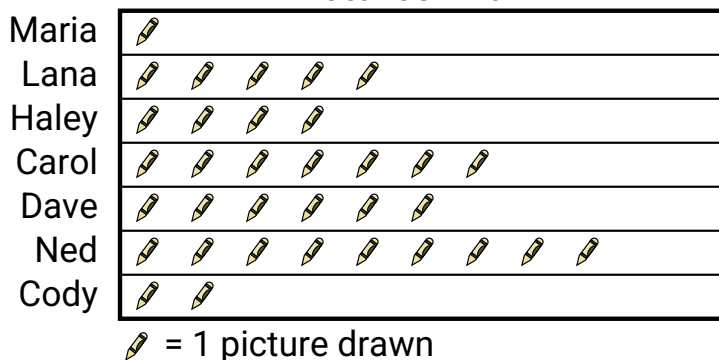


Maria and her friends were comparing the amount of candy they received on Halloween. They recorded their information in the pictograph below.

**Candy Haul**

- 1) How many kilograms of candy did Haley get?
- 2) Who got the most candy?
- 3) Who got the least amount of candy?
- 4) Who got more candy, Maria or Lana?
- 5) Who got exactly 50 kilograms of candy?

Several students were helping to decorate the school halls by drawing pictures to hang up. The pictograph below shows the number of pictures each student drew.

**Pictures Drawn**

- 6) Did Maria or Lana draw more pictures?
- 7) Who drew the fewest pictures?
- 8) Who drew the most pictures?
- 9) Who drew exactly 7 pictures?
- 10) How many pictures did Haley draw?






































**Answers**

1. \_\_\_\_\_
2. \_\_\_\_\_
3. \_\_\_\_\_
4. \_\_\_\_\_
5. \_\_\_\_\_
6. \_\_\_\_\_
7. \_\_\_\_\_
8. \_\_\_\_\_
9. \_\_\_\_\_
10. \_\_\_\_\_



Maria and her friends were comparing the amount of candy they received on Halloween. They recorded their information in the pictograph below.

**Candy Haul**





























|        |   |    |
|--------|---|----|
| Maria  |         | 35 |
| Lana   |          | 40 |
| Haley  |         | 45 |
| Carol  |         | 50 |
| Isabel |       | 25 |
| Amy    |      | 20 |
| Sarah  |    | 5  |

 = 5 kilograms of candy

- 1) How many kilograms of candy did Haley get?
- 2) Who got the most candy?
- 3) Who got the least amount of candy?
- 4) Who got more candy, Maria or Lana?
- 5) Who got exactly 50 kilograms of candy?

Several students were helping to decorate the school halls by drawing pictures to hang up. The pictograph below shows the number of pictures each student drew.

**Pictures Drawn**

|       |   |   |
|-------|---|---|
| Maria |    | 1 |
| Lana  |       | 5 |
| Haley |      | 4 |
| Carol |         | 7 |
| Dave  |        | 6 |
| Ned   |        | 9 |
| Cody  |     | 2 |

 = 1 picture drawn

- 6) Did Maria or Lana draw more pictures?
- 7) Who drew the fewest pictures?
- 8) Who drew the most pictures?
- 9) Who drew exactly 7 pictures?
- 10) How many pictures did Haley draw?

**Answers**

1. **45**
2. **Carol**
3. **Sarah**
4. **Lana**
5. **Carol**
6. **Lana**
7. **Maria**
8. **Ned**
9. **Carol**
10. **4**