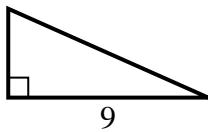


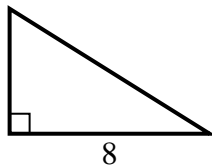


Find the value of X.

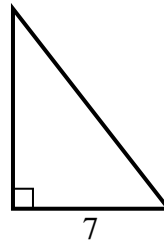
1) area = $18 u^2$



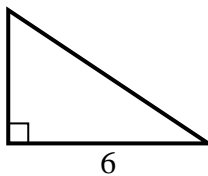
2) area = $20 u^2$



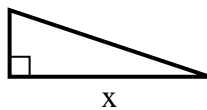
3) area = $31.5 u^2$



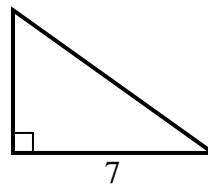
4) area = $12 u^2$



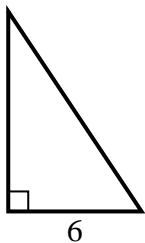
5) area = $13.5 u^2$



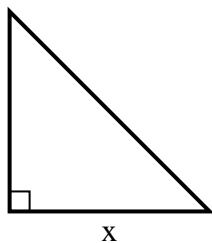
6) area = $17.5 u^2$



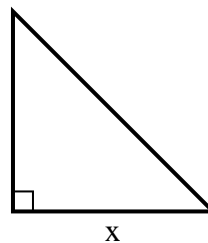
7) area = $27 u^2$



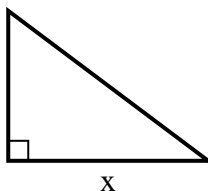
8) area = $18 u^2$



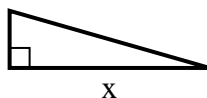
9) area = $32 u^2$



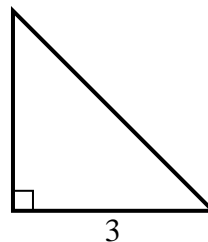
10) area = $6 u^2$



11) area = $7 u^2$



12) area = $4.5 u^2$



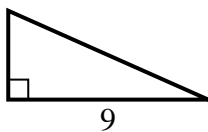
Answers

1. _____
2. _____
3. _____
4. _____
5. _____
6. _____
7. _____
8. _____
9. _____
10. _____
11. _____
12. _____

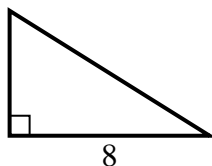


Find the value of X.

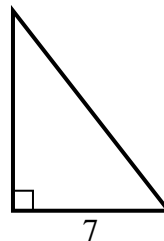
1) area = $18 u^2$



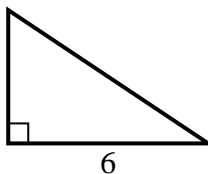
2) area = $20 u^2$



3) area = $31.5 u^2$



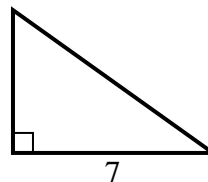
4) area = $12 u^2$



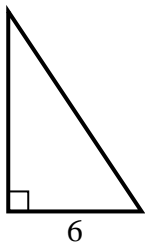
5) area = $13.5 u^2$



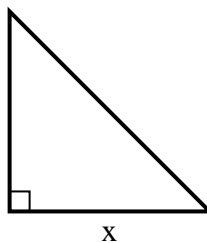
6) area = $17.5 u^2$



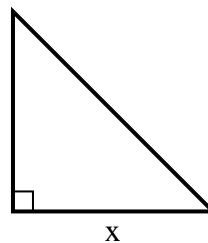
7) area = $27 u^2$



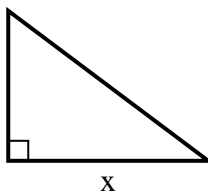
8) area = $18 u^2$



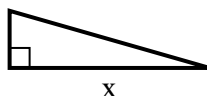
9) area = $32 u^2$



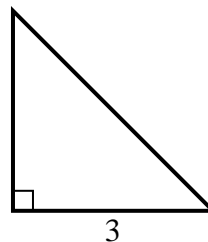
10) area = $6 u^2$



11) area = $7 u^2$



12) area = $4.5 u^2$



Answers

1. 4

2. 5

3. 9

4. 4

5. 9

6. 5

7. 9

8. 6

9. 8

10. 4

11. 7

12. 3