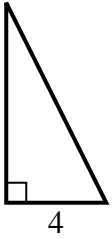


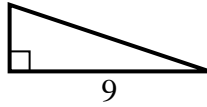


Find the value of X.

1) area = $16 u^2$



2) area = $13.5 u^2$



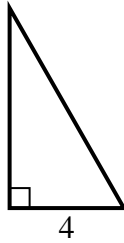
3) area = $6 u^2$



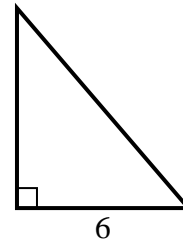
4) area = $8 u^2$



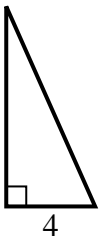
5) area = $14 u^2$



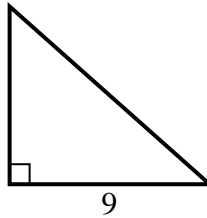
6) area = $21 u^2$



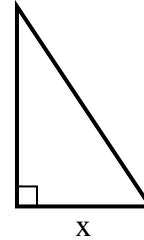
7) area = $18 u^2$



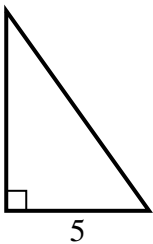
8) area = $36 u^2$



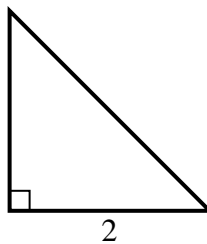
9) area = $27 u^2$



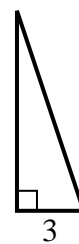
10) area = $17.5 u^2$



11) area = $2 u^2$



12) area = $13.5 u^2$



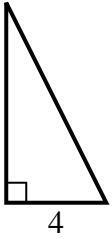
Answers

1. _____
2. _____
3. _____
4. _____
5. _____
6. _____
7. _____
8. _____
9. _____
10. _____
11. _____
12. _____

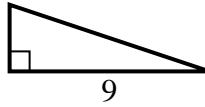


Find the value of X.

1) area = $16 u^2$



2) area = $13.5 u^2$



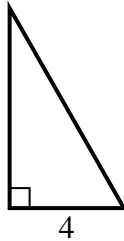
3) area = $6 u^2$



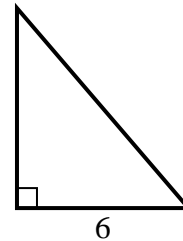
4) area = $8 u^2$



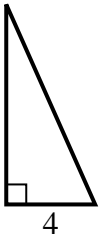
5) area = $14 u^2$



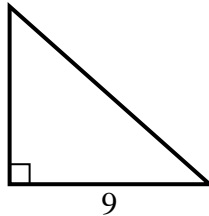
6) area = $21 u^2$



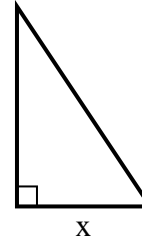
7) area = $18 u^2$



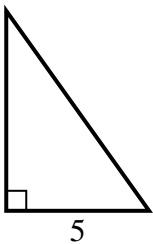
8) area = $36 u^2$



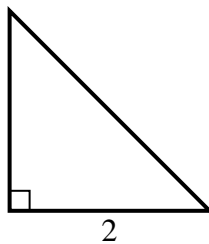
9) area = $27 u^2$



10) area = $17.5 u^2$



11) area = $2 u^2$



12) area = $13.5 u^2$



Answers

1. 8

2. 3

3. 2

4. 2

5. 7

6. 7

7. 9

8. 8

9. 6

10. 7

11. 2

12. 9