



Use the scale to answer each question.


Answers

1)



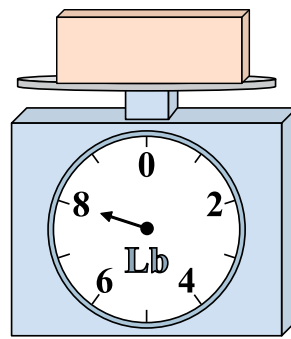
What is the weight (in pounds) of the block?

2)




If the block shown were 5 ounces heavier, how much would it weigh?

3)



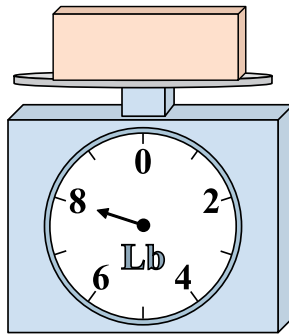
If the block shown were 5 pounds lighter, how much would it weigh?

4)




If the block shown were 8 ounces lighter, how much would it weigh?

5)



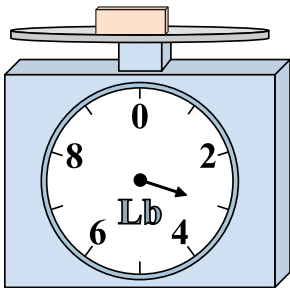
If you have 10 blocks that are the same weight, how many pounds total do the blocks weigh?

6)




If the block shown were 2 ounces heavier, how much would it weigh?

7)




If you have 9 blocks that are the same weight, how many pounds total do the blocks weigh?

8)



If the block shown were 3 ounces heavier, how much would it weigh?

9)

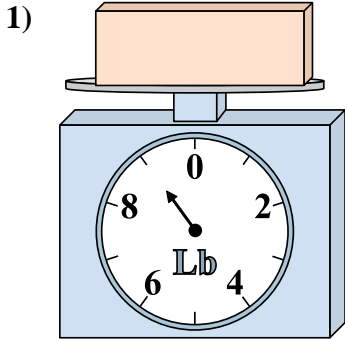


What is the weight (in pounds) of the block?

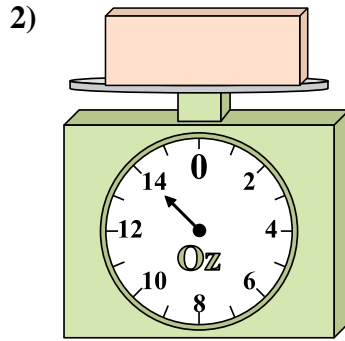
1. _____
2. _____
3. _____
4. _____
5. _____
6. _____
7. _____
8. _____
9. _____



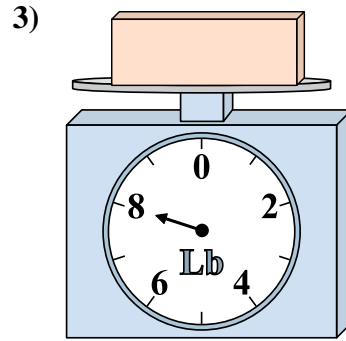
Use the scale to answer each question.



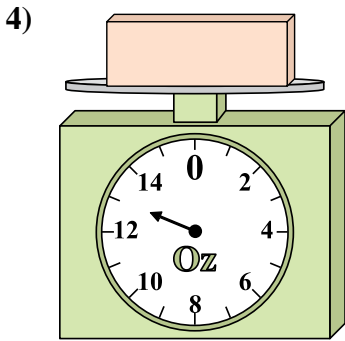
What is the weight (in pounds) of the block?



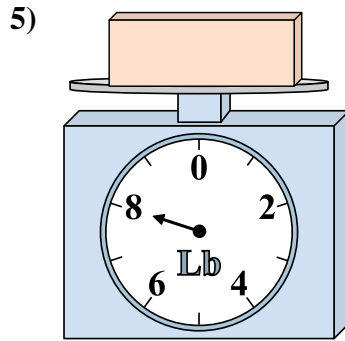
If the block shown were 5 ounces heavier, how much would it weigh?



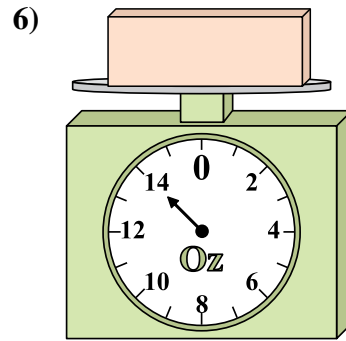
If the block shown were 5 pounds lighter, how much would it weigh?



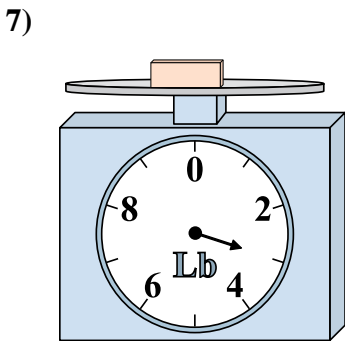
If the block shown were 8 ounces lighter, how much would it weigh?



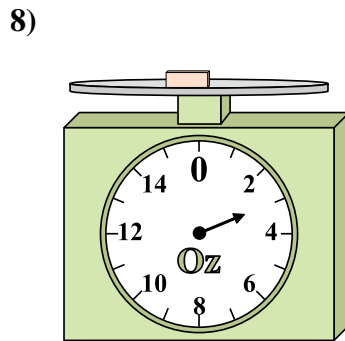
If you have 10 blocks that are the same weight, how many pounds total do the blocks weigh?



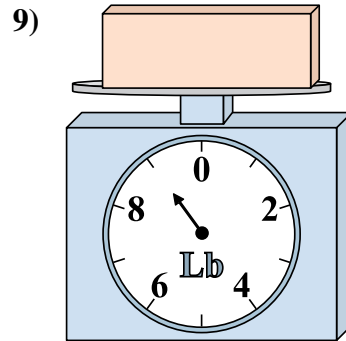
If the block shown were 2 ounces heavier, how much would it weigh?



If you have 9 blocks that are the same weight, how many pounds total do the blocks weigh?



If the block shown were 3 ounces heavier, how much would it weigh?



What is the weight (in pounds) of the block?

Answers

1. 9
2. 19
3. 3
4. 5
5. 80
6. 16
7. 27
8. 6
9. 9